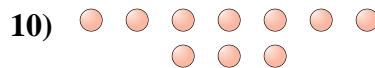
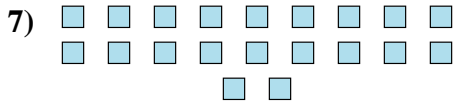
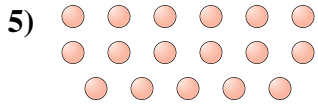
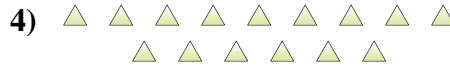
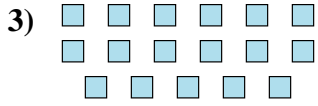
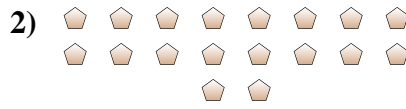




Determinar si el número de figuras en la caja es par o impar.



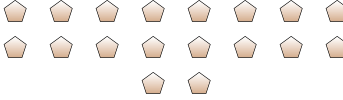
Respuestas

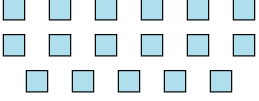
1. _____
2. _____
3. _____
4. _____
5. _____
6. _____
7. _____
8. _____
9. _____
10. _____




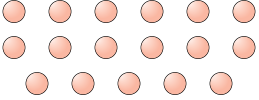
Determinar si el número de figuras en la caja es par o impar.


1) 
19

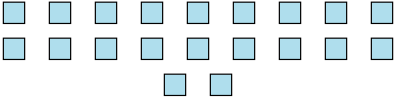
2) 
18


3) 
17

4) 
15

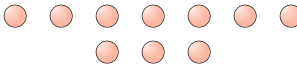
5) 
17

6) 
13

7) 
20

8) 
7

9) 
6

10) 
10

Respuestas

1. Impar
2. Par
3. Impar
4. Impar
5. Impar
6. Impar
7. Par
8. Impar
9. Par
10. Par