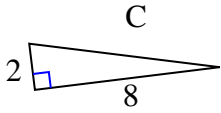




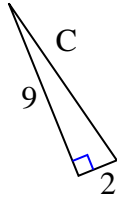
Encuentra el valor de 'C', redondea tu respuesta al centésimo más cercano.

Respuestas

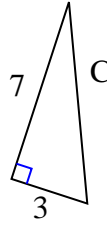
1)



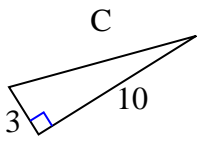
2)



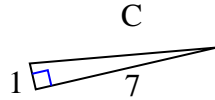
3)



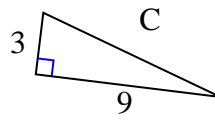
4)



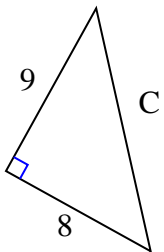
5)



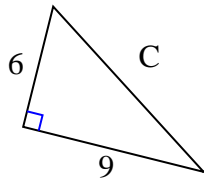
6)



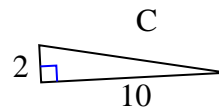
7)



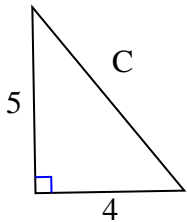
8)



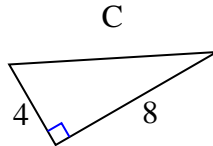
9)



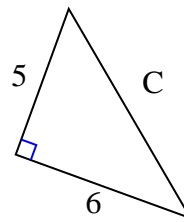
10)



11)



12)



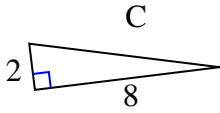
1. _____
2. _____
3. _____
4. _____
5. _____
6. _____
7. _____
8. _____
9. _____
10. _____
11. _____
12. _____



Encuentra el valor de 'C', redondea tu respuesta al centésimo más cercano.

Respuestas

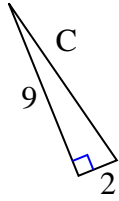
1)



$$4 + 64 = 68$$

$$\sqrt{68} = 8.25$$

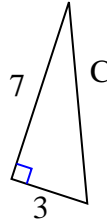
2)



$$81 + 4 = 85$$

$$\sqrt{85} = 9.22$$

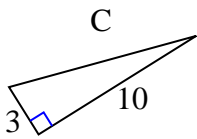
3)



$$49 + 9 = 58$$

$$\sqrt{58} = 7.62$$

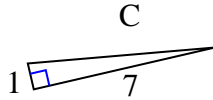
4)



$$9 + 100 = 109$$

$$\sqrt{109} = 10.44$$

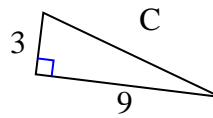
5)



$$1 + 49 = 50$$

$$\sqrt{50} = 7.07$$

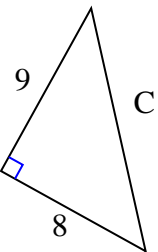
6)



$$9 + 81 = 90$$

$$\sqrt{90} = 9.49$$

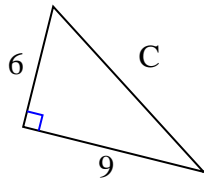
7)



$$81 + 64 = 145$$

$$\sqrt{145} = 12.04$$

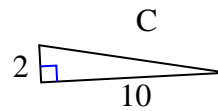
8)



$$36 + 81 = 117$$

$$\sqrt{117} = 10.82$$

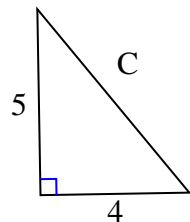
9)



$$4 + 100 = 104$$

$$\sqrt{104} = 10.2$$

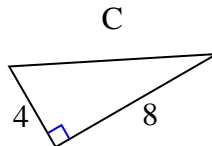
10)



$$25 + 16 = 41$$

$$\sqrt{41} = 6.4$$

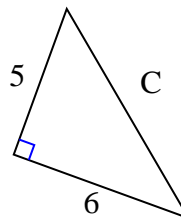
11)



$$16 + 64 = 80$$

$$\sqrt{80} = 8.94$$

12)



$$25 + 36 = 61$$

$$\sqrt{61} = 7.81$$

1. 8.25
2. 9.22
3. 7.62
4. 10.44
5. 7.07
6. 9.49
7. 12.04
8. 10.82
9. 10.2
10. 6.4
11. 8.94
12. 7.81