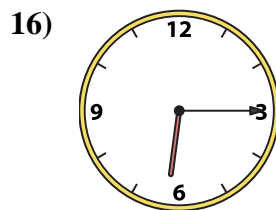
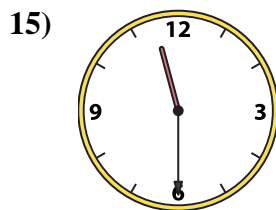
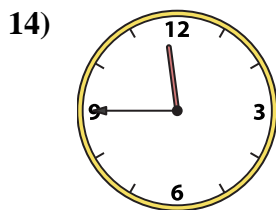
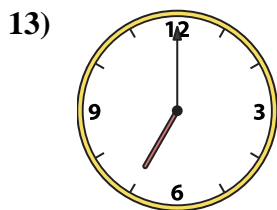
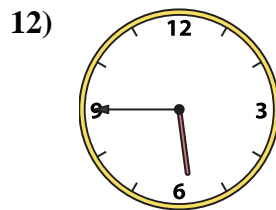
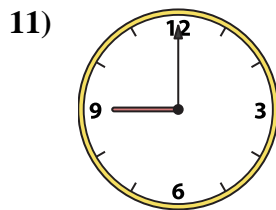
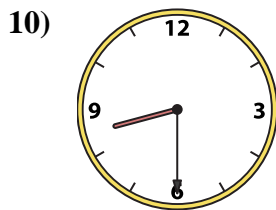
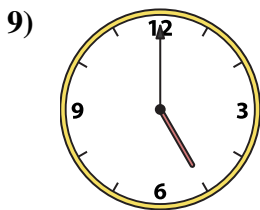
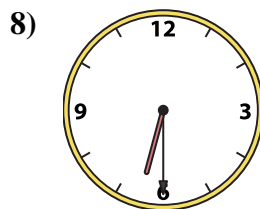
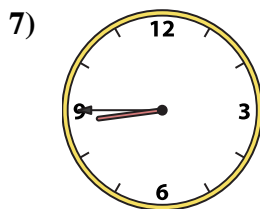

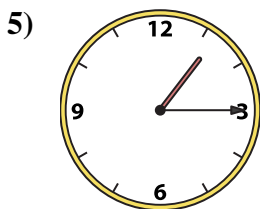
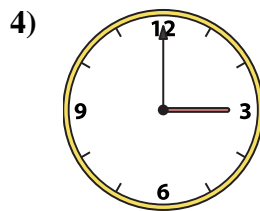
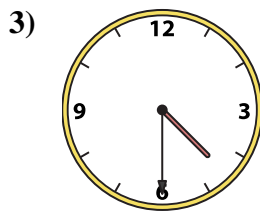
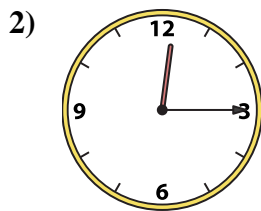
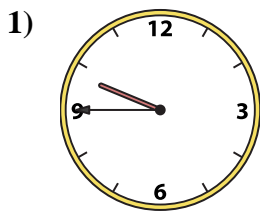




Emparejar el reloj analógico con el reloj digital correspondiente.

Respuestas



A. 9:45

B. 11:30

C. 5:45

D. 5:00

E. 4:30

F. 7:00

G. 11:45

H. 3:00

I. 8:30

J. 1:15

K. 12:15

L. 8:45

M. 6:15

N. 6:30

O. 12:45

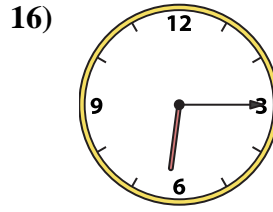
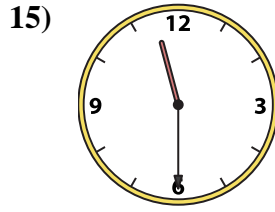
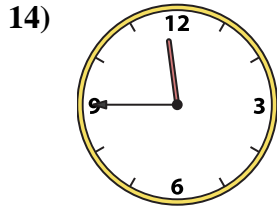
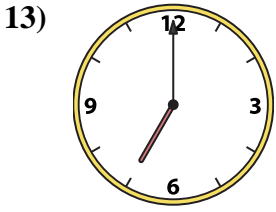
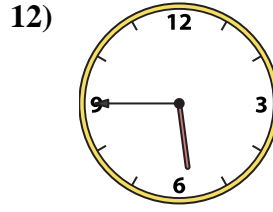
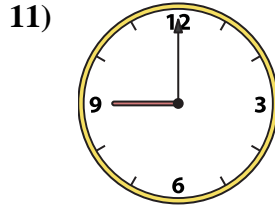
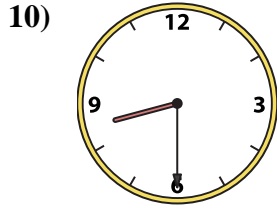
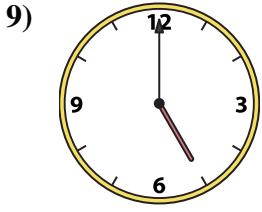
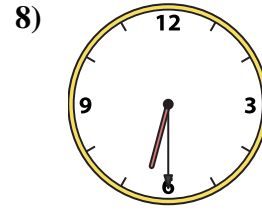
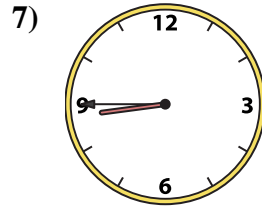
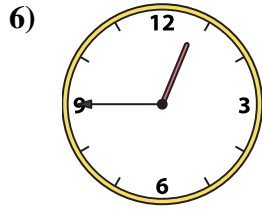

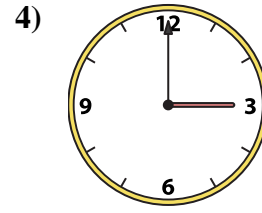
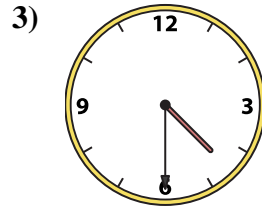
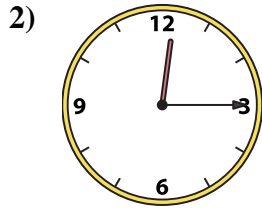
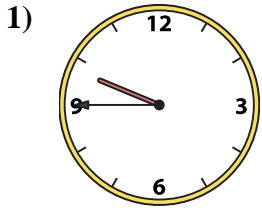
P. 9:00

- 1. _____
- 2. _____
- 3. _____
- 4. _____
- 5. _____
- 6. _____
- 7. _____
- 8. _____
- 9. _____
- 10. _____
- 11. _____
- 12. _____
- 13. _____
- 14. _____
- 15. _____
- 16. _____



Emparejar el reloj analógico con el reloj digital correspondiente.

Respuestas



A. 9:45

B. 11:30

C. 5:45

D. 5:00

E. 4:30

F. 7:00

G. 11:45

H. 3:00

I. 8:30

J. 1:15

K. 12:15

L. 8:45

M. 6:15

N. 6:30

O. 12:45

P. 9:00

- 1. **A**
- 2. **K**
- 3. **E**
- 4. **H**
- 5. **J**
- 6. **O**
- 7. **L**
- 8. **N**
- 9. **D**
- 10. **I**
- 11. **P**
- 12. **C**
- 13. **F**
- 14. **G**
- 15. **B**
- 16. **M**