



**Resuelve cada problema.**

**Respuestas**

1) Inicio: \_\_\_\_\_  
 Transcurrido: 2 hrs y 30 mins  
 Final: 1:20

1. \_\_\_\_\_

2) Inicio: \_\_\_\_\_  
 Transcurrido: 1 hr y 25 mins  
 Final: 6:35

2. \_\_\_\_\_

3) Inicio: \_\_\_\_\_  
 Transcurrido: 1 hr y 35 mins  
 Final: 1:15

3. \_\_\_\_\_

4) Inicio: \_\_\_\_\_  
 Transcurrido: 2 hrs y 15 mins  
 Final: 6:35

4. \_\_\_\_\_

5) Inicio: \_\_\_\_\_  
 Transcurrido: 2 hrs y 25 mins  
 Final: 7:40

5. \_\_\_\_\_

6) Inicio: \_\_\_\_\_  
 Transcurrido: 2 hrs y 35 mins  
 Final: 12:55

6. \_\_\_\_\_

7) Inicio: \_\_\_\_\_  
 Transcurrido: 2 hrs y 50 mins  
 Final: 3:35

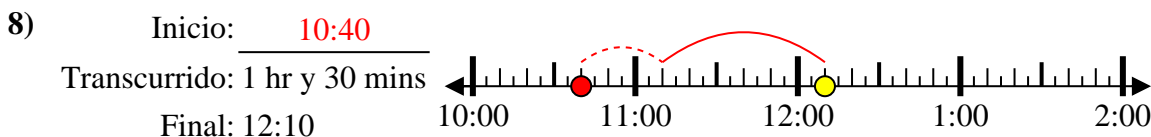
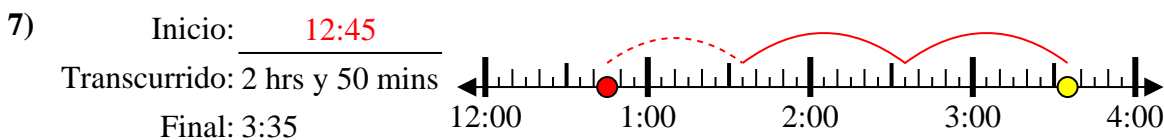
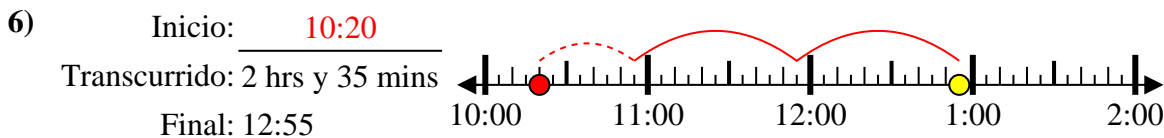
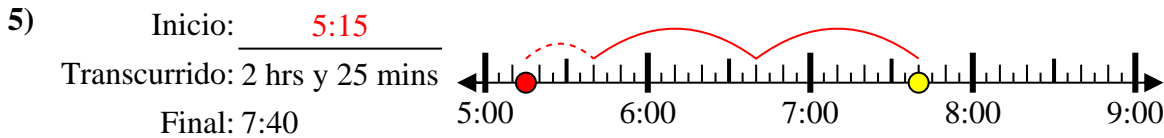
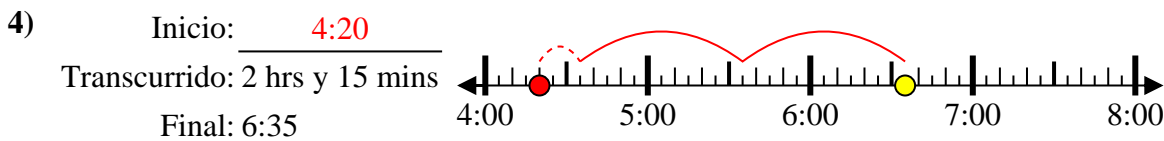
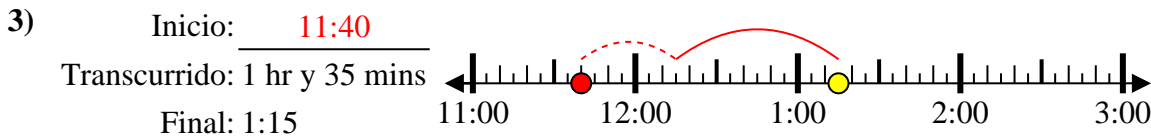
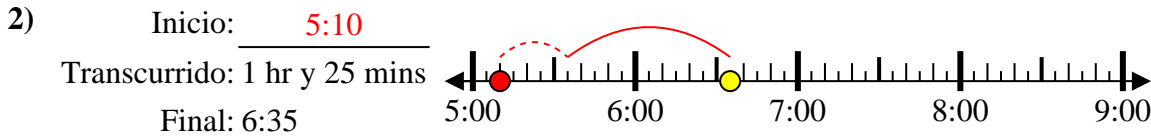
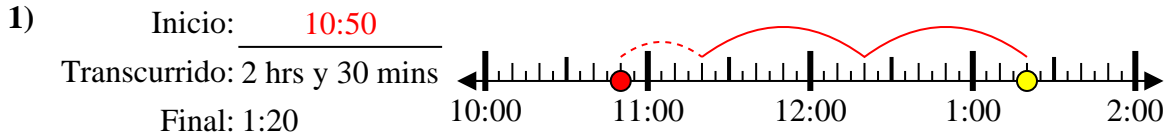
7. \_\_\_\_\_

8) Inicio: \_\_\_\_\_  
 Transcurrido: 1 hr y 30 mins  
 Final: 12:10

8. \_\_\_\_\_



Resuelve cada problema.



**Respuestas**

1. 10:50

2. 5:10

3. 11:40

4. 4:20

5. 5:15

6. 10:20

7. 12:45

8. 10:40