



Resuelve cada problema.

Respuestas

1) Inicio: _____
 Transcurrido: 2 hrs y 30 mins
 Final: 12:05

1. _____

2) Inicio: _____
 Transcurrido: 1 hr y 45 mins
 Final: 2:35

2. _____

3) Inicio: _____
 Transcurrido: 1 hr y 25 mins
 Final: 11:40

3. _____

4) Inicio: _____
 Transcurrido: 1 hr y 45 mins
 Final: 8:10

4. _____

5) Inicio: _____
 Transcurrido: 1 hr y 15 mins
 Final: 10:25

5. _____

6) Inicio: _____
 Transcurrido: 2 hrs y 15 mins
 Final: 2:00

6. _____

7) Inicio: _____
 Transcurrido: 1 hr y 40 mins
 Final: 2:00

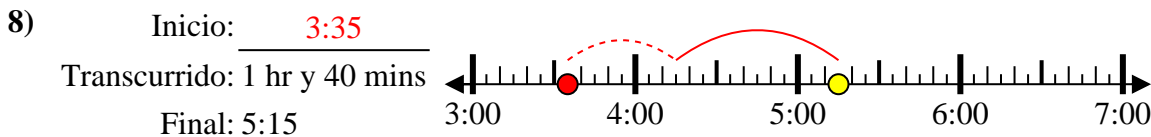
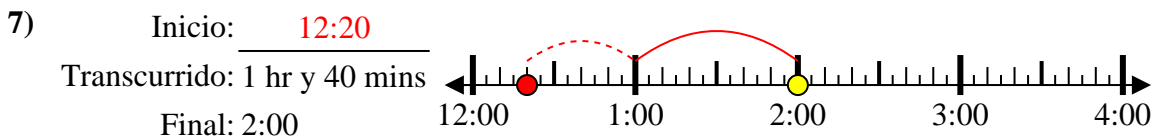
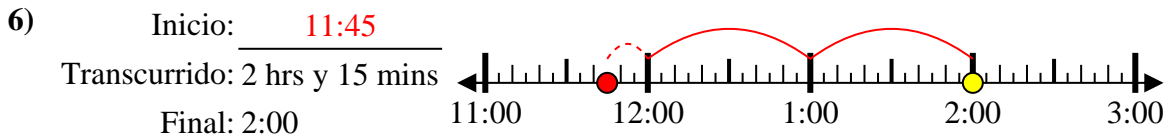
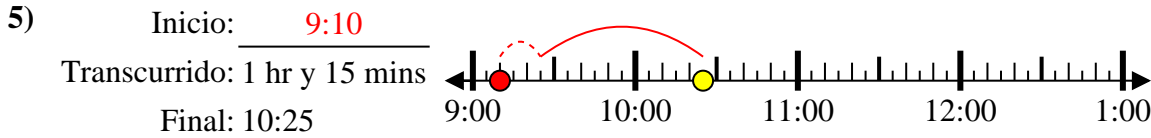
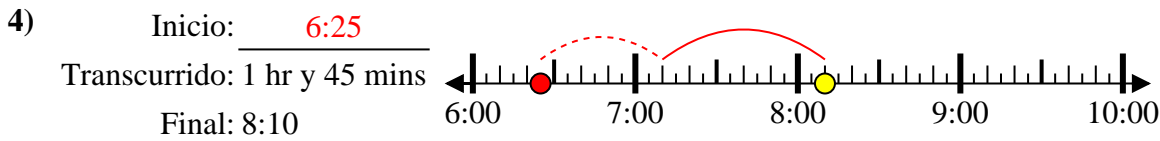
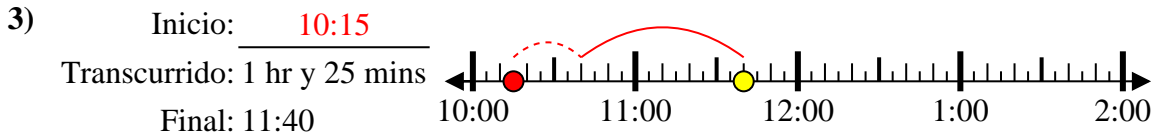
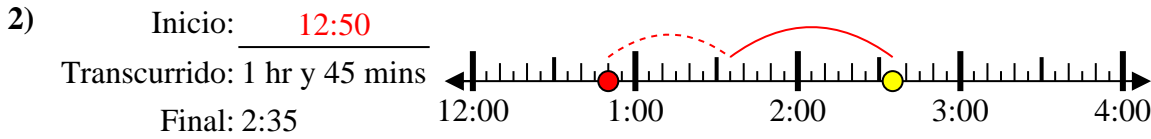
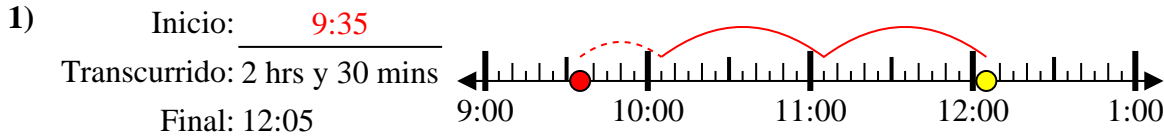
7. _____

8) Inicio: _____
 Transcurrido: 1 hr y 40 mins
 Final: 5:15

8. _____



Resuelve cada problema.



Respuestas

1. 9:35

2. 12:50

3. 10:15

4. 6:25

5. 9:10

6. 11:45

7. 12:20

8. 3:35