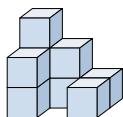


**Resuelve cada problema.****Respuestas**

- 1) If you were looking at the 3d shape from the right side what would you see?



A.



B.



C.



D.



1. _____

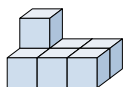
2. _____

3. _____

4. _____

5. _____

- 2) If you were looking at the 3d shape from the back what would you see?



A.



B.



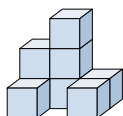
C.



D.



- 3) If you were looking at the 3d shape from the left side what would you see?



A.



B.



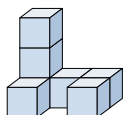
C.



D.



- 4) If you were looking at the 3d shape from the back what would you see?



A.



B.



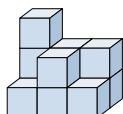
C.



D.



- 5) If you were looking at the 3d shape from the back what would you see?



A.



B.

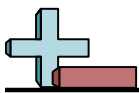


C.

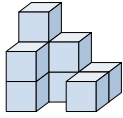


D.



**Resuelve cada problema.****Respuestas**

- 1) If you were looking at the 3d shape from the right side what would you see?



A.



B.



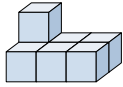
C.



D.

1. **B**

- 2) If you were looking at the 3d shape from the back what would you see?



A.



B.



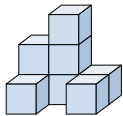
C.



D.

2. **C**3. **A**4. **C**5. **C**

- 3) If you were looking at the 3d shape from the left side what would you see?



A.



B.



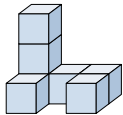
C.



D.



- 4) If you were looking at the 3d shape from the back what would you see?



A.



B.



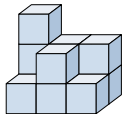
C.



D.



- 5) If you were looking at the 3d shape from the back what would you see?



A.



B.



C.



D.

