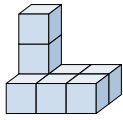








Resuelve cada problema.

Respuestas

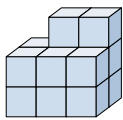
1) If you were looking at the 3d shape from the right side what would you see?







- A.  B.  C.  D. 

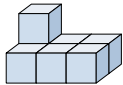
1. _____
 2. _____
 3. _____
 4. _____
 5. _____





2) If you were looking at the 3d shape from the back what would you see?



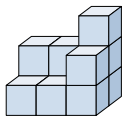
- A.  B.  C.  D. 





3) If you were looking at the 3d shape from the right side what would you see?



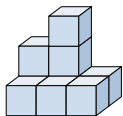
- A.  B.  C.  D. 





4) If you were looking at the 3d shape from above what would you see?



- A.  B.  C.  D. 

5) If you were looking at the 3d shape from the back what would you see?



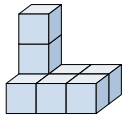
- A.  B.  C.  D. 







Resuelve cada problema.

Respuestas

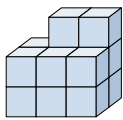
1) If you were looking at the 3d shape from the right side what would you see?

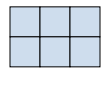





- A.  B.  C.  D. 

1. **C**

2) If you were looking at the 3d shape from the back what would you see?



- A.  B.  C.  D. 

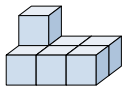
2. **C**





3. **A**

4. **B**

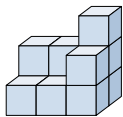
5. **B**





3) If you were looking at the 3d shape from the right side what would you see?



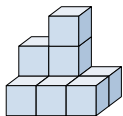
- A.  B.  C.  D. 




4) If you were looking at the 3d shape from above what would you see?



- A.  B.  C.  D. 

5) If you were looking at the 3d shape from the back what would you see?



- A.  B.  C.  D. 