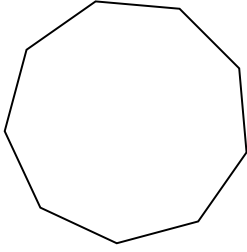


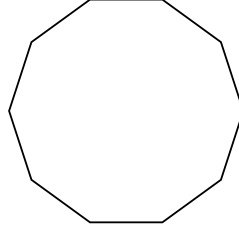


Identificar el tipo de figura mostrada.


1)



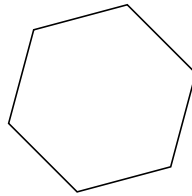
2)



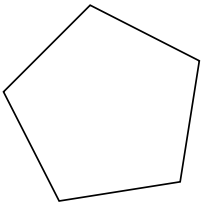
3)



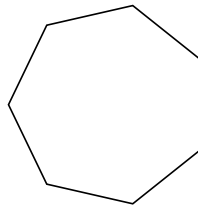
4)



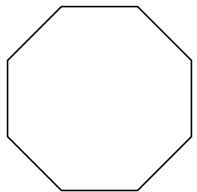
5)




6)



7)



8)



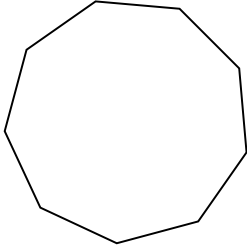
Respuestas

- 1. _____
- 2. _____
- 3. _____
- 4. _____
- 5. _____
- 6. _____
- 7. _____
- 8. _____

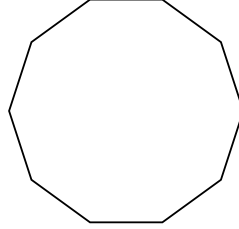


Identificar el tipo de figura mostrada.

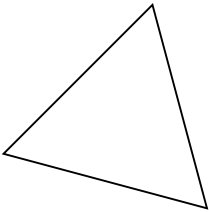
1)



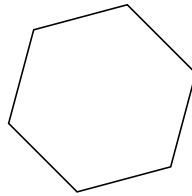
2)



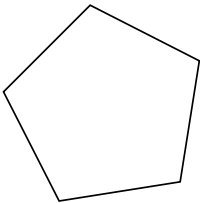
3)



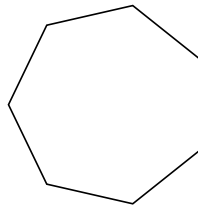
4)



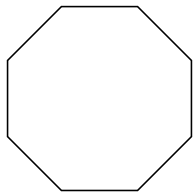
5)




6)



7)



8)



Respuestas

1. **nonagono**

2. **decágono**

3. **triangle**

4. **hexágono**

5. **pentágono**

6. **heptágono**

7. **octágonos**

8. **cuadrilátero**