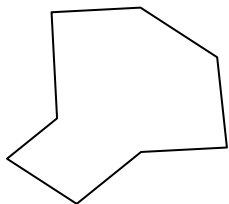




Identificar el tipo de figura mostrada.

**Respuestas**

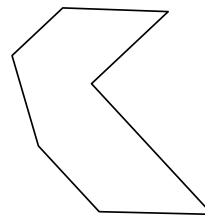
1)



2)




3)

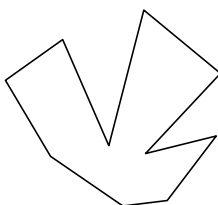


1. \_\_\_\_\_

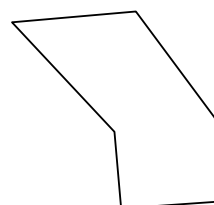
4)



5)

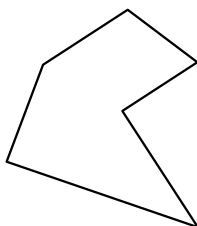


6)

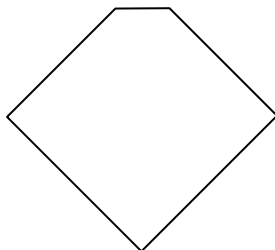


2. \_\_\_\_\_

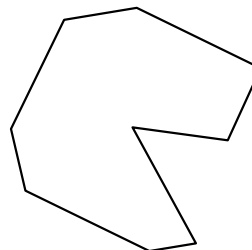
7)



8)

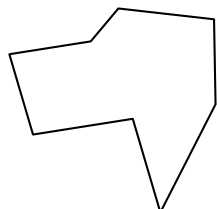


9)

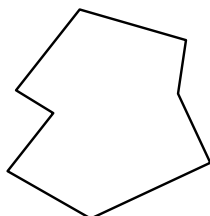


3. \_\_\_\_\_

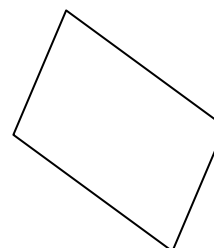
10)



11)

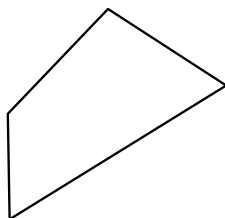


12)




4. \_\_\_\_\_


13)



14)

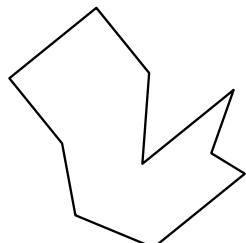


15)




5. \_\_\_\_\_

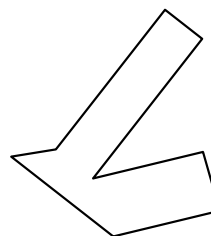
16)



17)



18)



6. \_\_\_\_\_

7. \_\_\_\_\_

8. \_\_\_\_\_

9. \_\_\_\_\_

10. \_\_\_\_\_

11. \_\_\_\_\_

12. \_\_\_\_\_

13. \_\_\_\_\_

14. \_\_\_\_\_

15. \_\_\_\_\_

16. \_\_\_\_\_

17. \_\_\_\_\_

18. \_\_\_\_\_

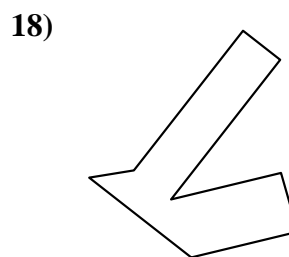
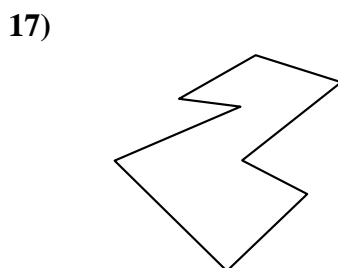
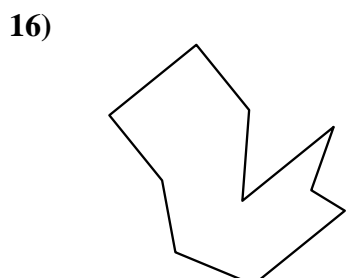
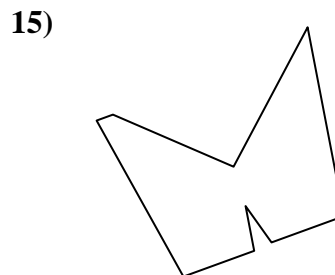

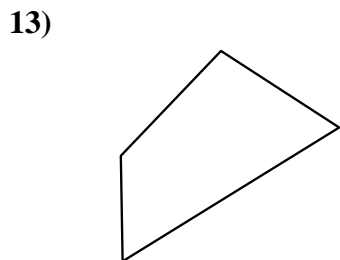
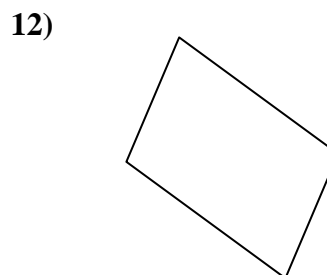
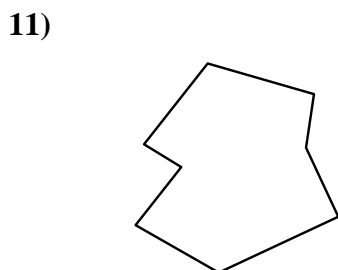
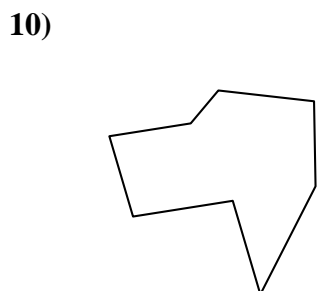
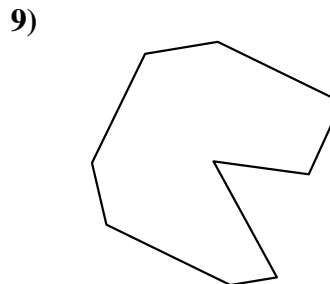
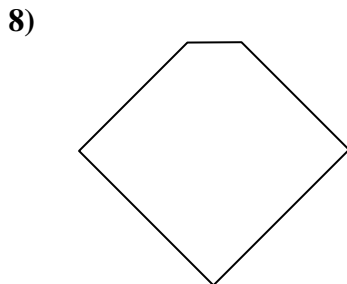
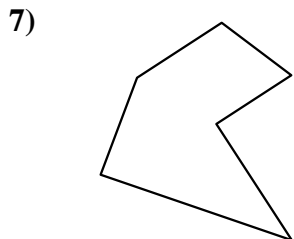
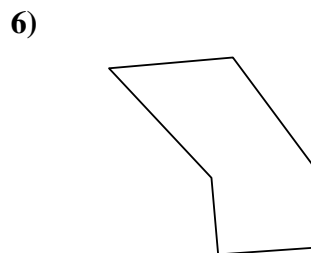
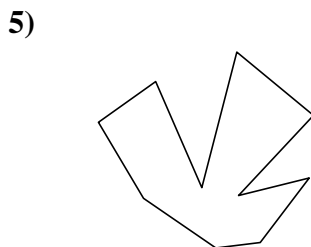
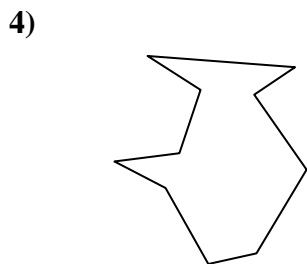
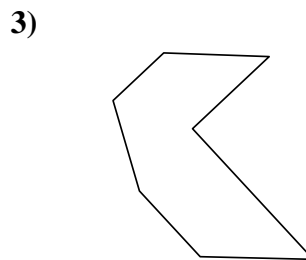
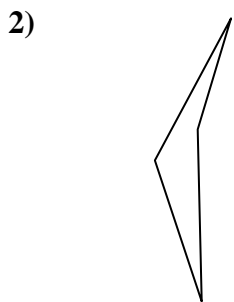
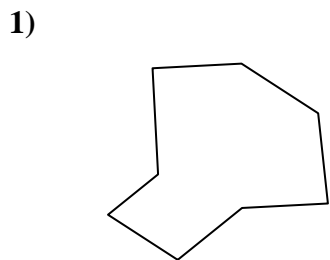
19. \_\_\_\_\_

20. \_\_\_\_\_

21. \_\_\_\_\_



Identificar el tipo de figura mostrada.



**Respuestas**

1. octágonos

2. cuadrilátero

3. heptágono

4. decágono

5. decágono

6. hexágono

7. hexágono

8. pentágono

9. nonagono

10. octágonos

11. octágonos

12. cuadrilátero

13. cuadrilátero

14. octágonos

15. nonagono

16. decágono

17. octágonos

18. octágonos

19. cuadrilátero

20. heptágono

21. nonagono