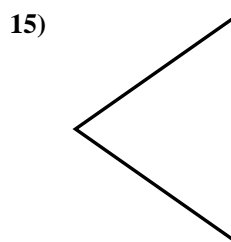
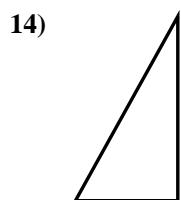
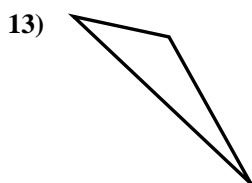
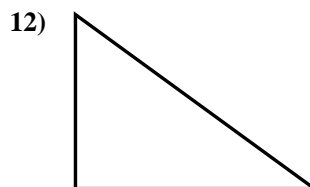
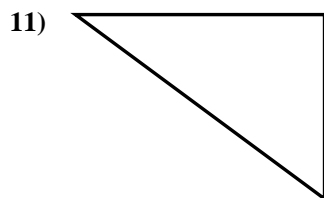
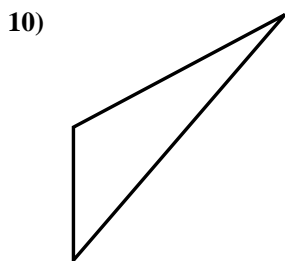
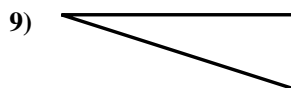
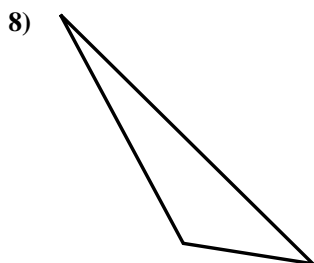
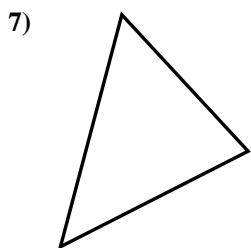
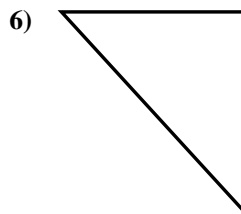
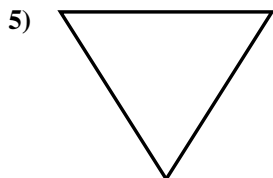
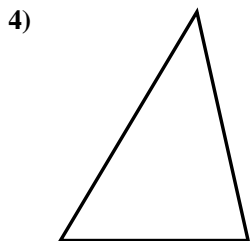
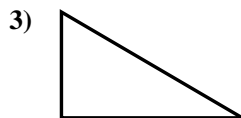
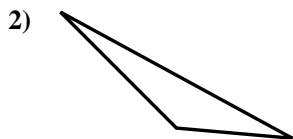
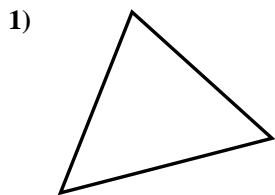




Determinar si el triángulo mostrado es un triángulo recto (si) o no (no).

**Respuestas**

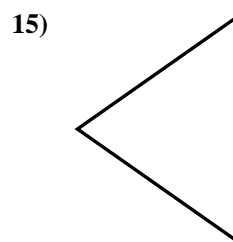
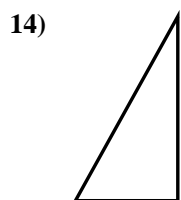
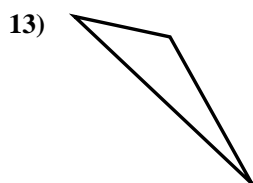
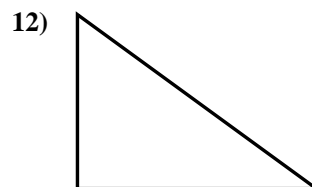
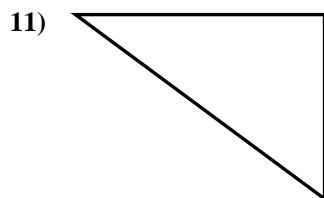
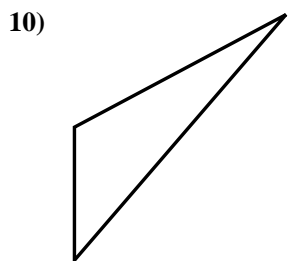
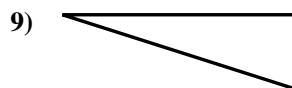
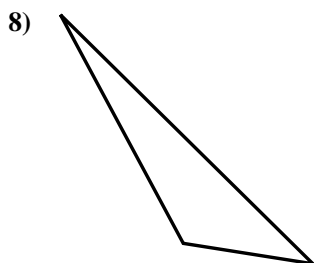
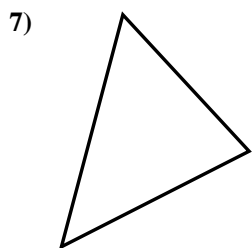
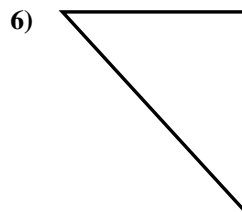
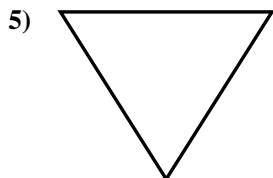
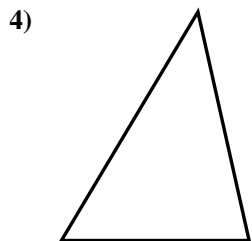
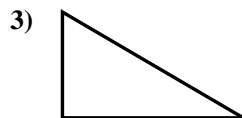
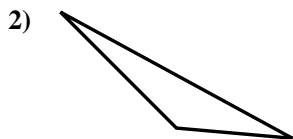
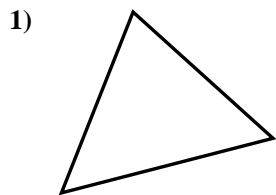


- 1. \_\_\_\_\_
- 2. \_\_\_\_\_
- 3. \_\_\_\_\_
- 4. \_\_\_\_\_
- 5. \_\_\_\_\_
- 6. \_\_\_\_\_
- 7. \_\_\_\_\_
- 8. \_\_\_\_\_
- 9. \_\_\_\_\_
- 10. \_\_\_\_\_
- 11. \_\_\_\_\_
- 12. \_\_\_\_\_
- 13. \_\_\_\_\_
- 14. \_\_\_\_\_
- 15. \_\_\_\_\_



Determinar si el triángulo mostrado es un triángulo recto (si) o no (no).

**Respuestas**



1. no

2. no

3. si

4. no

5. no

6. si

7. no

8. no

9. si

10. no

11. si

12. si

13. no

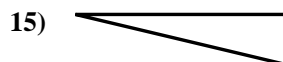
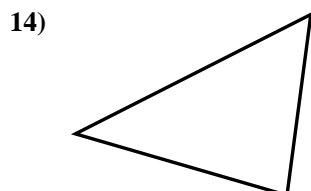
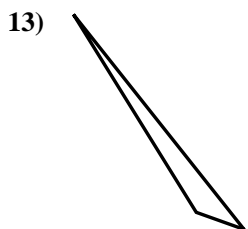
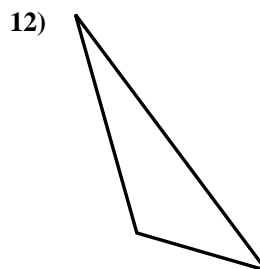
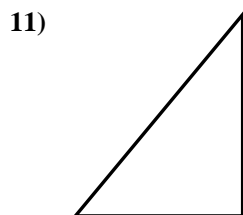
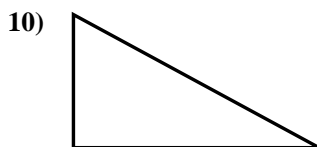
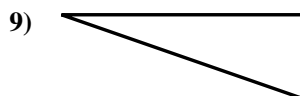
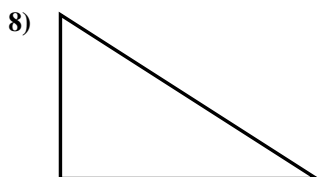
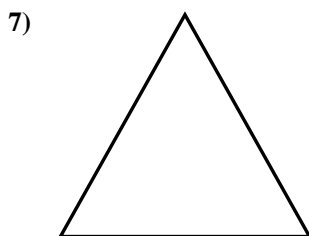
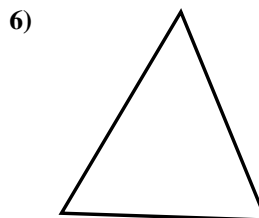


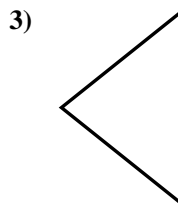
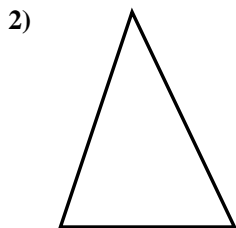
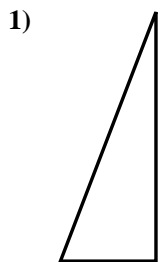
14. si

15. no



Determinar si el triángulo mostrado es un triángulo recto (sí) o no (no).

**Respuestas**



1. \_\_\_\_\_

2. \_\_\_\_\_

3. \_\_\_\_\_

4. \_\_\_\_\_

5. \_\_\_\_\_

6. \_\_\_\_\_

7. \_\_\_\_\_

8. \_\_\_\_\_

9. \_\_\_\_\_

10. \_\_\_\_\_

11. \_\_\_\_\_

12. \_\_\_\_\_

13. \_\_\_\_\_

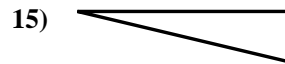
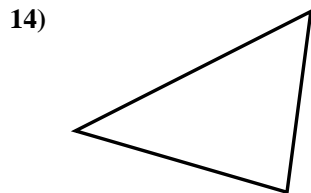
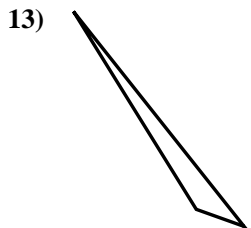
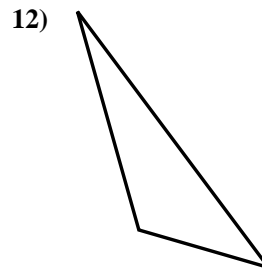
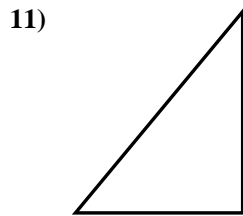
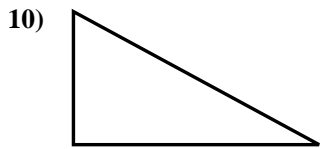
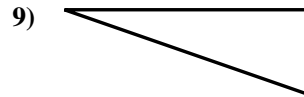
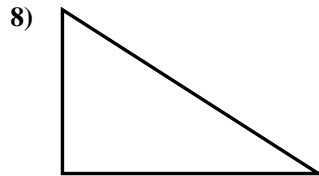
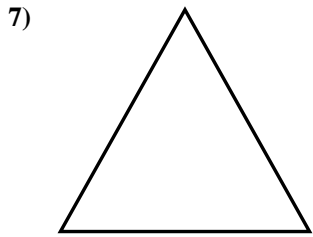
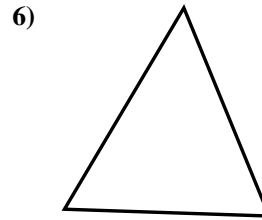

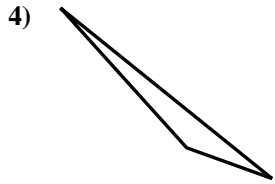
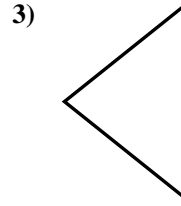
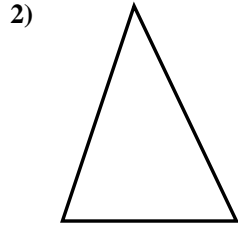
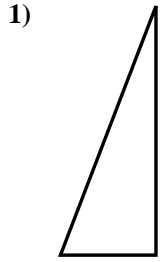
14. \_\_\_\_\_

15. \_\_\_\_\_



Determinar si el triángulo mostrado es un triángulo recto (si) o no (no).

**Respuestas**



1. si

2. no

3. no

4. no

5. no

6. no

7. no

8. si

9. si

10. si

11. si

12. no

13. no

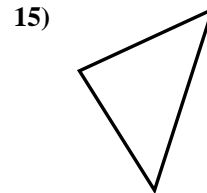

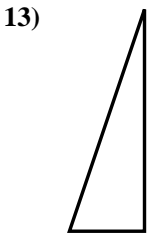
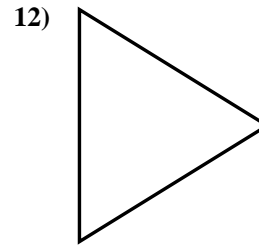
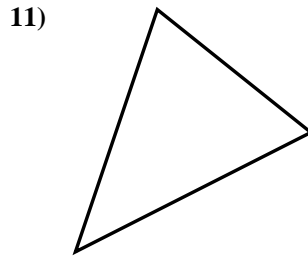
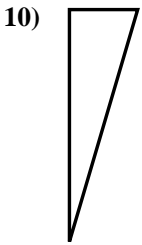
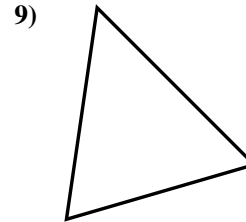
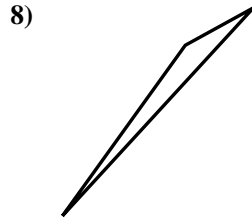
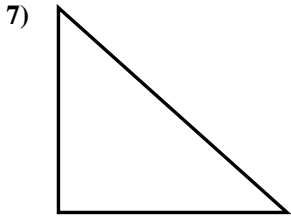
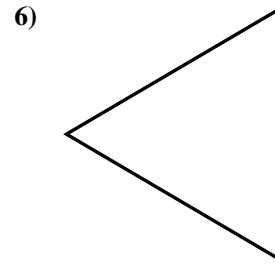
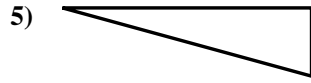
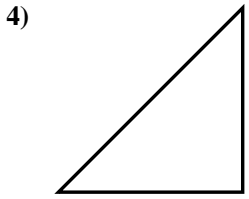
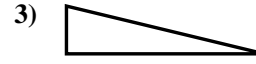
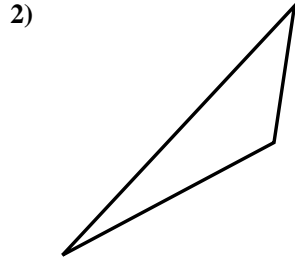
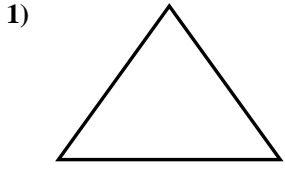
14. no

15. si



Determinar si el triángulo mostrado es un triángulo recto (si) o no (no).

**Respuestas**

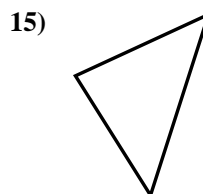

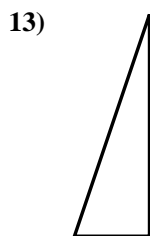
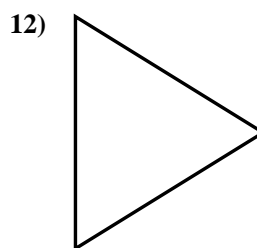
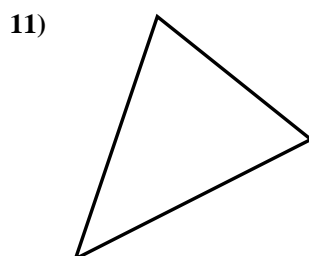
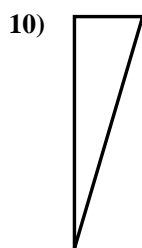
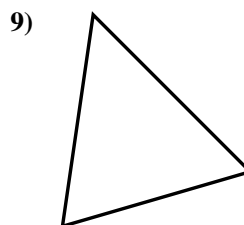
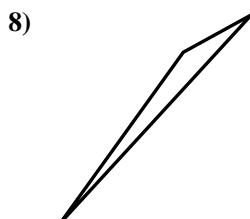
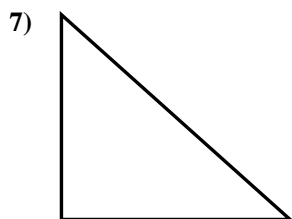
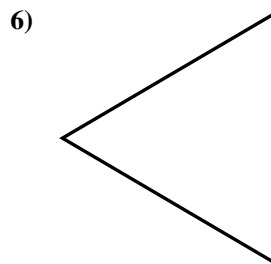
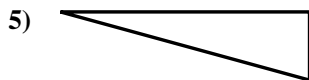
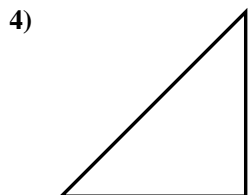
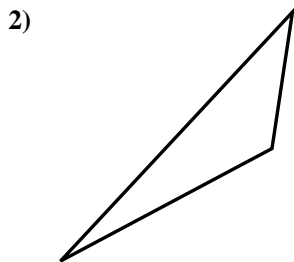
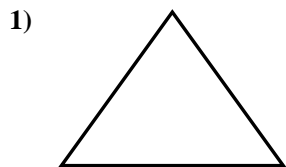


- 1. \_\_\_\_\_
- 2. \_\_\_\_\_
- 3. \_\_\_\_\_
- 4. \_\_\_\_\_
- 5. \_\_\_\_\_
- 6. \_\_\_\_\_
- 7. \_\_\_\_\_
- 8. \_\_\_\_\_
- 9. \_\_\_\_\_
- 10. \_\_\_\_\_
- 11. \_\_\_\_\_
- 12. \_\_\_\_\_
- 13. \_\_\_\_\_
- 14. \_\_\_\_\_
- 15. \_\_\_\_\_



Determinar si el triángulo mostrado es un triángulo recto (si) o no (no).

**Respuestas**



1. no

2. no

3. si

4. si

5. si

6. no

7. si

8. no

9. no

10. si

11. no

12. no

13. si

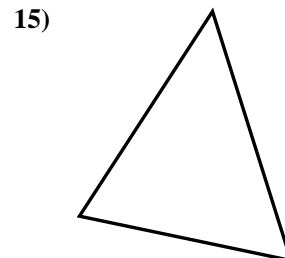
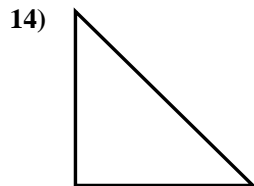
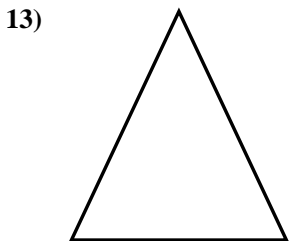
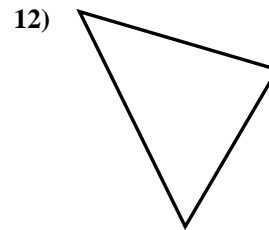
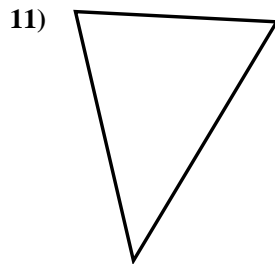
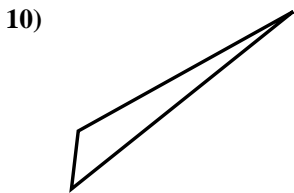
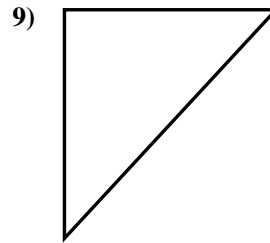
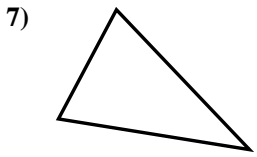
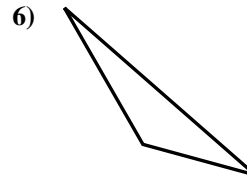
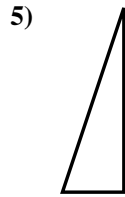
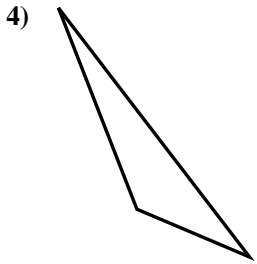
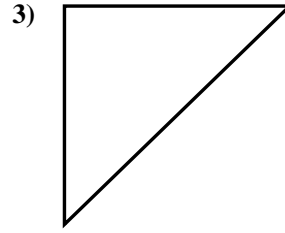
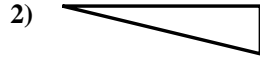
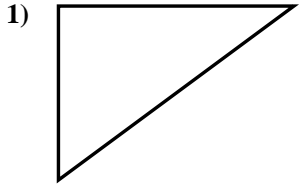
14. no

15. no



Determinar si el triángulo mostrado es un triángulo recto (sí) o no (no).

**Respuestas**

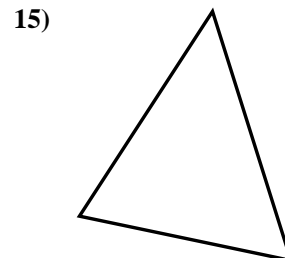
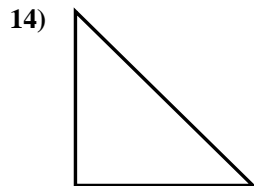
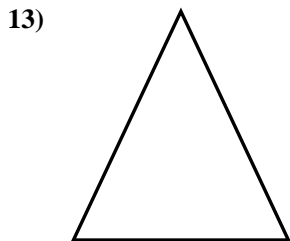
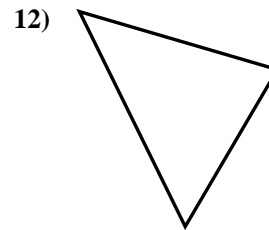
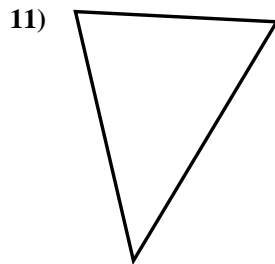
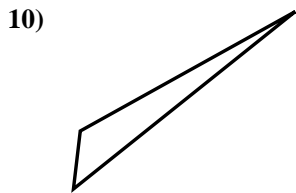
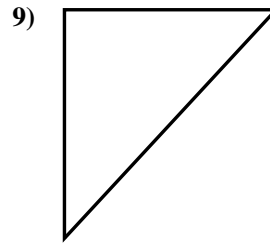
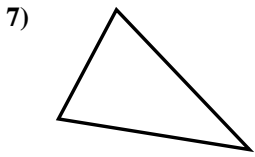
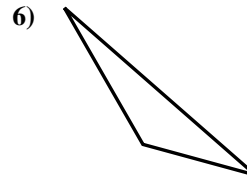
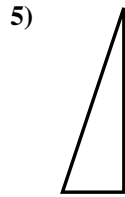
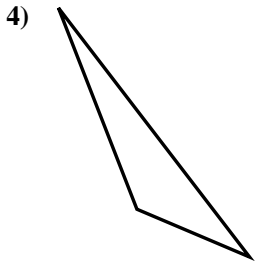
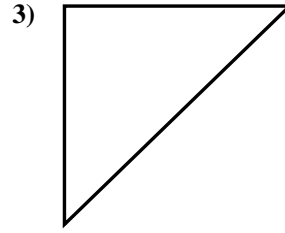
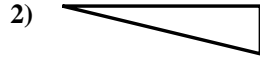
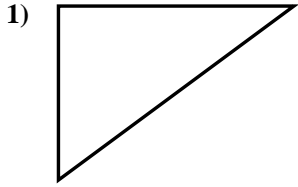


- 1. \_\_\_\_\_
- 2. \_\_\_\_\_
- 3. \_\_\_\_\_
- 4. \_\_\_\_\_
- 5. \_\_\_\_\_
- 6. \_\_\_\_\_
- 7. \_\_\_\_\_
- 8. \_\_\_\_\_
- 9. \_\_\_\_\_
- 10. \_\_\_\_\_
- 11. \_\_\_\_\_
- 12. \_\_\_\_\_
- 13. \_\_\_\_\_
- 14. \_\_\_\_\_
- 15. \_\_\_\_\_



Determinar si el triángulo mostrado es un triángulo recto (si) o no (no).

**Respuestas**



1. si

2. si

3. si

4. no

5. si

6. no

7. no

8. si

9. si

10. no

11. no

12. no

13. no

14. si

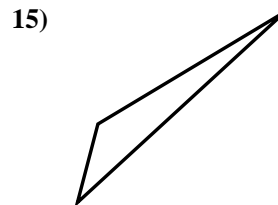
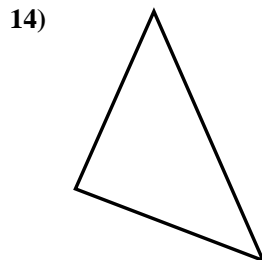
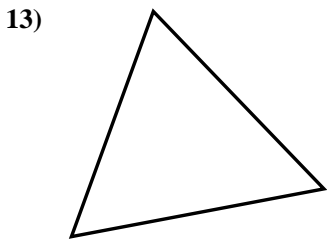

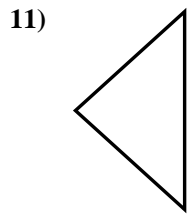
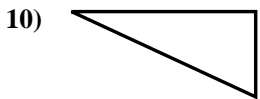
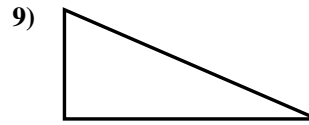
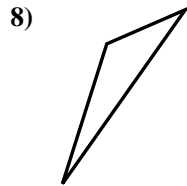

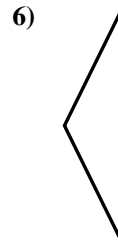
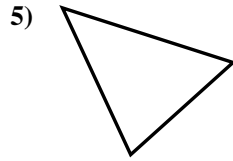
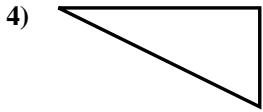
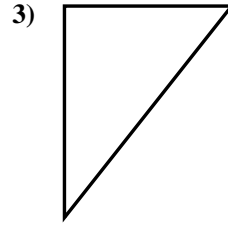

15. no





Determinar si el triángulo mostrado es un triángulo recto (si) o no (no).

**Respuestas**

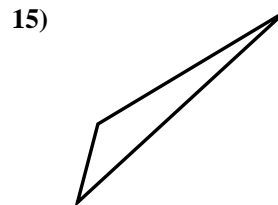
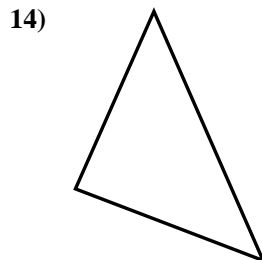
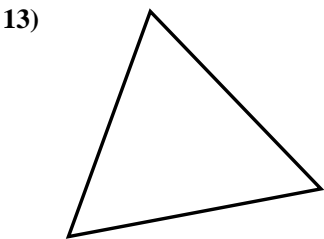

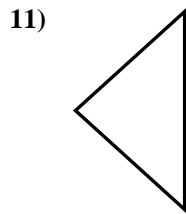
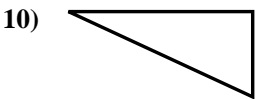
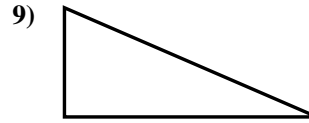
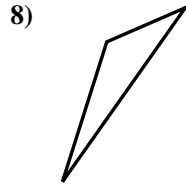

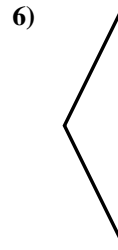
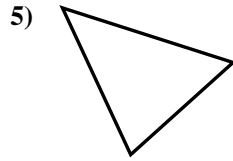
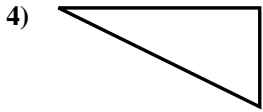
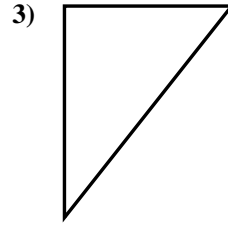



- 1. \_\_\_\_\_
- 2. \_\_\_\_\_
- 3. \_\_\_\_\_
- 4. \_\_\_\_\_
- 5. \_\_\_\_\_
- 6. \_\_\_\_\_
- 7. \_\_\_\_\_
- 8. \_\_\_\_\_
- 9. \_\_\_\_\_
- 10. \_\_\_\_\_
- 11. \_\_\_\_\_
- 12. \_\_\_\_\_
- 13. \_\_\_\_\_
- 14. \_\_\_\_\_
- 15. \_\_\_\_\_



Determinar si el triángulo mostrado es un triángulo recto (si) o no (no).

**Respuestas**



1. si

2. si

3. si

4. si

5. no

6. no

7. no

8. no

9. si

10. si

11. no

12. si

13. no

14. si

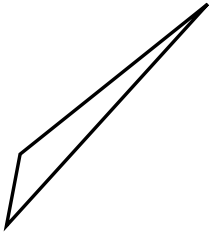
15. no



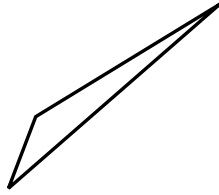
Determinar si el triángulo mostrado es un triángulo recto (si) o no (no).

**Respuestas**

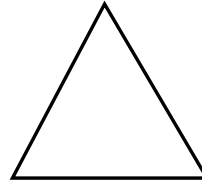
1)



2)



3)



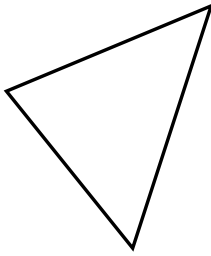
1. \_\_\_\_\_

2. \_\_\_\_\_

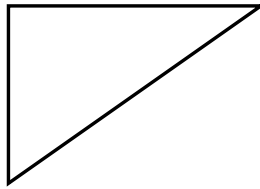
3. \_\_\_\_\_

4. \_\_\_\_\_


4)



5)



6)




5. \_\_\_\_\_

6. \_\_\_\_\_

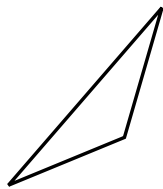
7. \_\_\_\_\_

8. \_\_\_\_\_


7)



8)



9)



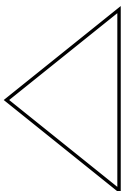
9. \_\_\_\_\_

10. \_\_\_\_\_

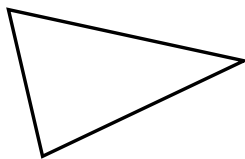
11. \_\_\_\_\_

12. \_\_\_\_\_

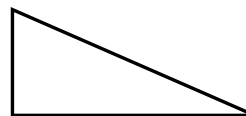
10)



11)



12)

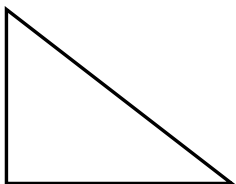


13. \_\_\_\_\_

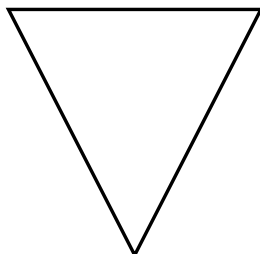
14. \_\_\_\_\_

15. \_\_\_\_\_

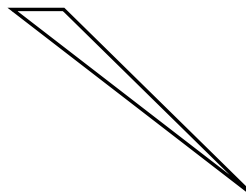
13)



14)



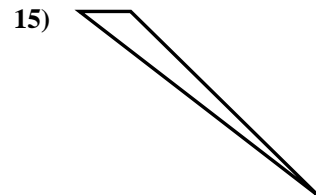
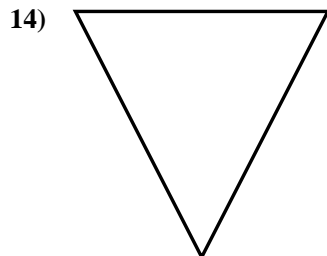
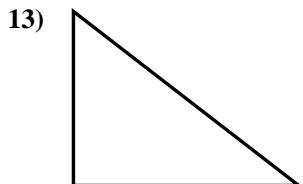
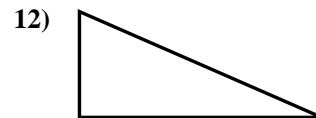
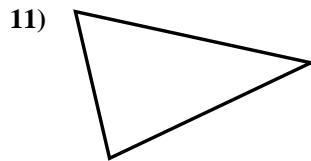
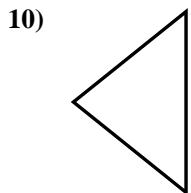
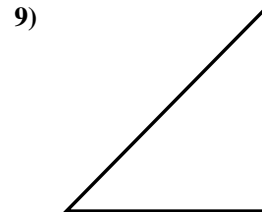
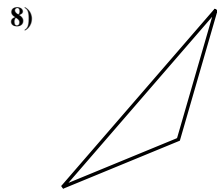
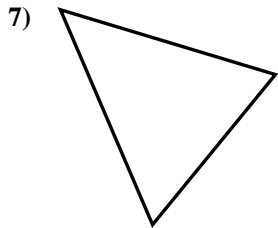
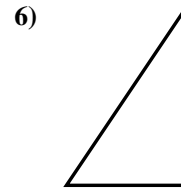
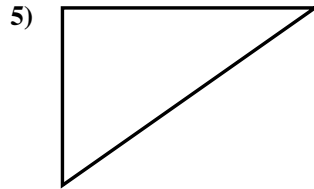
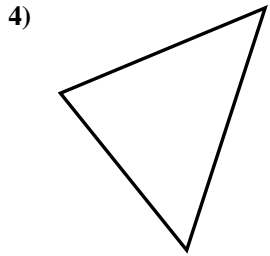
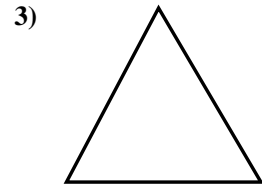
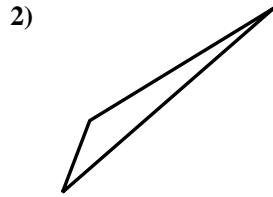
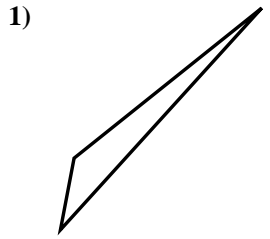
15)





Determinar si el triángulo mostrado es un triángulo recto (si) o no (no).

**Respuestas**



1. no

2. no

3. no

4. no

5. si

6. si

7. no

8. no

9. si

10. no

11. no

12. si

13. si

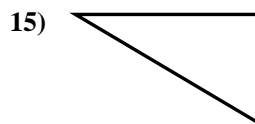
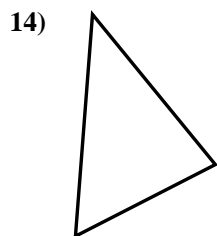
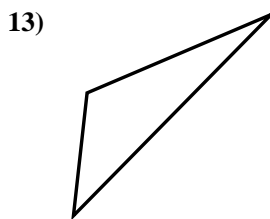
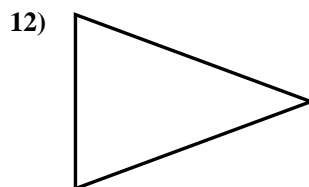
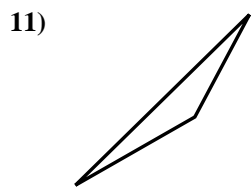
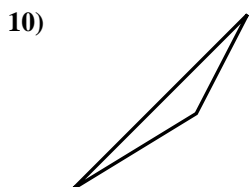
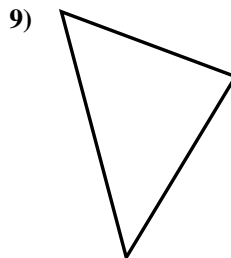
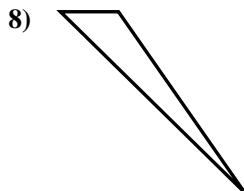
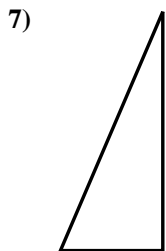
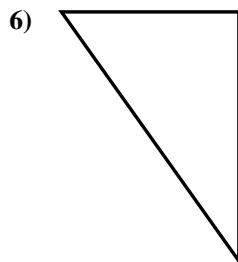
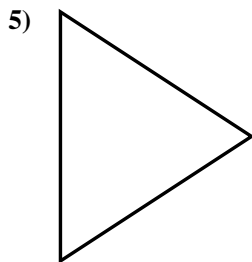
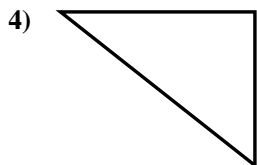
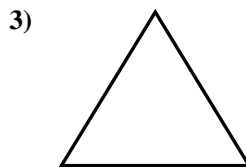
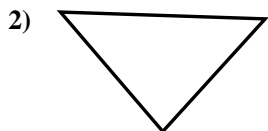
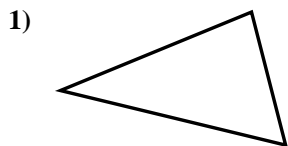
14. no

15. no



Determinar si el triángulo mostrado es un triángulo recto (si) o no (no).

**Respuestas**

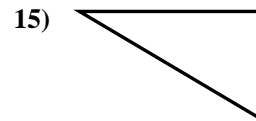
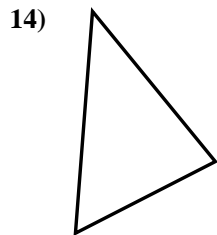
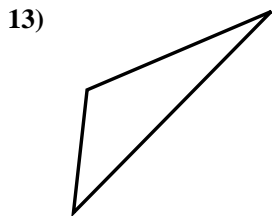
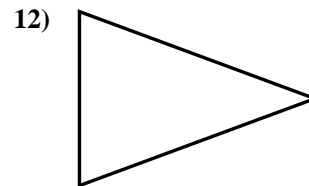
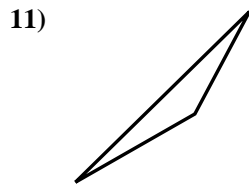
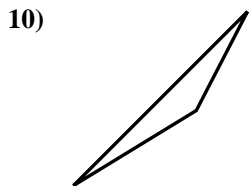
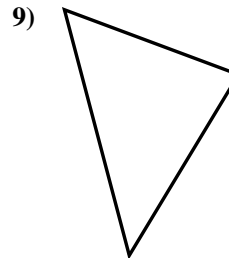
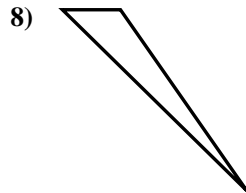
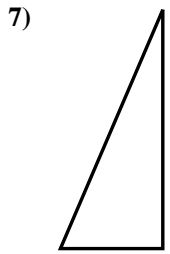
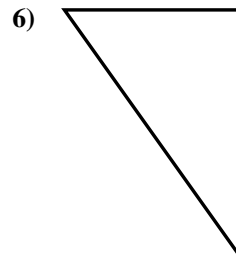
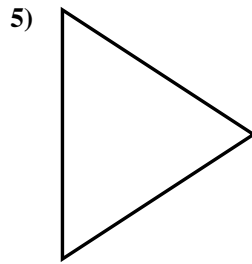
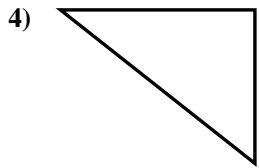
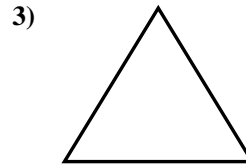
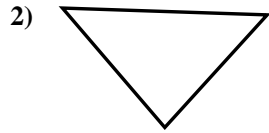
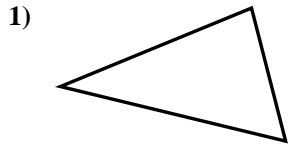


- 1. \_\_\_\_\_
- 2. \_\_\_\_\_
- 3. \_\_\_\_\_
- 4. \_\_\_\_\_
- 5. \_\_\_\_\_
- 6. \_\_\_\_\_
- 7. \_\_\_\_\_
- 8. \_\_\_\_\_
- 9. \_\_\_\_\_
- 10. \_\_\_\_\_
- 11. \_\_\_\_\_
- 12. \_\_\_\_\_
- 13. \_\_\_\_\_
- 14. \_\_\_\_\_
- 15. \_\_\_\_\_



Determinar si el triángulo mostrado es un triángulo recto (si) o no (no).

**Respuestas**

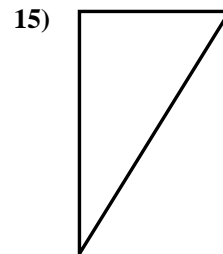
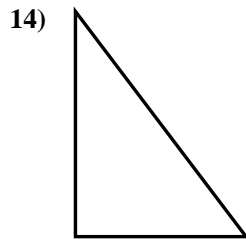
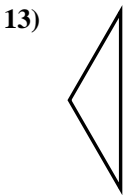
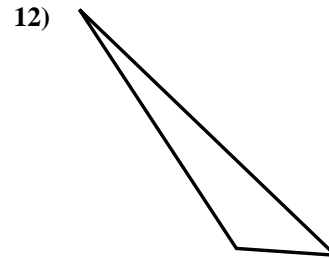
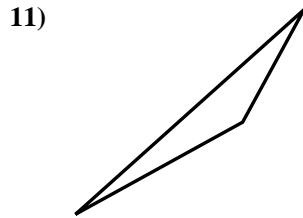
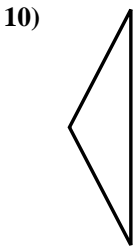
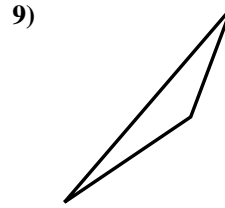
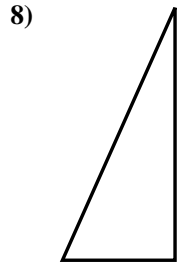

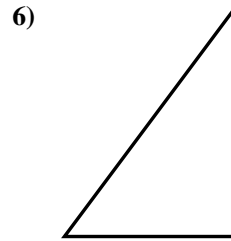
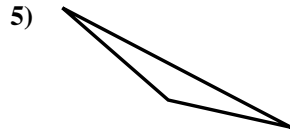
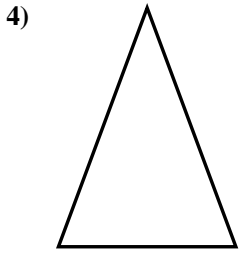
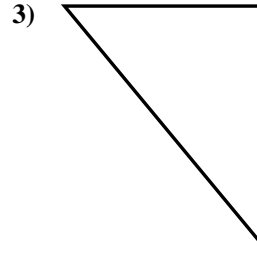
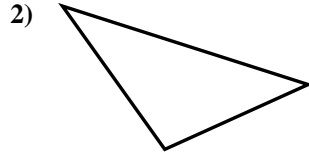
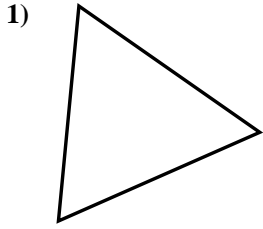


- 1. no
- 2. no
- 3. no
- 4. si
- 5. no
- 6. si
- 7. si
- 8. no
- 9. no
- 10. no
- 11. no
- 12. no
- 13. no
- 14. no
- 15. si



Determinar si el triángulo mostrado es un triángulo recto (si) o no (no).

**Respuestas**

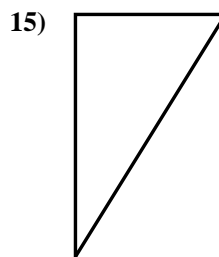
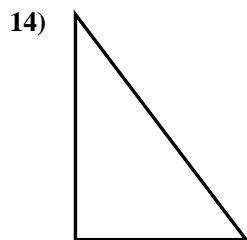
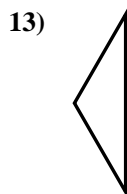
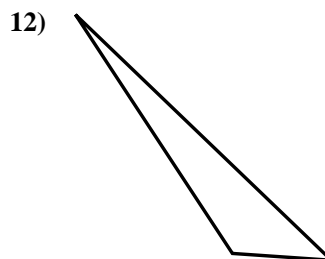
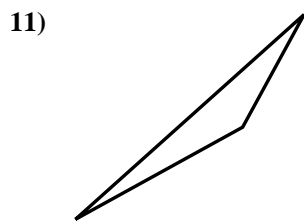
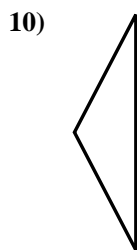
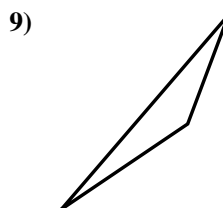
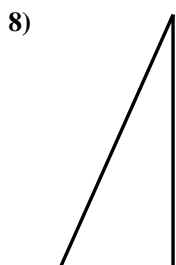

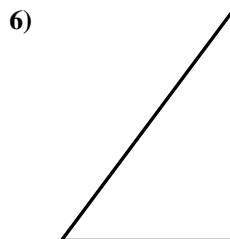
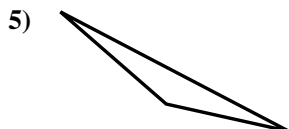
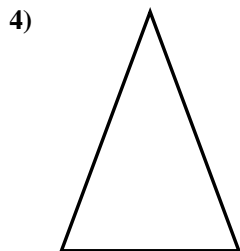
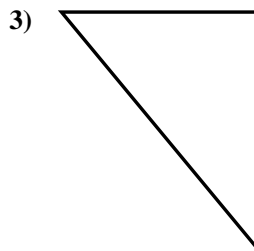
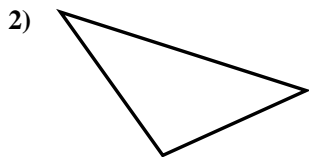
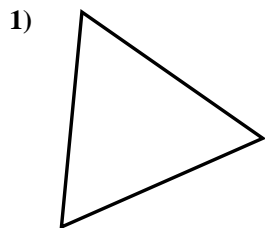


- 1. \_\_\_\_\_
- 2. \_\_\_\_\_
- 3. \_\_\_\_\_
- 4. \_\_\_\_\_
- 5. \_\_\_\_\_
- 6. \_\_\_\_\_
- 7. \_\_\_\_\_
- 8. \_\_\_\_\_
- 9. \_\_\_\_\_
- 10. \_\_\_\_\_
- 11. \_\_\_\_\_
- 12. \_\_\_\_\_
- 13. \_\_\_\_\_
- 14. \_\_\_\_\_
- 15. \_\_\_\_\_



Determinar si el triángulo mostrado es un triángulo recto (si) o no (no).

**Respuestas**



1. no

2. no

3. si

4. no

5. no

6. si

7. no

8. si

9. no

10. no

11. no

12. no

13. no

14. si

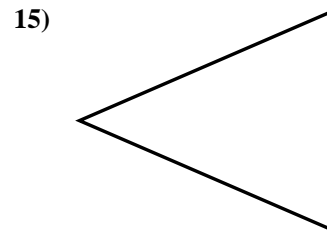
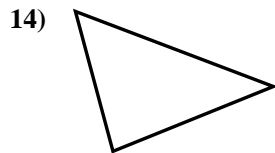
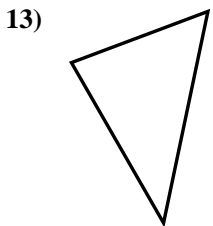
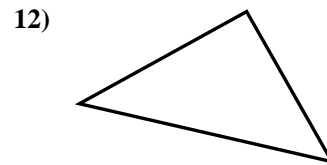
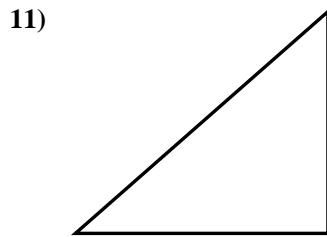
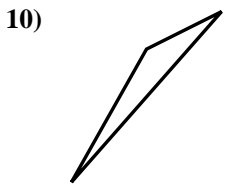
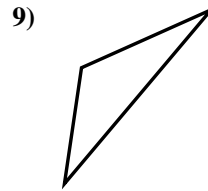
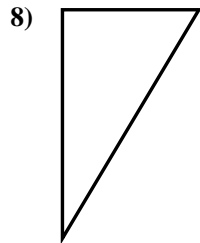
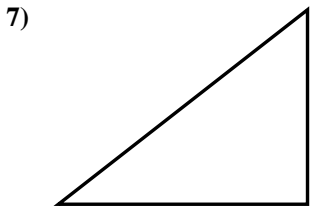
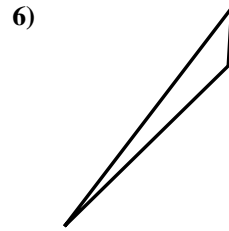
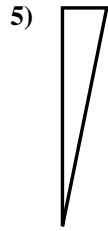
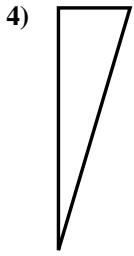
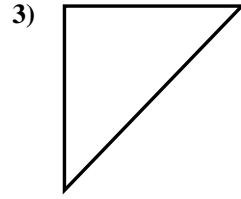
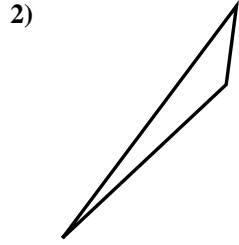
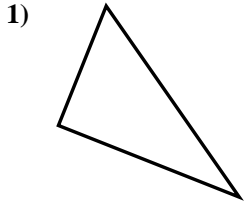
15. si





Determinar si el triángulo mostrado es un triángulo recto (si) o no (no).

**Respuestas**

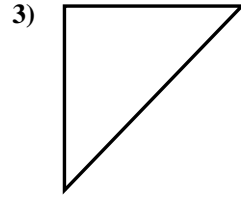
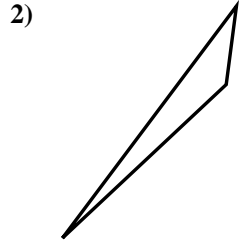
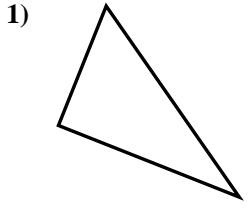


- 1. \_\_\_\_\_
- 2. \_\_\_\_\_
- 3. \_\_\_\_\_
- 4. \_\_\_\_\_
- 5. \_\_\_\_\_
- 6. \_\_\_\_\_
- 7. \_\_\_\_\_
- 8. \_\_\_\_\_
- 9. \_\_\_\_\_
- 10. \_\_\_\_\_
- 11. \_\_\_\_\_
- 12. \_\_\_\_\_
- 13. \_\_\_\_\_
- 14. \_\_\_\_\_
- 15. \_\_\_\_\_

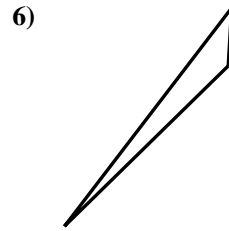
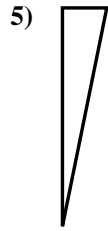
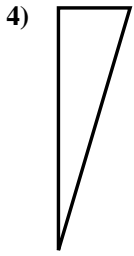


Determinar si el triángulo mostrado es un triángulo recto (si) o no (no).

**Respuestas**



1. si



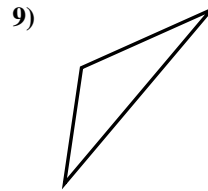
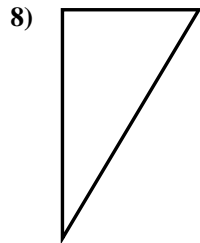
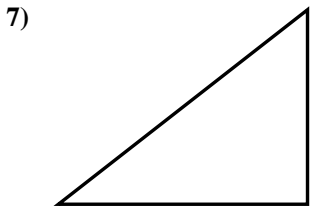
2. no

3. si

4. si

5. si

6. no



7. si

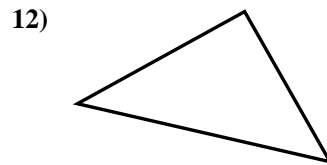
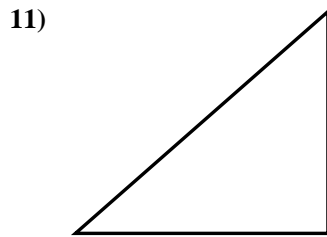
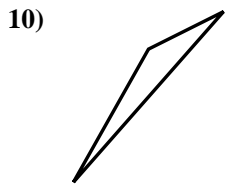
8. si

9. no

10. no

11. si

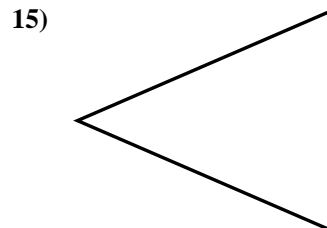
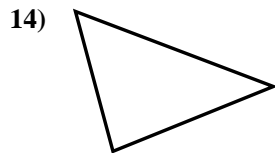
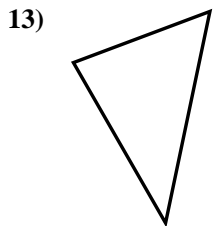
12. si



13. no

14. no

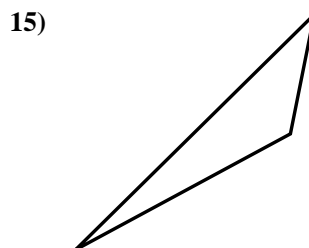
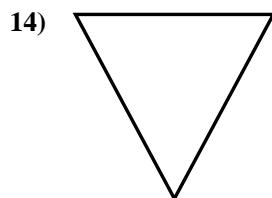
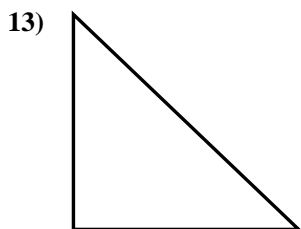
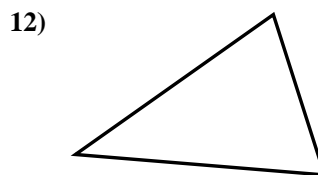
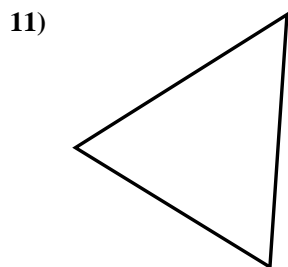
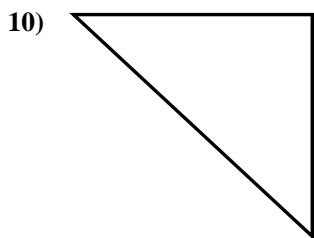
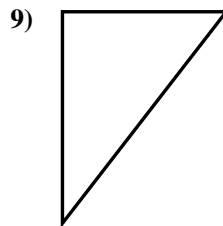
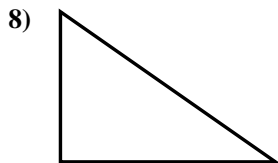
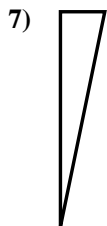
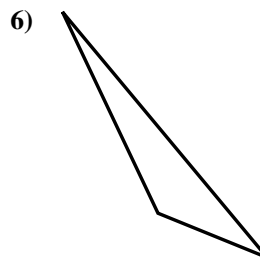
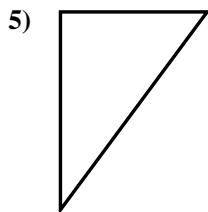
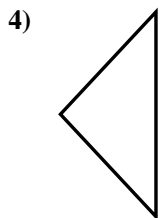
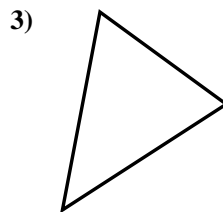
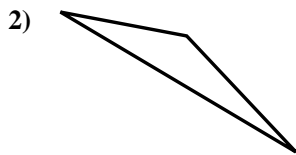
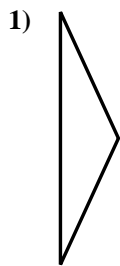
15. no





Determinar si el triángulo mostrado es un triángulo recto (sí) o no (no).

**Respuestas**



1. \_\_\_\_\_

2. \_\_\_\_\_

3. \_\_\_\_\_

4. \_\_\_\_\_

5. \_\_\_\_\_

6. \_\_\_\_\_

7. \_\_\_\_\_

8. \_\_\_\_\_

9. \_\_\_\_\_

10. \_\_\_\_\_

11. \_\_\_\_\_

12. \_\_\_\_\_

13. \_\_\_\_\_

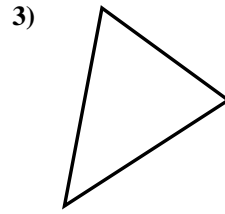
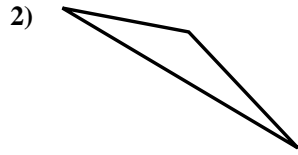
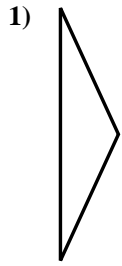
14. \_\_\_\_\_

15. \_\_\_\_\_

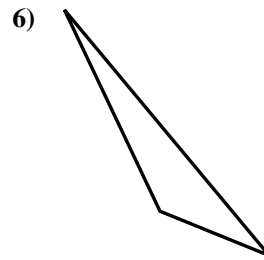
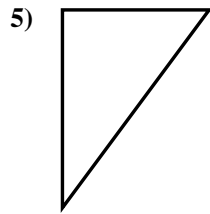
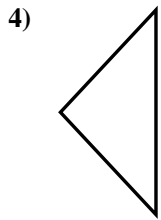


Determinar si el triángulo mostrado es un triángulo recto (si) o no (no).

**Respuestas**



1. no



2. no

3. no

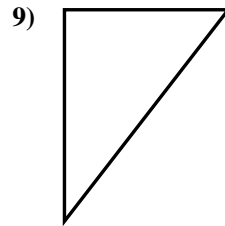
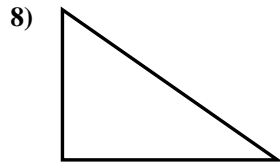
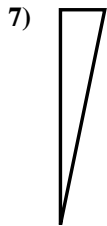
4. no

5. si

6. no

7. si

8. si

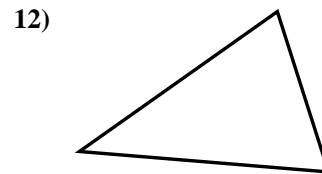
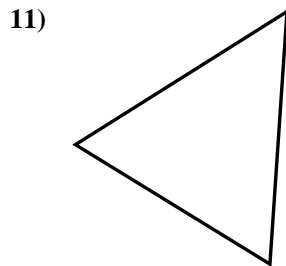
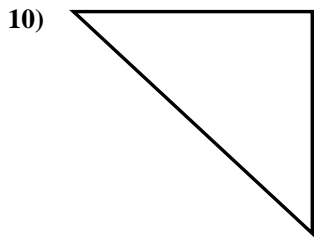


9. si

10. si

11. no

12. no



13. si

14. no

15. no

