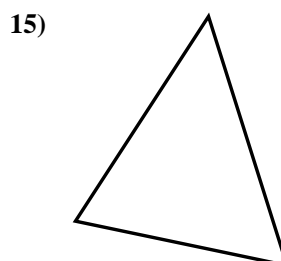
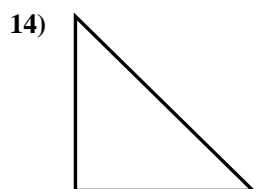
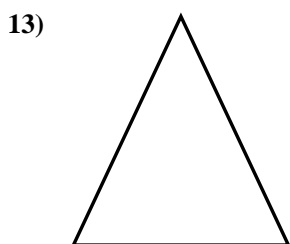
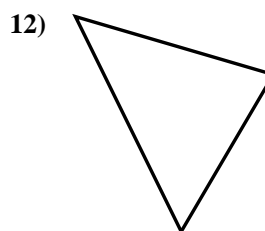
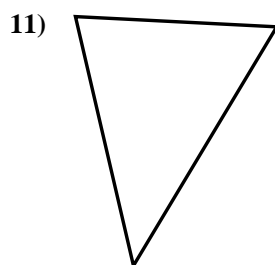
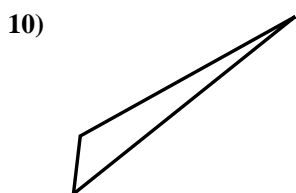
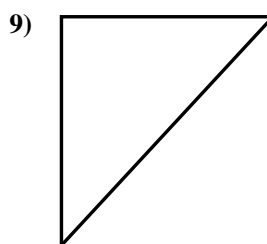
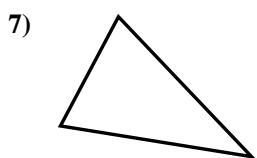
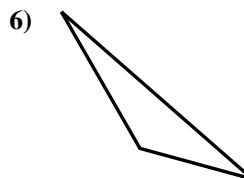
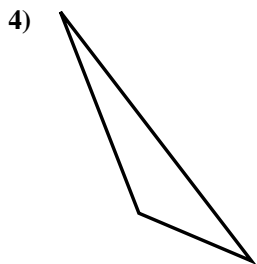
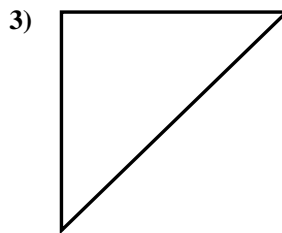
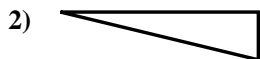
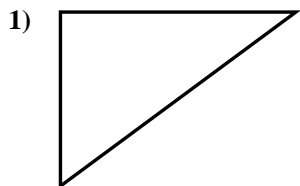




Determinar si el triángulo mostrado es un triángulo recto (sí) o no (no).

**Respuestas**



1. \_\_\_\_\_

2. \_\_\_\_\_

3. \_\_\_\_\_

4. \_\_\_\_\_

5. \_\_\_\_\_

6. \_\_\_\_\_

7. \_\_\_\_\_

8. \_\_\_\_\_

9. \_\_\_\_\_

10. \_\_\_\_\_

11. \_\_\_\_\_

12. \_\_\_\_\_

13. \_\_\_\_\_

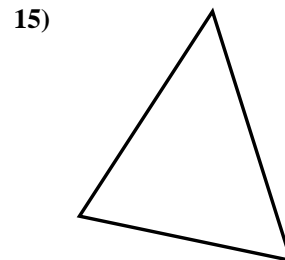
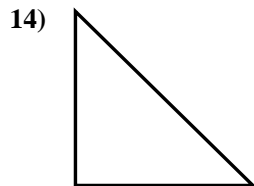
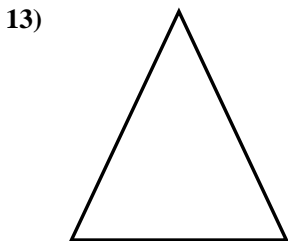
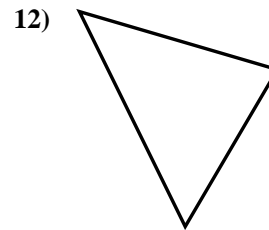
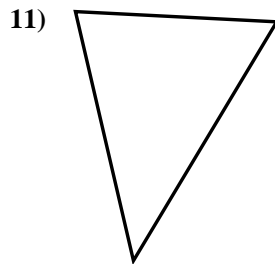
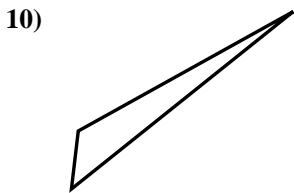
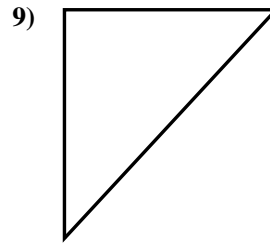
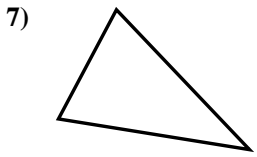
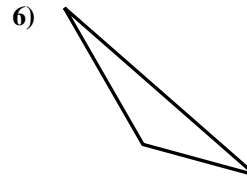
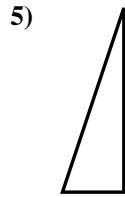
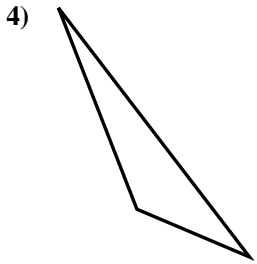
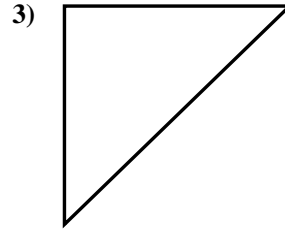
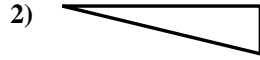
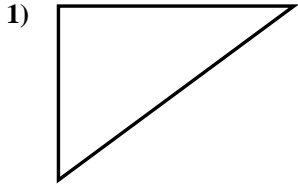
14. \_\_\_\_\_

15. \_\_\_\_\_



Determinar si el triángulo mostrado es un triángulo recto (si) o no (no).

**Respuestas**



1. si

2. si

3. si

4. no

5. si

6. no

7. no

8. si

9. si

10. no

11. no

12. no

13. no

14. si

15. no