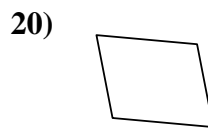
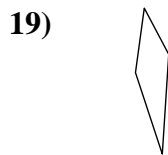
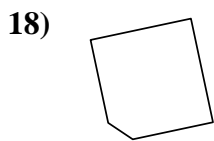
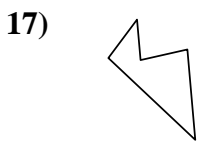
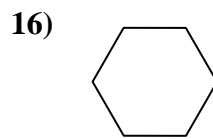
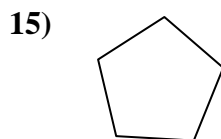
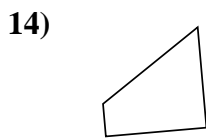
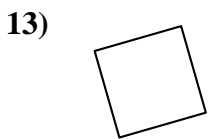
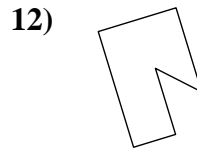
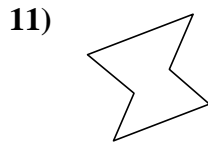
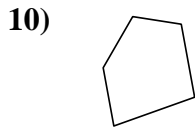
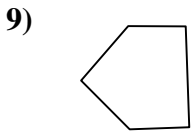
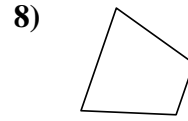
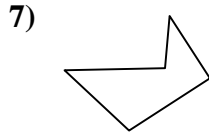
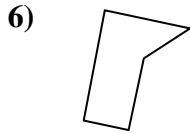
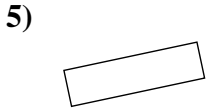
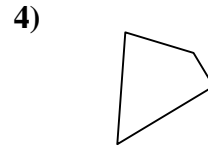
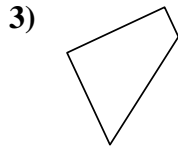
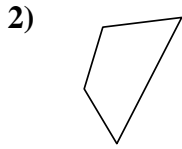





Determinar si la forma mostrada es un cuadrilátero (sí) o no (no).

**Respuestas**

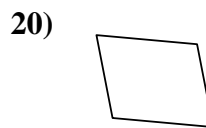
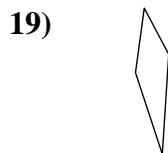
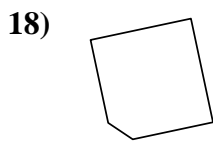
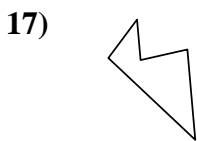
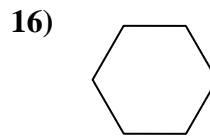
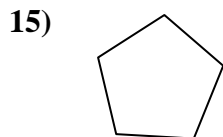
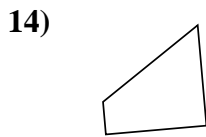
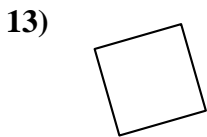
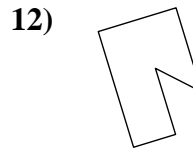
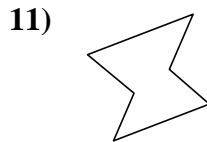
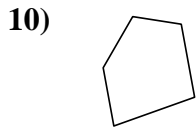
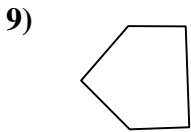
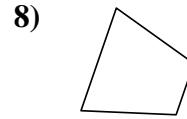
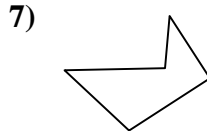
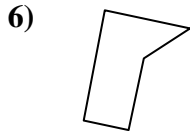

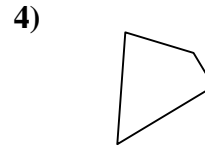
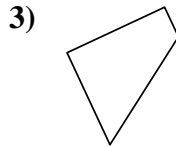
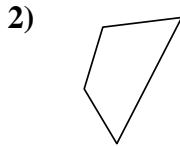



- 1. \_\_\_\_\_
- 2. \_\_\_\_\_
- 3. \_\_\_\_\_
- 4. \_\_\_\_\_
- 5. \_\_\_\_\_
- 6. \_\_\_\_\_
- 7. \_\_\_\_\_
- 8. \_\_\_\_\_
- 9. \_\_\_\_\_
- 10. \_\_\_\_\_
- 11. \_\_\_\_\_
- 12. \_\_\_\_\_
- 13. \_\_\_\_\_
- 14. \_\_\_\_\_
- 15. \_\_\_\_\_
- 16. \_\_\_\_\_
- 17. \_\_\_\_\_
- 18. \_\_\_\_\_
- 19. \_\_\_\_\_
- 20. \_\_\_\_\_



Determinar si la forma mostrada es un cuadrilátero (si) o no (no).

**Respuestas**



1. si

2. si

3. si

4. si

5. si

6. no

7. no

8. si

9. no

10. no

11. no

12. no

13. si

14. si

15. no

16. no

17. no

18. no

19. si

20. si

1-10	95	90	85	80	75	70	65	60	55	50
11-20	45	40	35	30	25	20	15	10	5	0