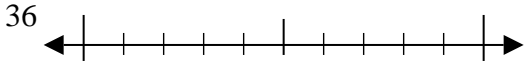




Usar las rectas numéricas para encontrar el número más cercano a 10.

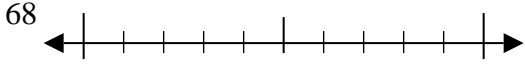
Respuestas

Ej)



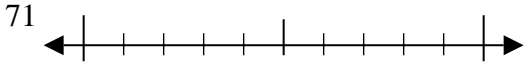
Ej. 40

1)



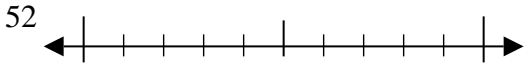
1. _____

2)



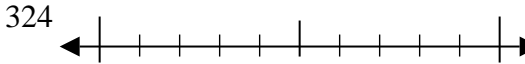
2. _____

3)



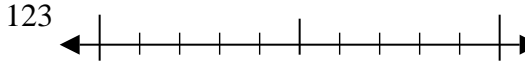
3. _____

4)



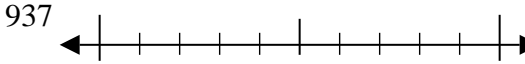
4. _____

5)



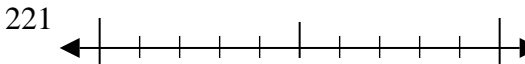
5. _____

6)



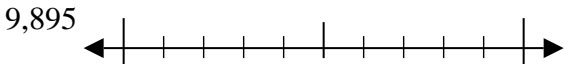
6. _____

7)



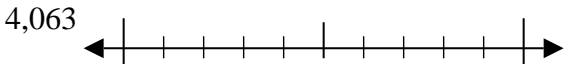
7. _____

8)



8. _____

9)

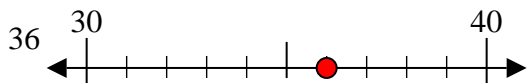


9. _____

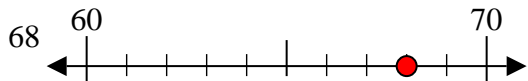


Usar las rectas numéricas para encontrar el número más cercano a 10.

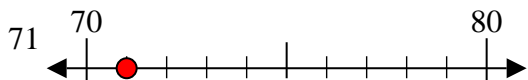
Ej)



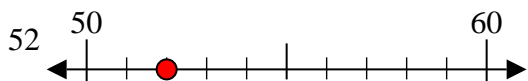
1)



2)



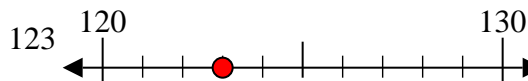
3)



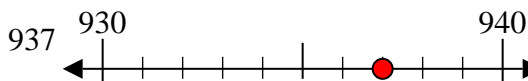
4)



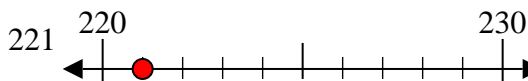
5)



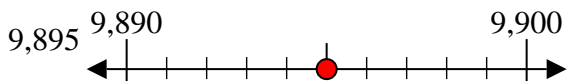
6)



7)



8)



9)



Respuestas

Ej. 40

1. 70

2. 70

3. 50

4. 320

5. 120

6. 940

7. 220

8. 9900

9. 4060