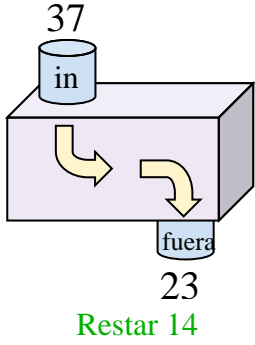




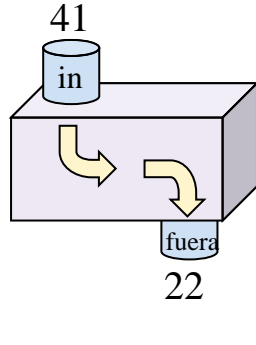
Determina la regla que cada máquina de función está usando.

Respuestas

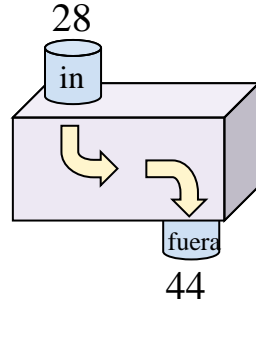
Ej)



1)



2)



Ej.

Restar 14

1. _____

2. _____

3. _____

4. _____

5. _____

6. _____

7. _____

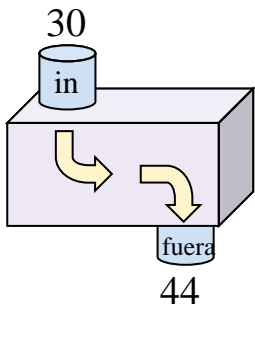
8. _____

9. _____

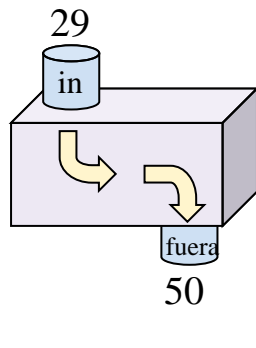
10. _____

11. _____

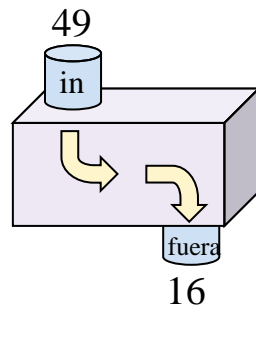
3)



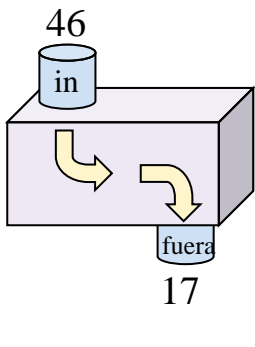
4)



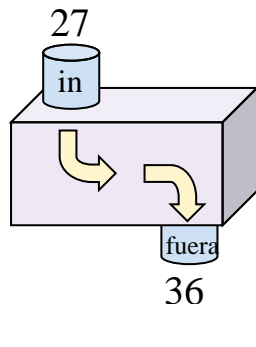
5)



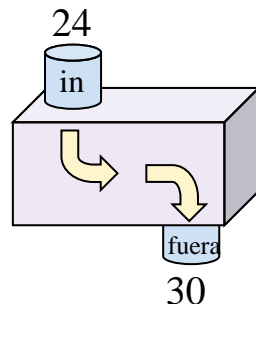
6)



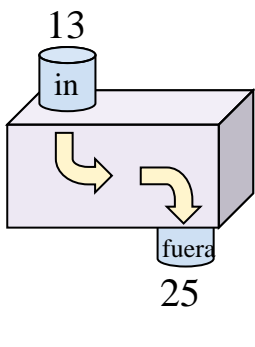
7)



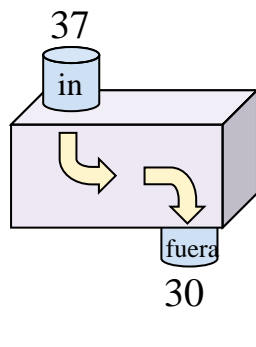
8)



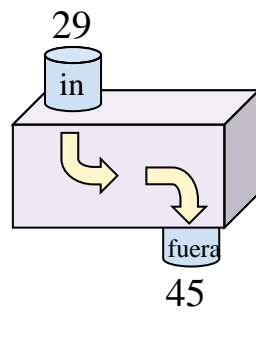
9)



10)



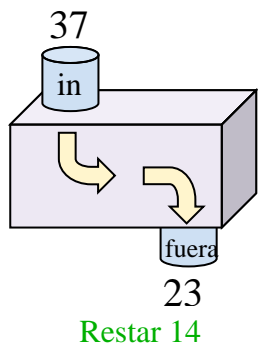
11)



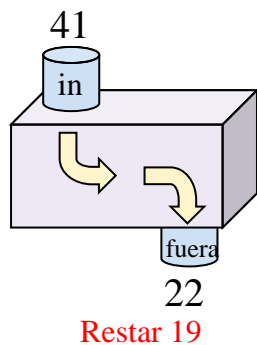


Determina la regla que cada máquina de función está usando.

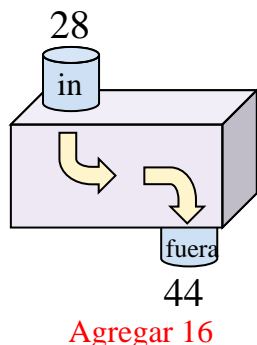
Ej)



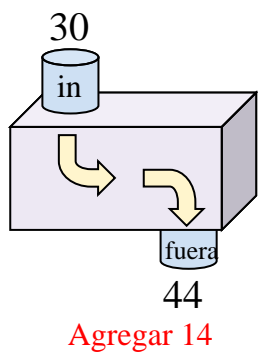
1)



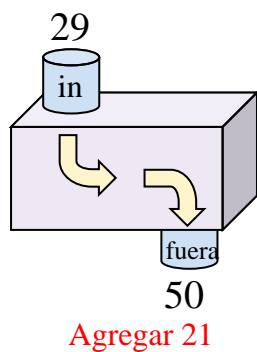
2)



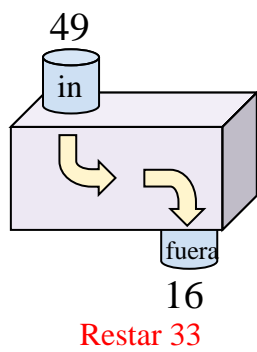
3)



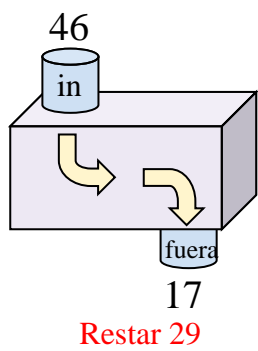
4)



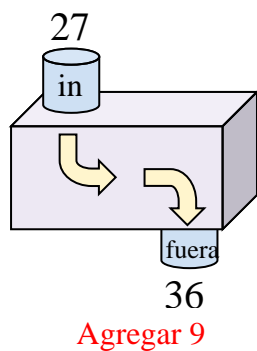
5)



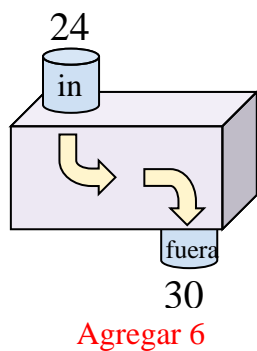
6)



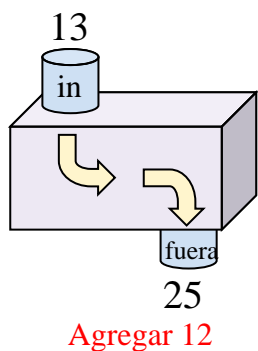
7)



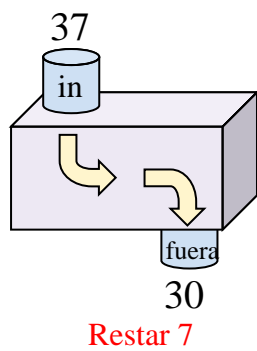
8)



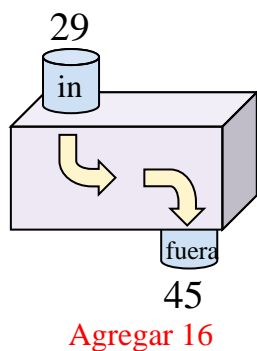
9)



10)



11)



Respuestas

- Ej. **Restar 14**
- 1. **Restar 19**
- 2. **Agregar 16**
- 3. **Agregar 14**
- 4. **Agregar 21**
- 5. **Restar 33**
- 6. **Restar 29**
- 7. **Agregar 9**
- 8. **Agregar 6**
- 9. **Agregar 12**
- 10. **Restar 7**
- 11. **Agregar 16**