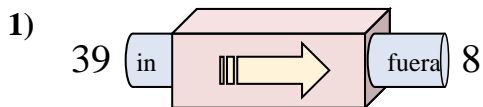


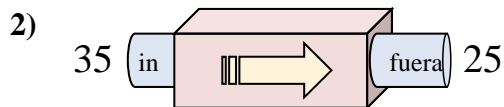


Determinar cuál regla está usando la máquina de funciones.

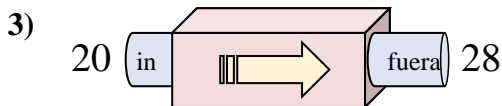
Respuestas



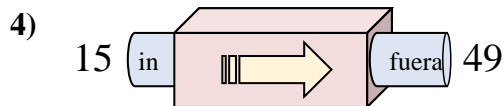
- A. Restar 34
- B. Agregar 28
- C. Agregar 26
- D. Restar 31



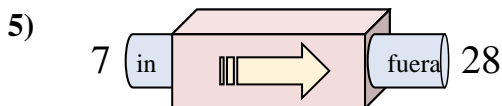
- A. Restar 6
- B. Restar 14
- C. Restar 10
- D. Agregar 9



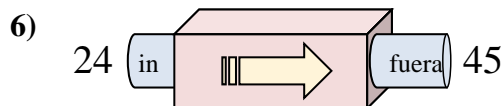
- A. Agregar 3
- B. Agregar 4
- C. Agregar 9
- D. Agregar 8



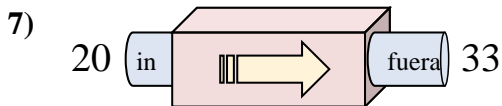
- A. Restar 36
- B. Agregar 29
- C. Agregar 34
- D. Agregar 31



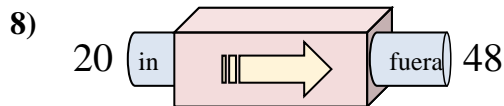
- A. Restar 20
- B. Agregar 23
- C. Agregar 20
- D. Agregar 21



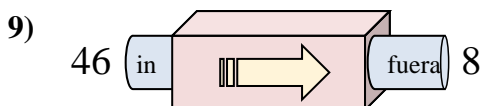
- A. Agregar 17
- B. Restar 22
- C. Agregar 18
- D. Agregar 21



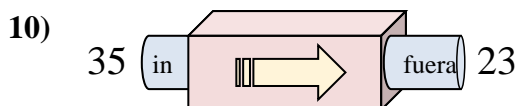
- A. Agregar 9
- B. Agregar 15
- C. Agregar 17
- D. Agregar 13



- A. Agregar 28
- B. Restar 27
- C. Agregar 25
- D. Agregar 29



- A. Restar 42
- B. Restar 40
- C. Agregar 34
- D. Restar 38



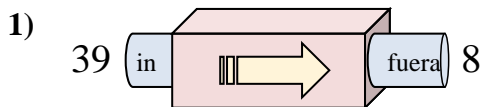
- A. Restar 10
- B. Restar 12
- C. Agregar 17
- D. Agregar 8

1. _____
2. _____
3. _____
4. _____
5. _____
6. _____
7. _____
8. _____
9. _____
10. _____

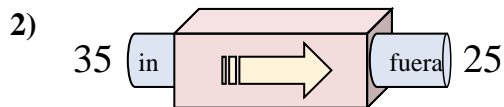


Determinar cuál regla está usando la máquina de funciones.

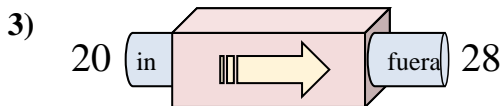
Respuestas



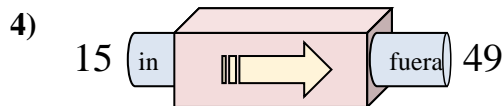
- A. Restar 34
- B. Agregar 28
- C. Agregar 26
- D. Restar 31



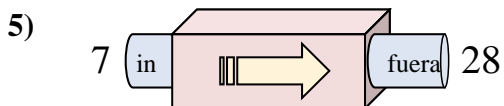
- A. Restar 6
- B. Restar 14
- C. Restar 10
- D. Agregar 9



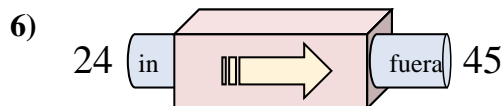
- A. Agregar 3
- B. Agregar 4
- C. Agregar 9
- D. Agregar 8



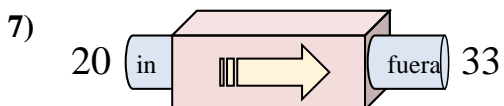
- A. Restar 36
- B. Agregar 29
- C. Agregar 34
- D. Agregar 31



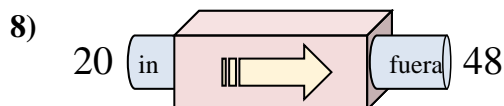
- A. Restar 20
- B. Agregar 23
- C. Agregar 20
- D. Agregar 21



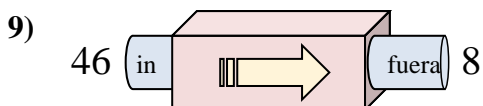
- A. Agregar 17
- B. Restar 22
- C. Agregar 18
- D. Agregar 21



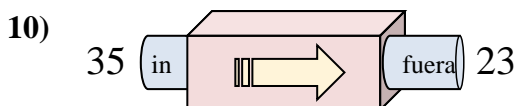
- A. Agregar 9
- B. Agregar 15
- C. Agregar 17
- D. Agregar 13



- A. Agregar 28
- B. Restar 27
- C. Agregar 25
- D. Agregar 29



- A. Restar 42
- B. Restar 40
- C. Agregar 34
- D. Restar 38



- A. Restar 10
- B. Restar 12
- C. Agregar 17
- D. Agregar 8

- 1. **D**
- 2. **C**
- 3. **D**
- 4. **C**
- 5. **D**
- 6. **D**
- 7. **D**
- 8. **A**
- 9. **D**
- 10. **B**