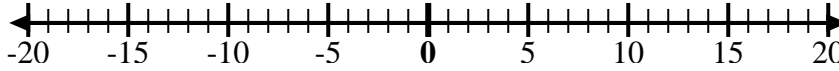


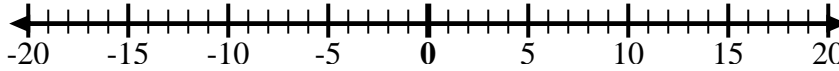


Utilice las rectas numéricas para mostrar cada expresión y resolver.

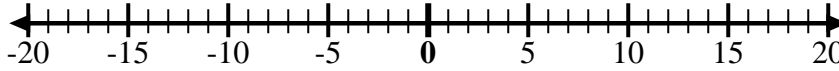
Ej) Empiece en 7  
y agregue -12



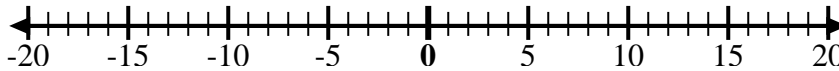
1) Empiece en -2  
y agregue 5



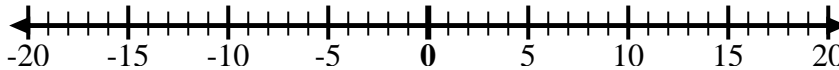
2) Empiece en 8  
y agregue -13



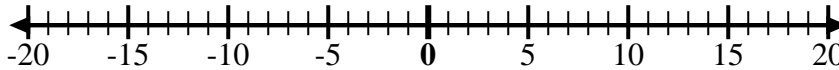
3) Empiece en -7  
y agregue -2



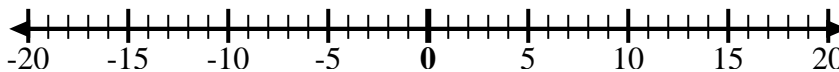
4) Empiece en -4  
y agregue -3



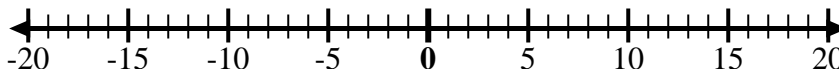
5) Empiece en -3  
y agregue -2



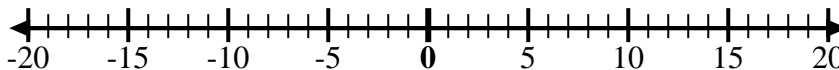
6) Empiece en -7  
y agregue 5



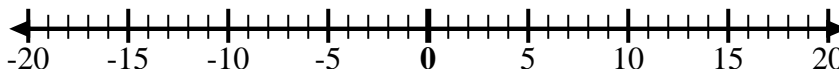
7) Empiece en -6  
y agregue -2



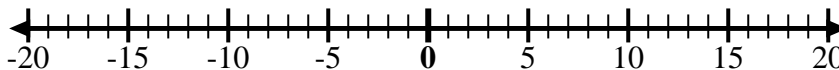
8) Empiece en 1  
y agregue -11



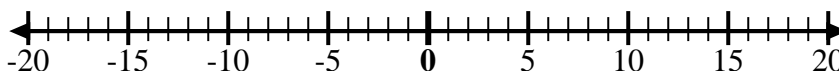
9) Empiece en -7  
y agregue 8



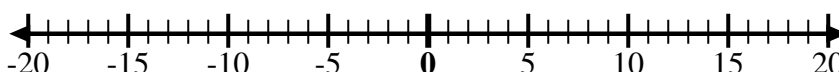
10) Empiece en 1  
y agregue -9



11) Empiece en -3  
y agregue -3



12) Empiece en 2  
y agregue -11



## Respuestas

Ej.  $7 + -12 = -5$

1. \_\_\_\_\_

2. \_\_\_\_\_

3. \_\_\_\_\_

4. \_\_\_\_\_

5. \_\_\_\_\_

6. \_\_\_\_\_

7. \_\_\_\_\_

8. \_\_\_\_\_

9. \_\_\_\_\_

10. \_\_\_\_\_

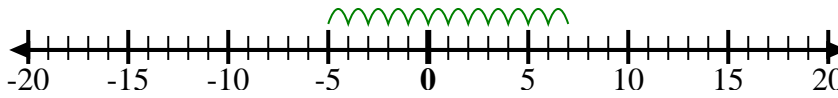
11. \_\_\_\_\_

12. \_\_\_\_\_

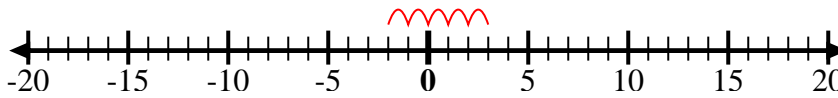


Utilice las rectas numéricas para mostrar cada expresión y resolver.

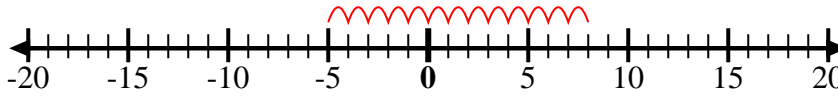
Ej) Empiece en 7  
y agregue -12



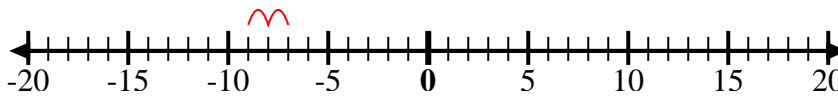
1) Empiece en -2  
y agregue 5



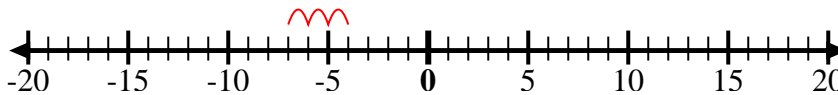
2) Empiece en 8  
y agregue -13



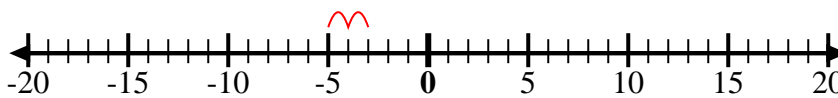
3) Empiece en -7  
y agregue -2



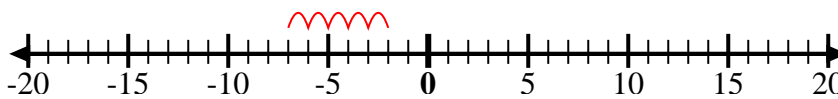
4) Empiece en -4  
y agregue -3



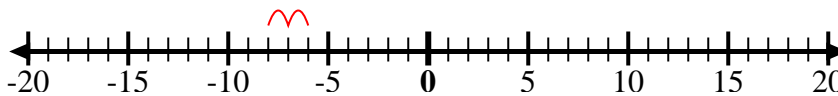
5) Empiece en -3  
y agregue -2



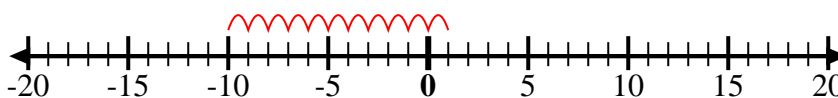
6) Empiece en -7  
y agregue 5



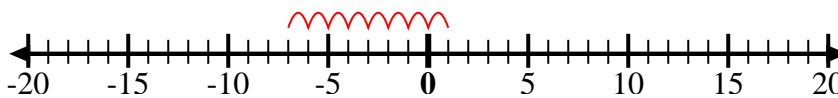
7) Empiece en -6  
y agregue -2



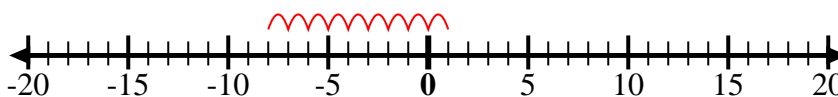
8) Empiece en 1  
y agregue -11



9) Empiece en -7  
y agregue 8



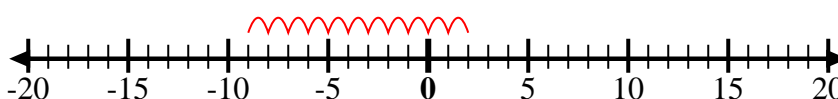
10) Empiece en 1  
y agregue -9



11) Empiece en -3  
y agregue -3



12) Empiece en 2  
y agregue -11



## Respuestas

Ej.  $7 + -12 = -5$

1.  $-2 + 5 = 3$

2.  $8 + -13 = -5$

3.  $-7 + -2 = -9$

4.  $-4 + -3 = -7$

5.  $-3 + -2 = -5$

6.  $-7 + 5 = -2$

7.  $-6 + -2 = -8$

8.  $1 + -11 = -10$

9.  $-7 + 8 = 1$

10.  $1 + -9 = -8$

11.  $-3 + -3 = -6$

12.  $2 + -11 = -9$