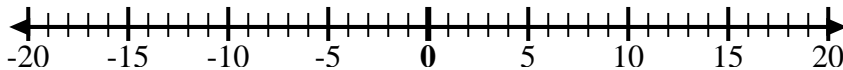


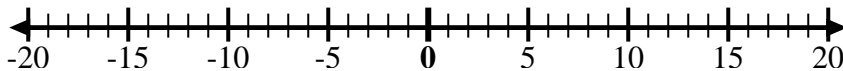


Utilice las rectas numéricas para mostrar cada expresión y resolver.

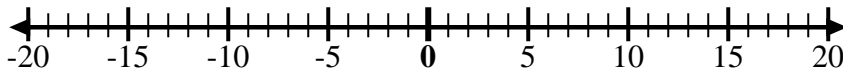
Ej) Empiece en 9
y agregue -4



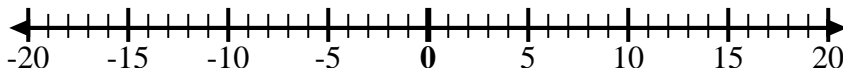
1) Empiece en 5
y agregue -11



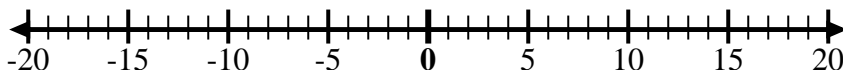
2) Empiece en 2
y agregue -8



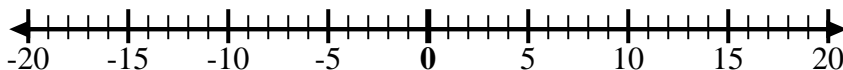
3) Empiece en -5
y agregue -4



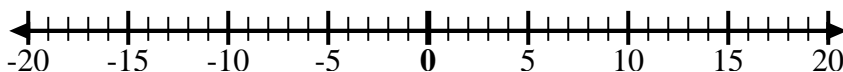
4) Empiece en 0
y agregue 8



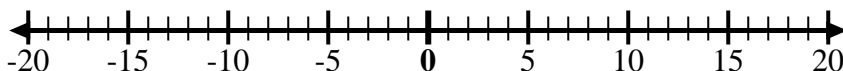
5) Empiece en 5
y agregue -8



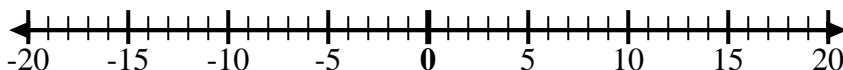
6) Empiece en -7
y agregue 15



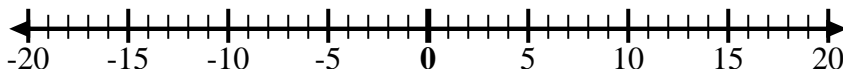
7) Empiece en -9
y agregue 8



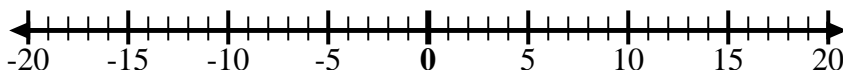
8) Empiece en -2
y agregue -6



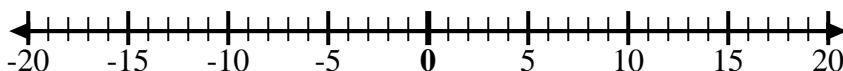
9) Empiece en -5
y agregue 5



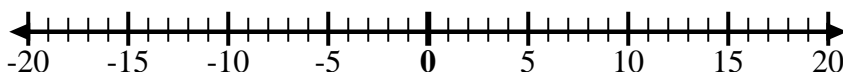
10) Empiece en -1
y agregue -8



11) Empiece en -1
y agregue 7



12) Empiece en
-10 y agregue
14



Respuestas

Ej. $9 + -4 = 5$

1. _____

2. _____

3. _____

4. _____

5. _____

6. _____

7. _____

8. _____

9. _____

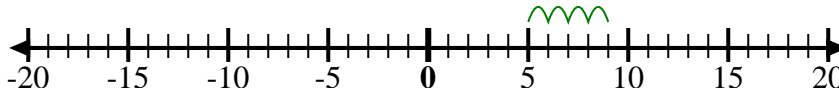
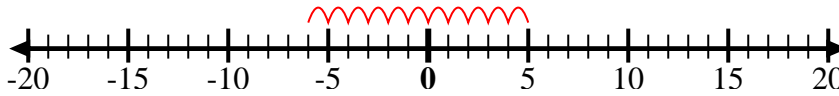
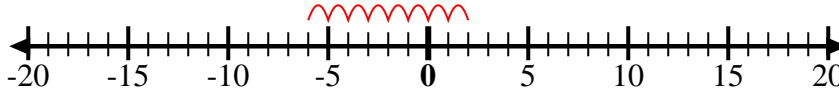
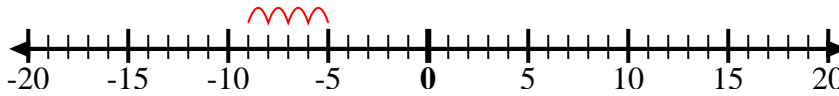
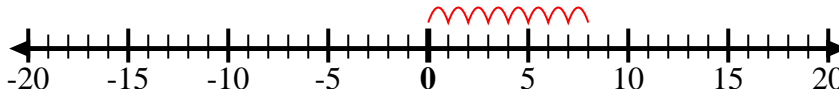
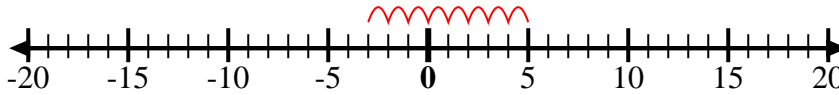
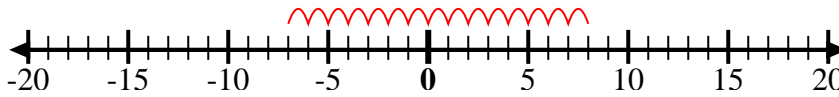
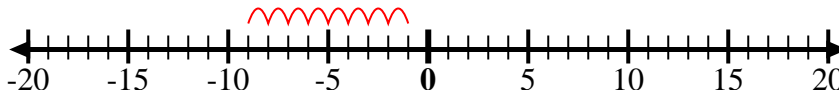
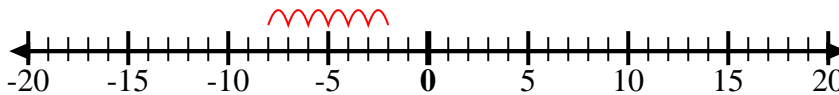
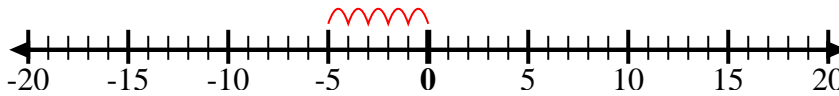
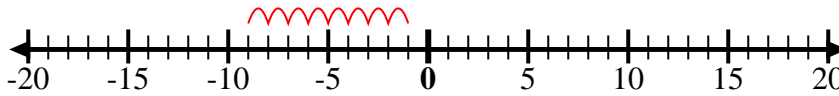
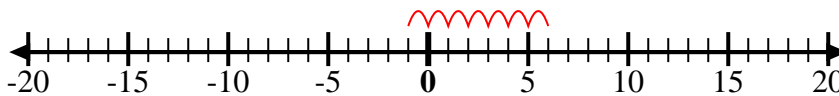
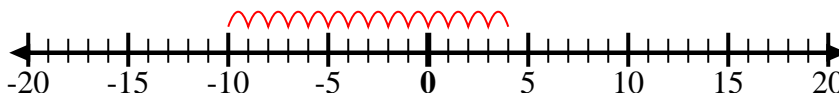
10. _____

11. _____

12. _____



Utilice las rectas numéricas para mostrar cada expresión y resolver.

Ej) Empiece en 9
y agregue -41) Empiece en 5
y agregue -112) Empiece en 2
y agregue -83) Empiece en -5
y agregue -44) Empiece en 0
y agregue 85) Empiece en 5
y agregue -86) Empiece en -7
y agregue 157) Empiece en -9
y agregue 88) Empiece en -2
y agregue -69) Empiece en -5
y agregue 510) Empiece en -1
y agregue -811) Empiece en -1
y agregue 712) Empiece en
-10 y agregue
14**Respuestas**

Ej. $9 + -4 = 5$

1. $5 + -11 = -6$

2. $2 + -8 = -6$

3. $-5 + -4 = -9$

4. $0 + 8 = 8$

5. $5 + -8 = -3$

6. $-7 + 15 = 8$

7. $-9 + 8 = -1$

8. $-2 + -6 = -8$

9. $-5 + 5 = 0$

10. $-1 + -8 = -9$

11. $-1 + 7 = 6$

12. $-10 + 14 = 4$