





Usar las matrices proporcionadas para resolver cada problema.


1)  $10 \times 15 =$



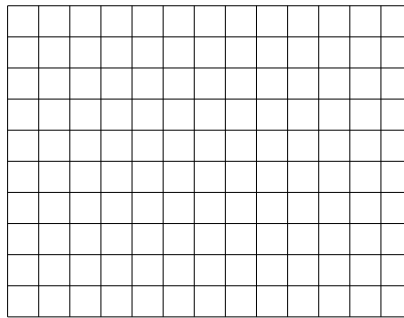
2)  $13 \times 10 =$




3)  $10 \times 19 =$




4)  $10 \times 13 =$



5)  $10 \times 11 =$



6)  $18 \times 10 =$



**Respuestas**

1. \_\_\_\_\_

2. \_\_\_\_\_

3. \_\_\_\_\_

4. \_\_\_\_\_

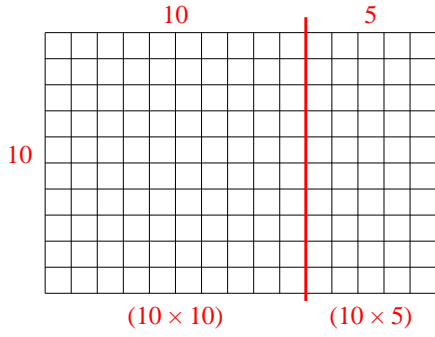
5. \_\_\_\_\_

6. \_\_\_\_\_

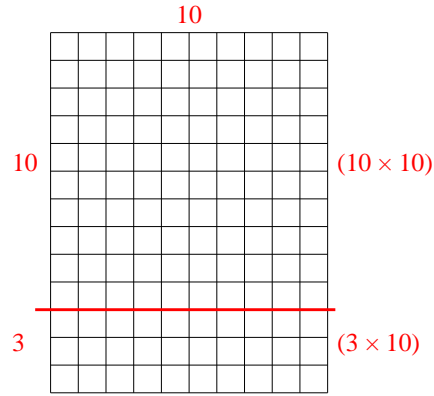


Usar las matrices proporcionadas para resolver cada problema.

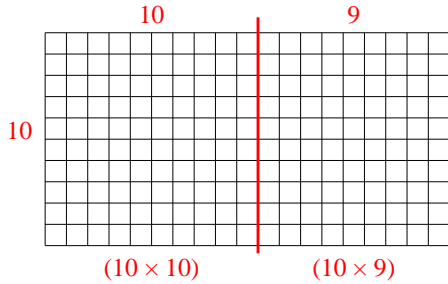
1)  $10 \times 15 =$



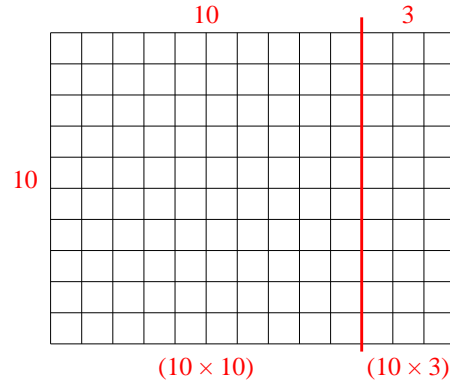
2)  $13 \times 10 =$



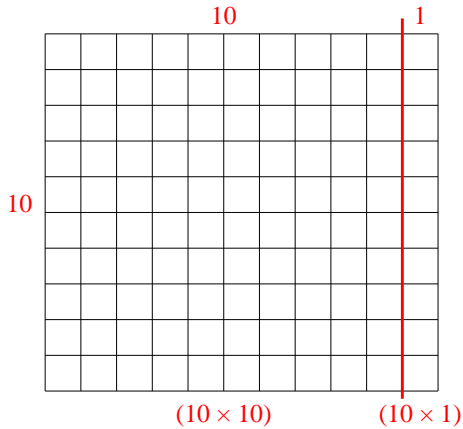
3)  $10 \times 19 =$



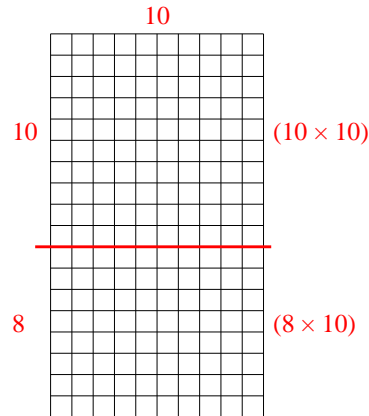
4)  $10 \times 13 =$



5)  $10 \times 11 =$



6)  $18 \times 10 =$



**Respuestas**

1. 150

2. 130

3. 190

4. 130

5. 110

6. 180