

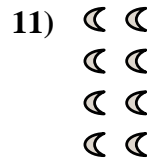


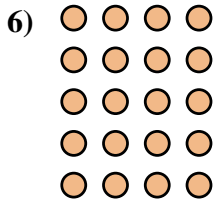
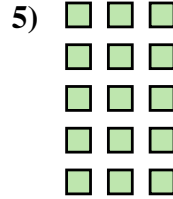
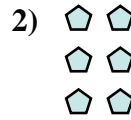
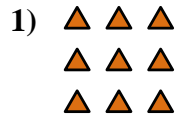




Escribe cada agrupaciones como un problema de suma y resuélvela.



Respuestas

Ej. $2+2=4$

1. _____

2. _____

3. _____

4. _____

5. _____

6. _____

7. _____

8. _____

9. _____

10. _____

11. _____




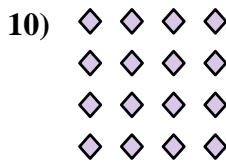

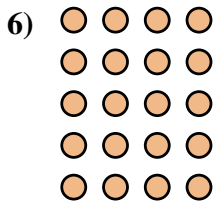
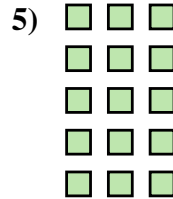
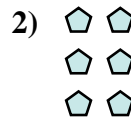
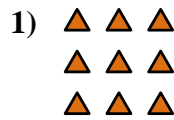
12. _____

13. _____

14. _____



Escribe cada agrupaciones como un problema de suma y resuélvela.



Respuestas

Ej. 2+2=4

1. 3+3+3=9

2. 2+2+2=6

3. 4+4=8

4. 5+5+5=15

5. 3+3+3+3+3=15

6. 4+4+4+4+4=20

7. 3+3+3+3=12

8. 3+3=6

9. 5+5+5+5+5=25

10. 4+4+4+4=16

11. 2+2+2+2=8

12. 5+5=10

13. 4+4+4=12

14. 5+5+5+5=20