



Haga coincidir la descripción de la parte superior con la imagen visual en la parte inferior.

Respuestas

1) \overleftrightarrow{AD} intersecting \overleftrightarrow{BC} at point E

1. _____

2) \overrightarrow{AC} parallel to \overrightarrow{EB}

2. _____

3) D as the midpoint of \overleftrightarrow{CE}

3. _____

4) \overleftrightarrow{AC} intersected by \overline{BD}

4. _____

5) \overline{BE} intersecting \overleftrightarrow{CD}

5. _____

6) \overleftrightarrow{BC} intersecting $\angle ACD$

6. _____

7) $\angle BAC$ creating an obtuse angle

7. _____

8) Acute $\angle ABC$ intersecting \overleftrightarrow{AD}

8. _____

9) \overleftrightarrow{AB} intersecting \overleftrightarrow{AD}

9. _____

10) \overleftrightarrow{BA} intersecting \overleftrightarrow{AD}

10. _____

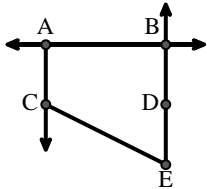
11) \overleftrightarrow{AB} parallel to \overleftrightarrow{CD}

11. _____

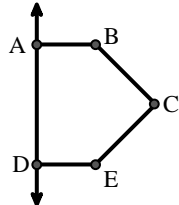
12) Right $\angle ADE$

12. _____

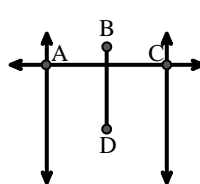
A.



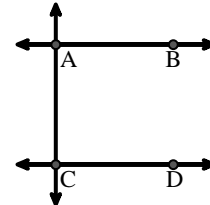
B.



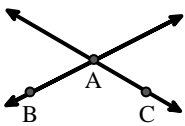
C.



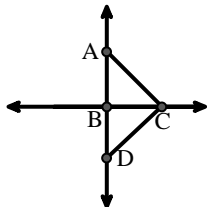
D.



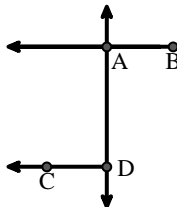
E.



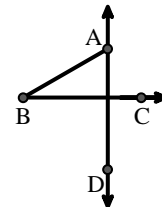
F.



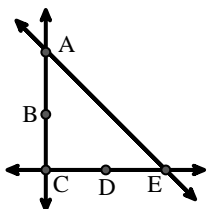
G.



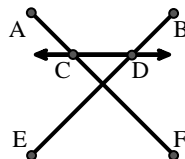
H.



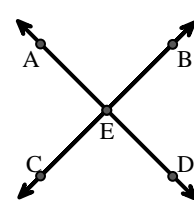
I.



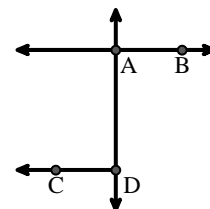
J.



K.



L.





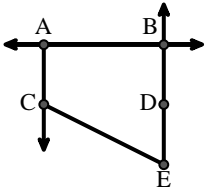
Haga coincidir la descripción de la parte superior con la imagen visual en la parte inferior.

- 1) \overleftrightarrow{AD} intersecting \overleftrightarrow{BC} at point E
- 2) \overrightarrow{AC} parallel to \overrightarrow{EB}
- 3) D as the midpoint of \overleftrightarrow{CE}
- 4) \overleftrightarrow{AC} intersected by \overline{BD}
- 5) \overline{BE} intersecting \overleftrightarrow{CD}
- 6) \overleftrightarrow{BC} intersecting $\angle ACD$
- 7) $\angle BAC$ creating an obtuse angle
- 8) Acute $\angle ABC$ intersecting \overleftrightarrow{AD}
- 9) \overleftrightarrow{AB} intersecting \overleftrightarrow{AD}
- 10) \overrightarrow{BA} intersecting \overleftrightarrow{AD}
- 11) \overleftrightarrow{AB} parallel to \overleftrightarrow{CD}
- 12) Right $\angle ADE$

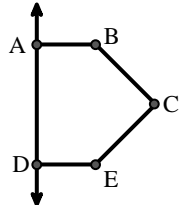
Respuestas

1. **K**
2. **A**
3. **I**
4. **C**
5. **J**
6. **F**
7. **E**
8. **H**
9. **L**
10. **G**
11. **D**
12. **B**

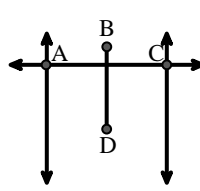
A.



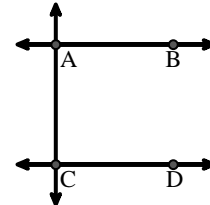
B.



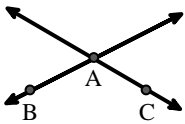
C.



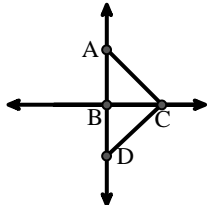
D.



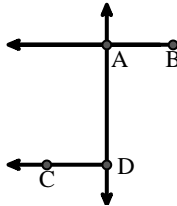
E.



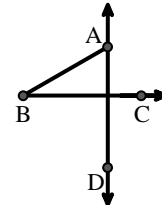
F.



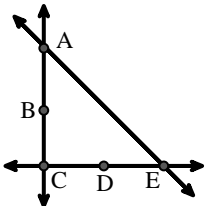
G.



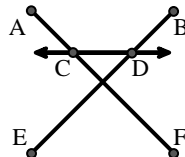
H.



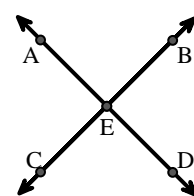
I.



J.



K.



L.

