





Cree y etiquete el gráfico de líneas usando el conjunto de números proporcionados.


- 1)
- |                |                |                |                |                |                |                |                |
|----------------|----------------|----------------|----------------|----------------|----------------|----------------|----------------|
| 4              | $3\frac{1}{4}$ | $5\frac{1}{4}$ | $4\frac{3}{4}$ | 3              | $5\frac{3}{4}$ | $5\frac{1}{4}$ | $4\frac{2}{4}$ |
| $4\frac{3}{4}$ | $3\frac{1}{4}$ | $5\frac{1}{4}$ | 4              | $4\frac{1}{4}$ | $3\frac{3}{4}$ | $3\frac{3}{4}$ | $3\frac{3}{4}$ |



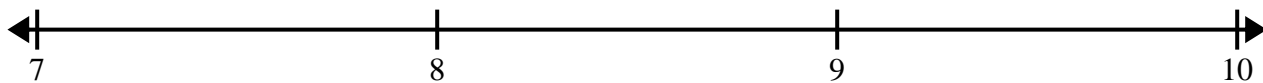
- 2)
- |                |                |                |                |                |                |                |                |
|----------------|----------------|----------------|----------------|----------------|----------------|----------------|----------------|
| $3\frac{1}{4}$ | $3\frac{2}{4}$ | $3\frac{3}{4}$ | $3\frac{1}{4}$ | $5\frac{3}{4}$ | $4\frac{2}{4}$ | $4\frac{3}{4}$ | 3              |
| 4              | 4              | $5\frac{2}{4}$ | $4\frac{2}{4}$ | $3\frac{3}{4}$ | $4\frac{1}{4}$ | $3\frac{3}{4}$ | $5\frac{1}{4}$ |




- 3)
- |                |   |                |                |                |   |                |                |
|----------------|---|----------------|----------------|----------------|---|----------------|----------------|
| $9\frac{1}{2}$ | 8 | $7\frac{1}{2}$ | $9\frac{1}{2}$ | 8              | 8 | $9\frac{1}{2}$ | 7              |
| 9              | 7 | $7\frac{1}{2}$ | 7              | $7\frac{1}{2}$ | 9 | 9              | $8\frac{1}{2}$ |



- 4)
- |                |                |                |                |                |                |                |                |
|----------------|----------------|----------------|----------------|----------------|----------------|----------------|----------------|
| 7              | $9\frac{6}{8}$ | $7\frac{4}{8}$ | $7\frac{7}{8}$ | $7\frac{1}{8}$ | $8\frac{4}{8}$ | $9\frac{1}{8}$ | $8\frac{6}{8}$ |
| $7\frac{7}{8}$ | $9\frac{1}{8}$ | $9\frac{5}{8}$ | $7\frac{6}{8}$ | 7              | $8\frac{6}{8}$ | $7\frac{4}{8}$ | $7\frac{1}{8}$ |



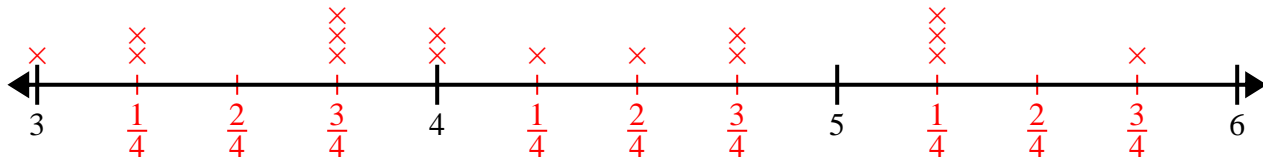
- 5)
- |                 |                 |                 |                 |                |                |                 |                 |
|-----------------|-----------------|-----------------|-----------------|----------------|----------------|-----------------|-----------------|
| $10\frac{7}{8}$ | $9\frac{6}{8}$  | $10\frac{6}{8}$ | $8\frac{1}{8}$  | $8\frac{5}{8}$ | $8\frac{4}{8}$ | $8\frac{3}{8}$  | $8\frac{3}{8}$  |
| $9\frac{2}{8}$  | $10\frac{3}{8}$ | $10\frac{5}{8}$ | $10\frac{6}{8}$ | $9\frac{2}{8}$ | $9\frac{4}{8}$ | $10\frac{3}{8}$ | $10\frac{2}{8}$ |



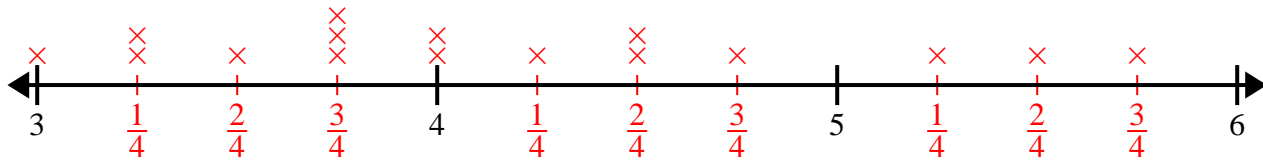


Cree y etiquete el gráfico de líneas usando el conjunto de números proporcionados.

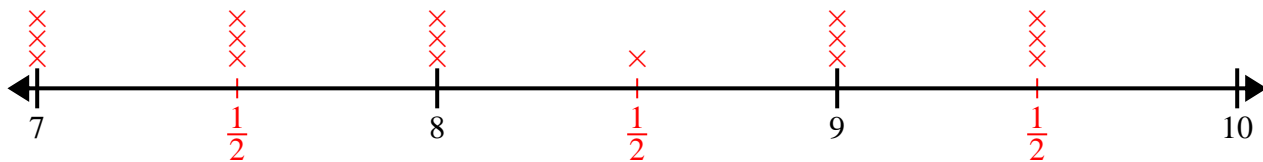
- 1) 4       $3\frac{1}{4}$        $5\frac{1}{4}$        $4\frac{3}{4}$       3       $5\frac{3}{4}$        $5\frac{1}{4}$        $4\frac{2}{4}$   
 $4\frac{3}{4}$        $3\frac{1}{4}$        $5\frac{1}{4}$       4       $4\frac{1}{4}$        $3\frac{3}{4}$        $3\frac{3}{4}$        $3\frac{3}{4}$



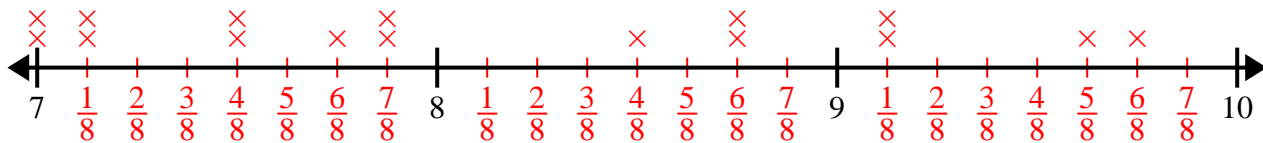
- 2)  $3\frac{1}{4}$        $3\frac{2}{4}$        $3\frac{3}{4}$        $3\frac{1}{4}$        $5\frac{3}{4}$        $4\frac{2}{4}$        $4\frac{3}{4}$       3  
 4      4       $5\frac{2}{4}$        $4\frac{2}{4}$        $3\frac{3}{4}$        $4\frac{1}{4}$        $3\frac{3}{4}$        $5\frac{1}{4}$



- 3)  $9\frac{1}{2}$       8       $7\frac{1}{2}$        $9\frac{1}{2}$       8      8       $9\frac{1}{2}$       7  
 9      7       $7\frac{1}{2}$       7       $7\frac{1}{2}$       9      9       $8\frac{1}{2}$



- 4) 7       $9\frac{6}{8}$        $7\frac{4}{8}$        $7\frac{7}{8}$        $7\frac{1}{8}$        $8\frac{4}{8}$        $9\frac{1}{8}$        $8\frac{6}{8}$   
 $7\frac{7}{8}$        $9\frac{1}{8}$        $9\frac{5}{8}$        $7\frac{6}{8}$       7       $8\frac{6}{8}$        $7\frac{4}{8}$        $7\frac{1}{8}$



- 5)  $10\frac{7}{8}$        $9\frac{6}{8}$        $10\frac{6}{8}$        $8\frac{1}{8}$        $8\frac{5}{8}$        $8\frac{4}{8}$        $8\frac{3}{8}$        $8\frac{3}{8}$   
 $9\frac{2}{8}$        $10\frac{3}{8}$        $10\frac{5}{8}$        $10\frac{6}{8}$        $9\frac{2}{8}$        $9\frac{4}{8}$        $10\frac{3}{8}$        $10\frac{2}{8}$

