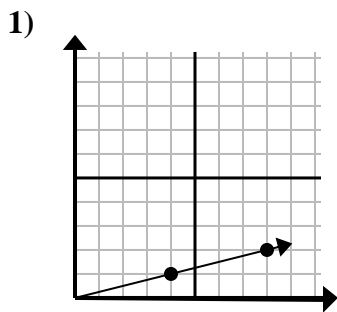


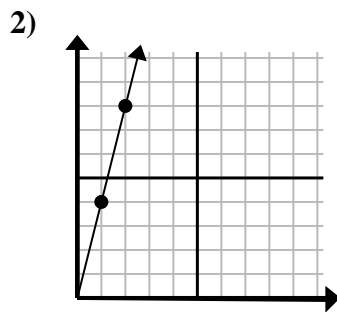


Determine qué opción representa un punto en la línea si continuara.

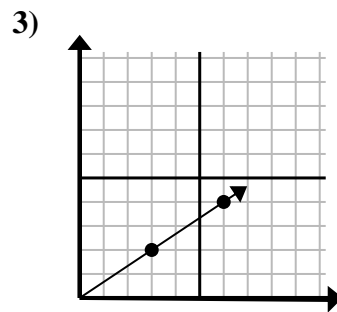
Respuestas



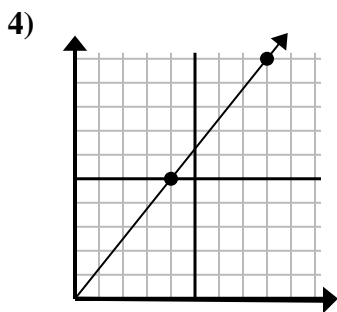
- A. (10, 4)
- B. (13, 5)
- C. (12, 3)
- D. (9, 3)



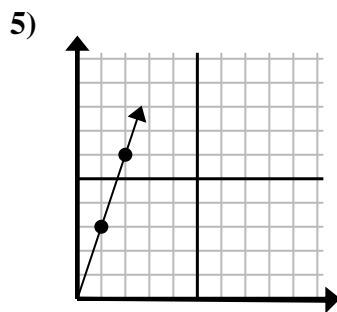
- A. (3, 9)
- B. (7, 8)
- C. (5, 5)
- D. (3, 12)



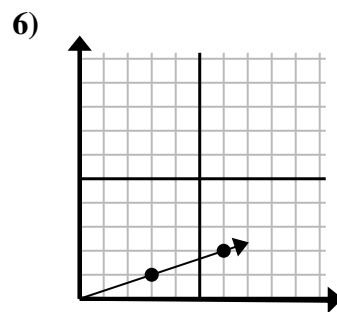
- A. (12, 8)
- B. (9, 6)
- C. (18, 12)
- D. (11, 3)



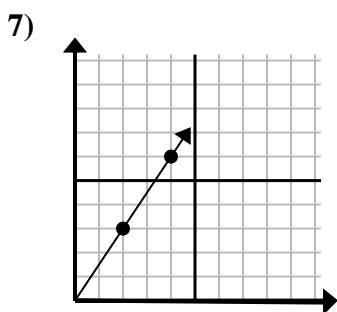
- A. (9, 9)
- B. (12, 15)
- C. (12, 7)
- D. (28, 35)



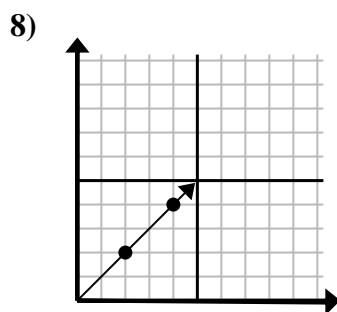
- A. (3, 9)
- B. (4, 12)
- C. (3, 5)
- D. (7, 4)



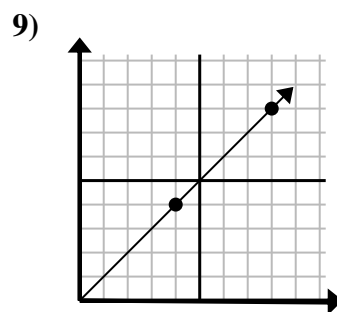
- A. (9, 3)
- B. (11, 4)
- C. (11, 5)
- D. (15, 5)



- A. (8, 7)
- B. (6, 4)
- C. (6, 9)
- D. (12, 18)



- A. (6, 6)
- B. (8, 8)
- C. (10, 10)
- D. (14, 14)



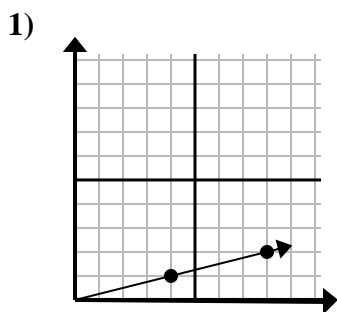
- A. (24, 24)
- B. (12, 12)
- C. (28, 28)
- D. (20, 20)

- 1. _____
- 2. _____
- 3. _____
- 4. _____
- 5. _____
- 6. _____
- 7. _____
- 8. _____
- 9. _____

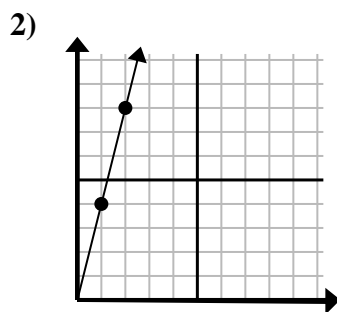


Determine qué opción representa un punto en la línea si continuara.

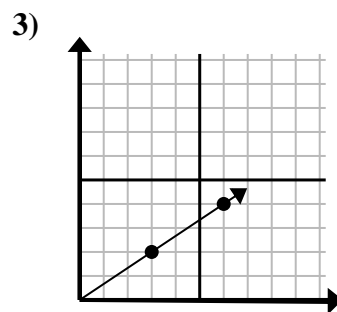
Respuestas



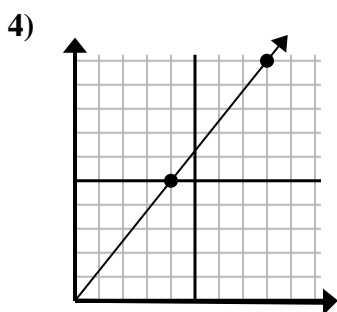
- A. (10 , 4)
- B. (13 , 5)
- C. (12 , 3)
- D. (9 , 3)



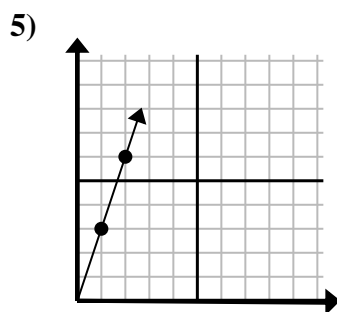
- A. (3 , 9)
- B. (7 , 8)
- C. (5 , 5)
- D. (3 , 12)



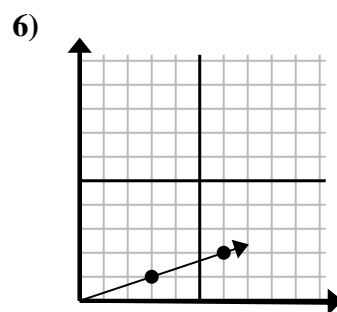
- A. (12 , 8)
- B. (9 , 6)
- C. (18 , 12)
- D. (11 , 3)



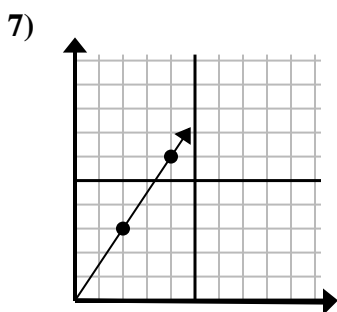
- A. (9 , 9)
- B. (12 , 15)
- C. (12 , 7)
- D. (28 , 35)



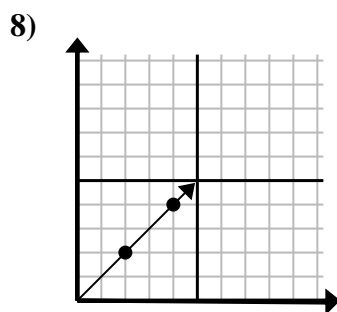
- A. (3 , 9)
- B. (4 , 12)
- C. (3 , 5)
- D. (7 , 4)



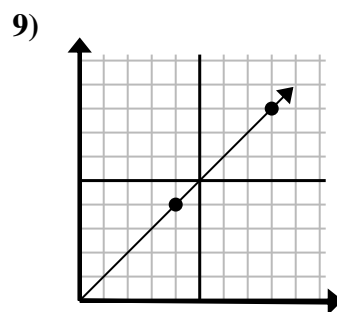
- A. (9 , 3)
- B. (11 , 4)
- C. (11 , 5)
- D. (15 , 5)



- A. (8 , 7)
- B. (6 , 4)
- C. (6 , 9)
- D. (12 , 18)



- A. (6 , 6)
- B. (8 , 8)
- C. (10 , 10)
- D. (14 , 14)



- A. (24 , 24)
- B. (12 , 12)
- C. (28 , 28)
- D. (20 , 20)

- 1. **C**
- 2. **D**
- 3. **B**
- 4. **B**
- 5. **A**
- 6. **A**
- 7. **C**
- 8. **A**
- 9. **B**