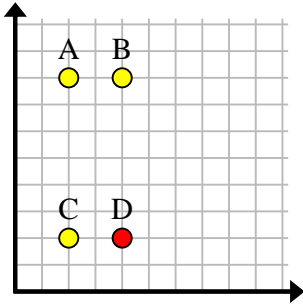


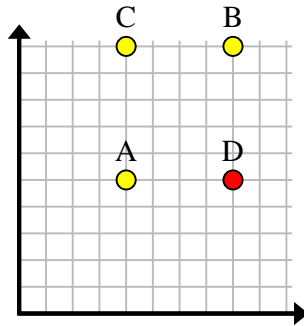


Encuentra las coordenadas del punto D para hacer un rectángulo.

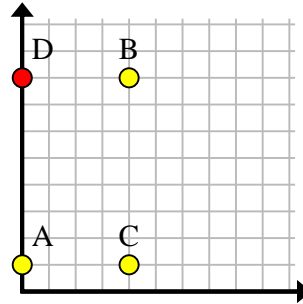
Ej)



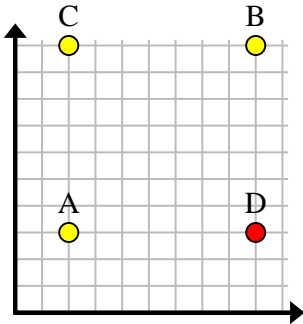
1)



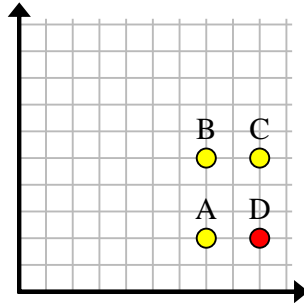
2)



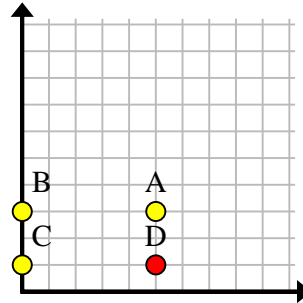
3)



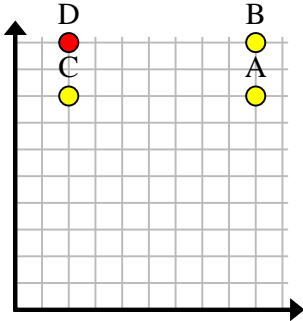
4)



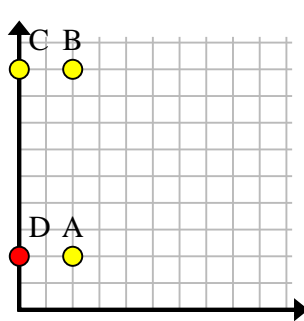
5)



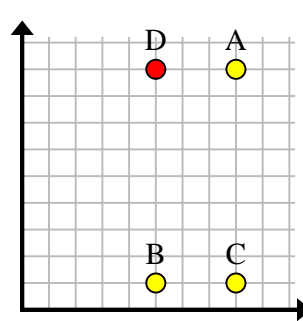
6)



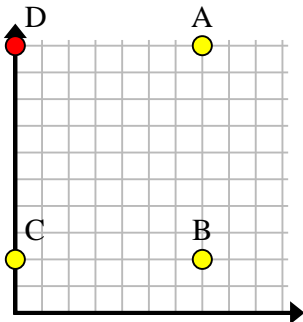
7)



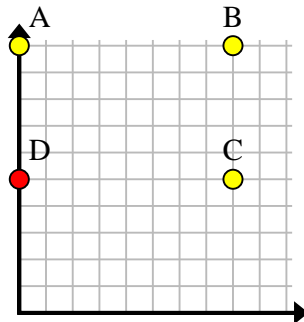
8)



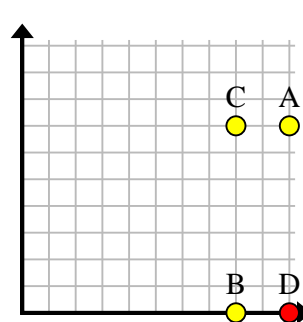
9)



10)



11)



Respuestas

Ej. (4, 2)

1. (8, 5)

2. (0, 8)

3. (9, 3)

4. (9, 2)

5. (5, 1)

6. (2, 10)

7. (0, 2)

8. (5, 9)

9. (0, 10)

10. (0, 5)

11. (10, 0)