
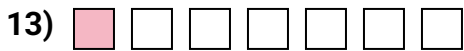


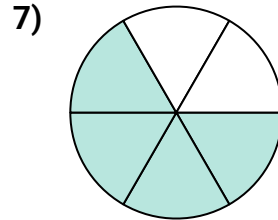
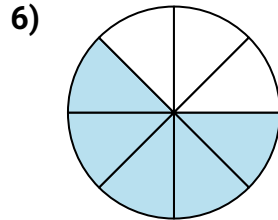
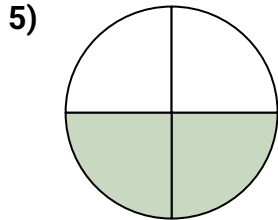


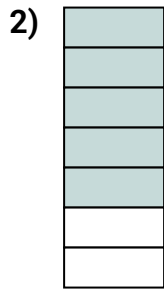





Determina si el área sombreada es 'más', 'menos' o 'igual' que la mitad.

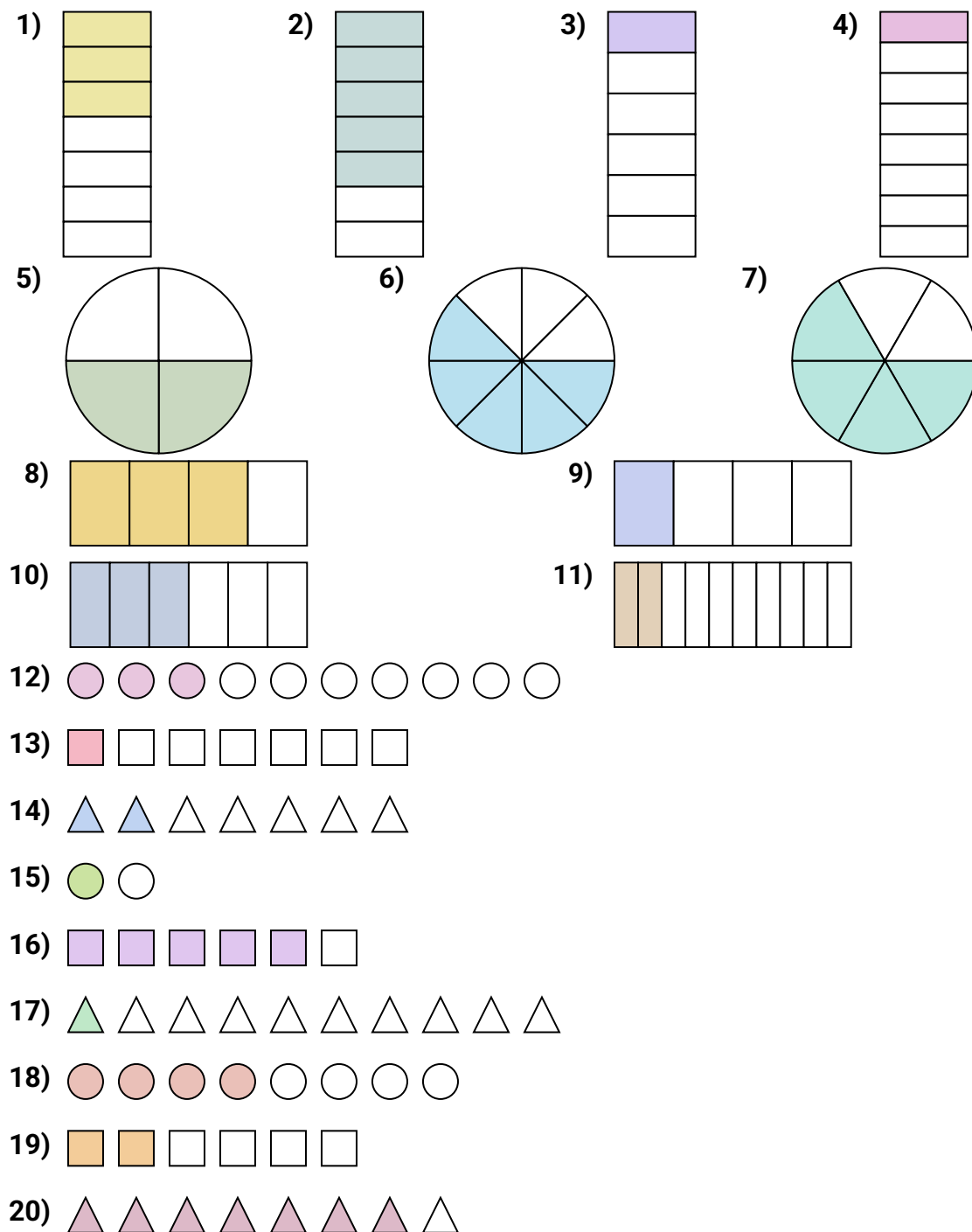
Respuestas



1. _____
2. _____
3. _____
4. _____
5. _____
6. _____
7. _____
8. _____
9. _____
10. _____
11. _____
12. _____
13. _____
14. _____
15. _____
16. _____
17. _____
18. _____
19. _____
20. _____



Determina si el área sombreada es 'más', 'menos' o 'igual' que la mitad.

Respuestas

1. **menor**
2. **mayor**
3. **menor**
4. **menor**
5. **igual**
6. **mayor**
7. **mayor**
8. **mayor**
9. **menor**
10. **igual**
11. **menor**
12. **menor**
13. **menor**
14. **menor**
15. **igual**
16. **mayor**
17. **menor**
18. **igual**
19. **menor**
20. **mayor**