











Determina cuál fracción va en medio para que la comparación sea verdadera.



Respuestas



1) $\frac{1}{3}$  < ? < $\frac{6}{8}$ 



$\frac{7}{8}$  $\frac{1}{2}$ 



$\frac{5}{6}$  $\frac{1}{6}$ 



2) $\frac{2}{8}$  < ? < $\frac{4}{6}$ 



$\frac{7}{8}$  $\frac{3}{6}$ 



$\frac{3}{4}$  $\frac{1}{6}$ 



3) $\frac{2}{8}$  < ? < $\frac{5}{8}$ 



$\frac{1}{8}$  $\frac{2}{3}$ 





$\frac{1}{6}$  $\frac{3}{8}$ 



4) $\frac{1}{8}$  < ? < $\frac{2}{8}$ 


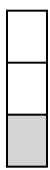


$\frac{1}{3}$  $\frac{1}{6}$ 



$\frac{2}{4}$  $\frac{4}{6}$ 



5) $\frac{1}{6}$  < ? < $\frac{2}{3}$ 



$\frac{1}{8}$  $\frac{4}{8}$  $\frac{7}{8}$  $\frac{6}{8}$ 



6) $\frac{1}{8}$  < ? < $\frac{1}{4}$ 



$\frac{4}{6}$  $\frac{1}{3}$  $\frac{1}{6}$  $\frac{2}{4}$ 



7) $\frac{1}{4}$  < ? < $\frac{3}{8}$ 

$\frac{4}{8}$  $\frac{3}{4}$ 

$\frac{1}{3}$  $\frac{5}{8}$ 

8) $\frac{1}{4}$  < ? < $\frac{1}{2}$ 

$\frac{1}{3}$  $\frac{6}{8}$ 

$\frac{1}{8}$  $\frac{5}{6}$ 

1. _____
2. _____
3. _____
4. _____
5. _____
6. _____
7. _____
8. _____



Determina cuál fracción va en medio para que la comparación sea verdadera.

Respuestas

1) $\frac{1}{3}$ < ? < $\frac{6}{8}$

$\frac{7}{8}$ $\frac{1}{2}$

$\frac{5}{6}$ $\frac{1}{6}$

2) $\frac{2}{8}$ < ? < $\frac{4}{6}$

$\frac{7}{8}$ $\frac{3}{6}$

$\frac{3}{4}$ $\frac{1}{6}$

3) $\frac{2}{8}$ < ? < $\frac{5}{8}$

$\frac{1}{8}$ $\frac{2}{3}$

$\frac{1}{6}$ $\frac{3}{8}$

4) $\frac{1}{8}$ < ? < $\frac{2}{8}$

$\frac{1}{3}$ $\frac{1}{6}$

$\frac{2}{4}$ $\frac{4}{6}$

5) $\frac{1}{6}$ < ? < $\frac{2}{3}$

$\frac{1}{8}$ $\frac{4}{8}$

$\frac{7}{8}$ $\frac{6}{8}$

6) $\frac{1}{8}$ < ? < $\frac{1}{4}$

$\frac{4}{6}$ $\frac{1}{3}$

$\frac{1}{6}$ $\frac{2}{4}$

7) $\frac{1}{4}$ < ? < $\frac{3}{8}$

$\frac{4}{8}$ $\frac{3}{4}$

$\frac{1}{3}$ $\frac{5}{8}$

8) $\frac{1}{4}$ < ? < $\frac{1}{2}$

$\frac{1}{3}$ $\frac{6}{8}$

$\frac{1}{8}$ $\frac{5}{6}$

1. $\frac{1}{2}$
2. $\frac{3}{6}$
3. $\frac{3}{8}$
4. $\frac{1}{6}$
5. $\frac{4}{8}$
6. $\frac{1}{6}$
7. $\frac{1}{3}$
8. $\frac{1}{3}$