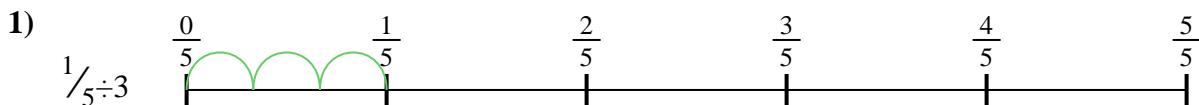




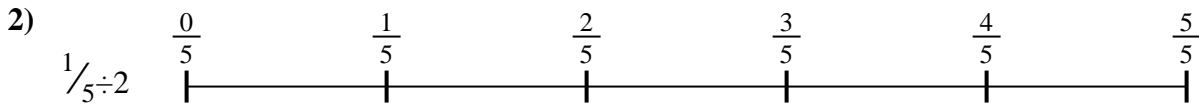
Usa la línea numérica para resolver cada problema. El primero ya está hecho como ejemplo

Respuestas



1. _____

2. _____




3. _____

4. _____




5. _____

6. _____



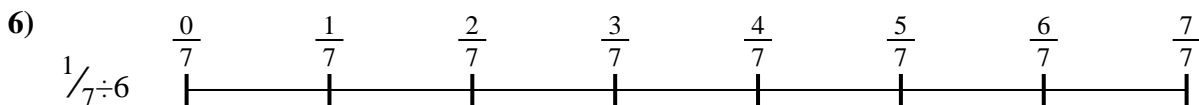


7. _____

8. _____



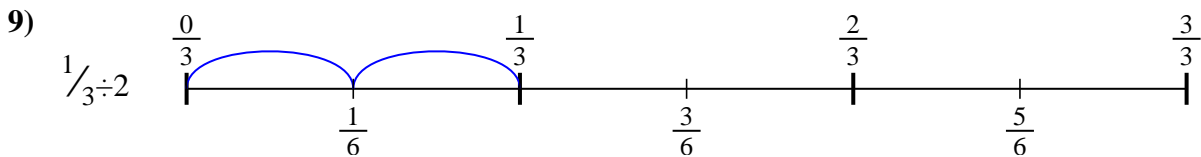
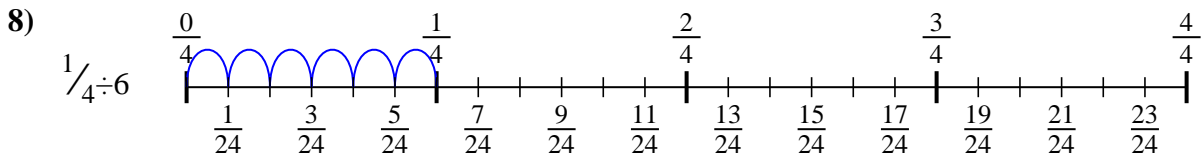
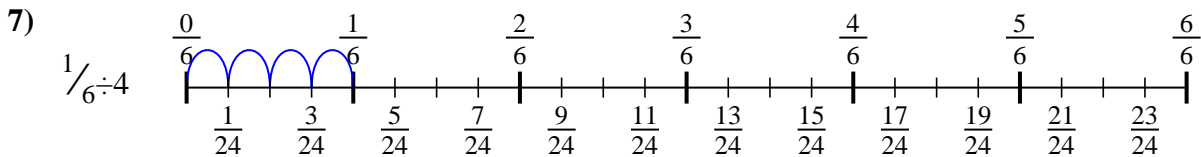
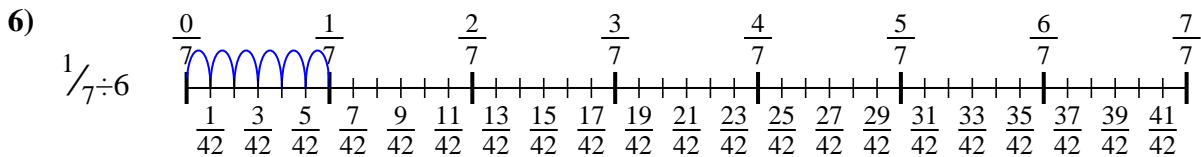
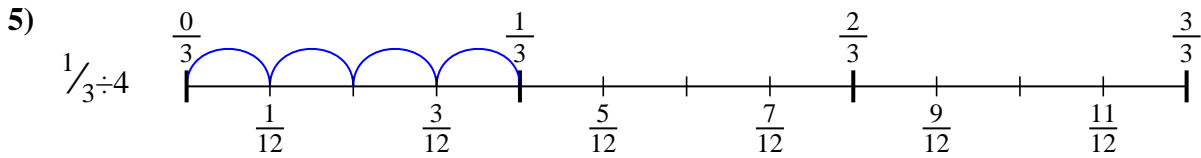
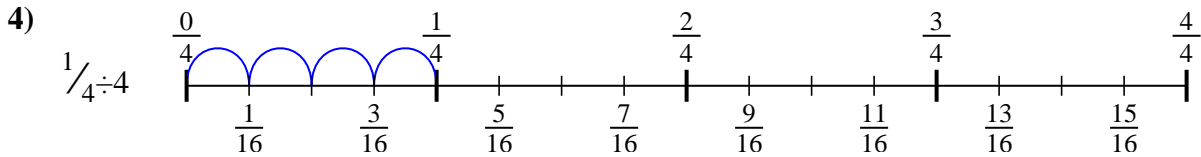
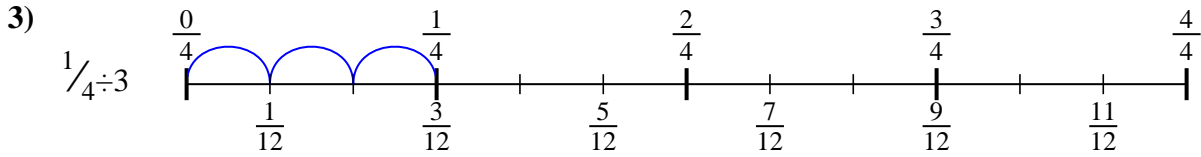
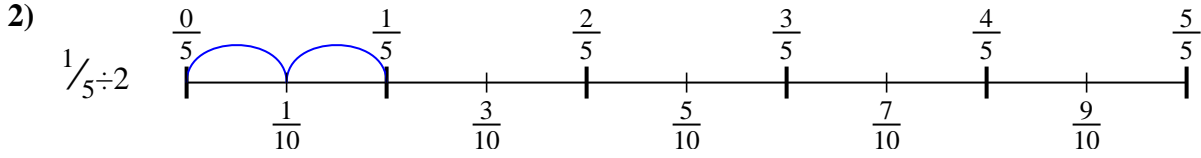
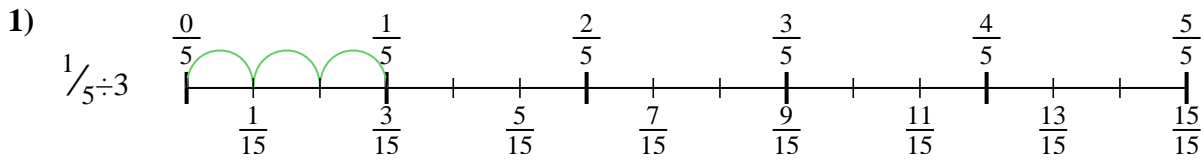
9. _____





Usa la línea numérica para resolver cada problema. El primero ya está hecho como ejemplo

Respuestas



1. $\frac{1}{15}$

2. $\frac{1}{10}$

3. $\frac{1}{12}$

4. $\frac{1}{16}$

5. $\frac{1}{12}$

6. $\frac{1}{42}$

7. $\frac{1}{24}$

8. $\frac{1}{24}$

9. $\frac{1}{6}$



Usa la línea numérica para resolver cada problema. El primero ya está hecho como ejemplo

Respuestas

$\frac{1}{16}$

$\frac{1}{15}$

$\frac{1}{12}$

$\frac{1}{42}$

$\frac{1}{12}$

$\frac{1}{10}$

$\frac{1}{24}$

$\frac{1}{6}$

$\frac{1}{24}$

1. _____

2. _____

3. _____

4. _____

5. _____

6. _____

7. _____

8. _____

9. _____

