




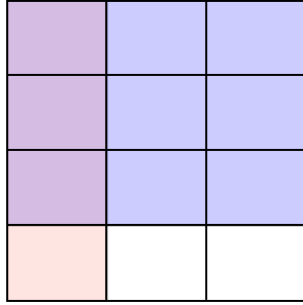


Usa la caja para mostrar de manera visual cómo multiplicar dos fracciones.

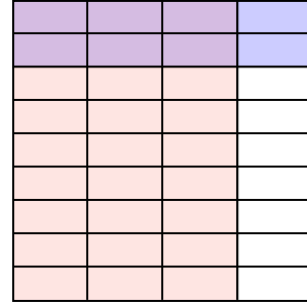
Ej)  $\frac{8}{9} \times \frac{5}{8} =$




1)  $\frac{1}{3} \times \frac{3}{4} =$



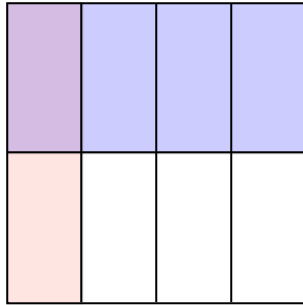
2)  $\frac{3}{4} \times \frac{2}{9} =$



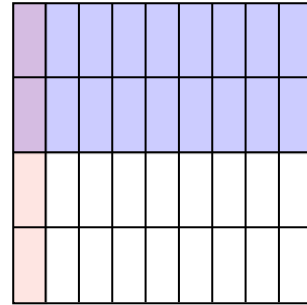
3)  $\frac{1}{2} \times \frac{1}{2} =$



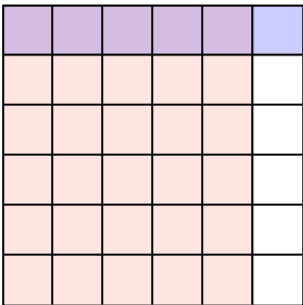
4)  $\frac{1}{4} \times \frac{1}{2} =$



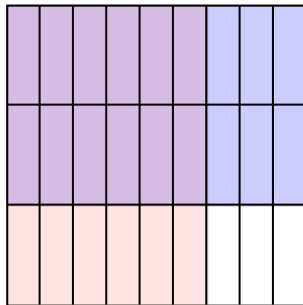
5)  $\frac{1}{9} \times \frac{2}{4} =$



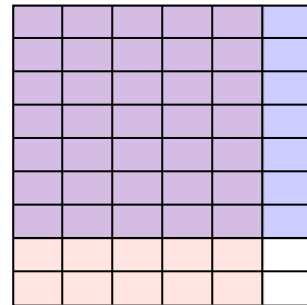
6)  $\frac{5}{6} \times \frac{1}{6} =$




7)  $\frac{6}{9} \times \frac{2}{3} =$



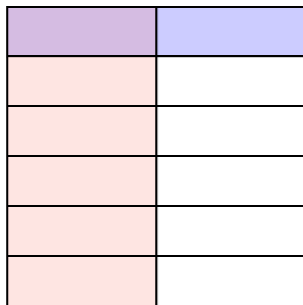
8)  $\frac{5}{6} \times \frac{7}{9} =$



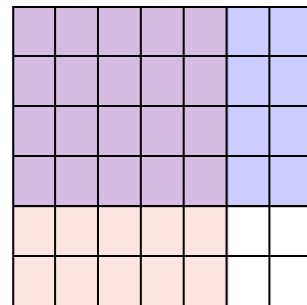
9)  $\frac{2}{4} \times \frac{2}{6} =$



10)  $\frac{1}{2} \times \frac{1}{6} =$



11)  $\frac{5}{7} \times \frac{4}{6} =$



**Respuestas**

- Ej.  $\frac{40}{72}$
- 1.  $\frac{3}{12}$
- 2.  $\frac{6}{36}$
- 3.  $\frac{1}{4}$
- 4.  $\frac{1}{8}$
- 5.  $\frac{2}{36}$
- 6.  $\frac{5}{36}$
- 7.  $\frac{12}{27}$
- 8.  $\frac{35}{54}$
- 9.  $\frac{4}{24}$
- 10.  $\frac{1}{12}$
- 11.  $\frac{20}{42}$