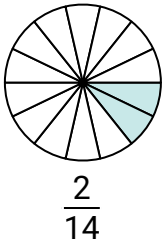




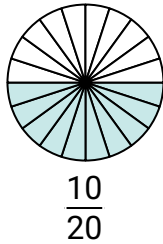
Determina cuál letra mejor representa a una fracción equivalente.

Respuestas

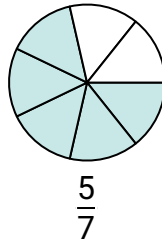
1)



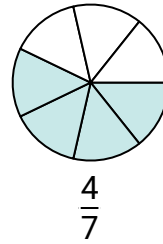
2)



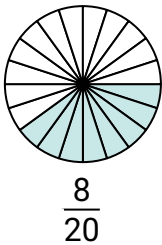
3)



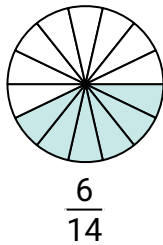
4)



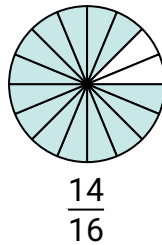
5)



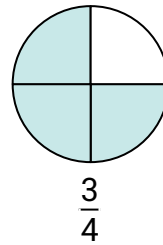
6)



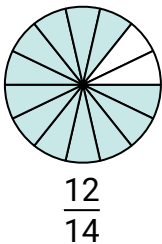
7)



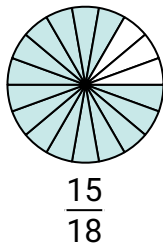
8)



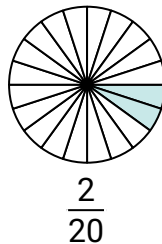
9)



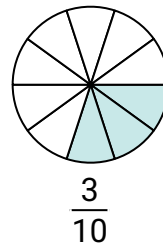
10)



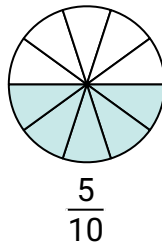
11)



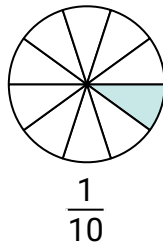
12)



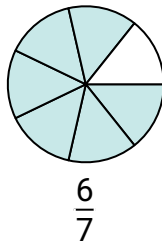
A.



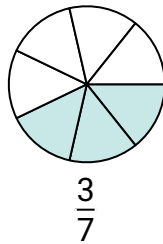
B.



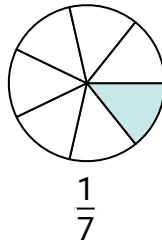
C.



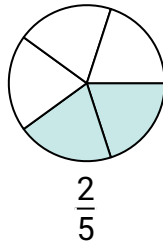
D.



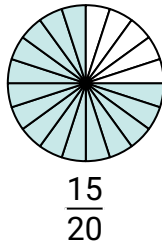
E.



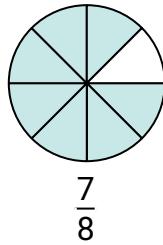
F.



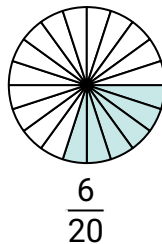
G.



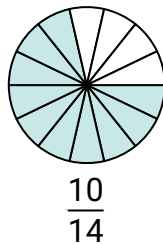
H.



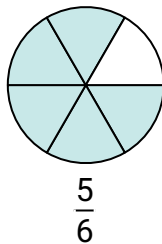
I.



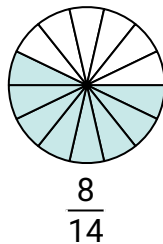
J.



K.



L.



1. _____

2. _____

3. _____

4. _____

5. _____

6. _____

7. _____

8. _____

9. _____

10. _____

11. _____

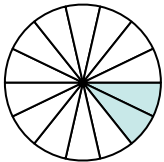
12. _____



Determina cuál letra mejor representa a una fracción equivalente.

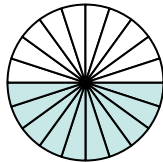
Respuestas

1)



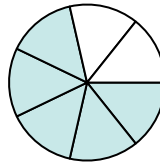
$$\frac{2}{14}$$

2)



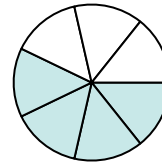
$$\frac{10}{20}$$

3)



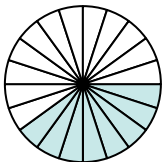
$$\frac{5}{7}$$

4)



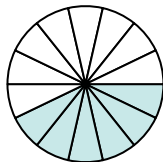
$$\frac{4}{7}$$

5)



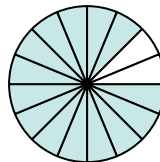
$$\frac{8}{20}$$

6)



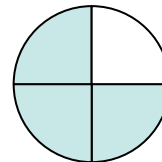
$$\frac{6}{14}$$

7)



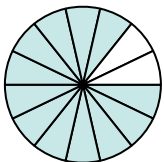
$$\frac{14}{16}$$

8)



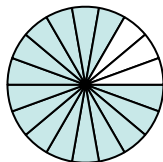
$$\frac{3}{4}$$

9)



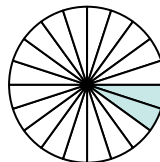
$$\frac{12}{14}$$

10)



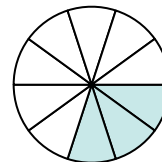
$$\frac{15}{18}$$

11)



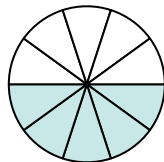
$$\frac{2}{20}$$

12)



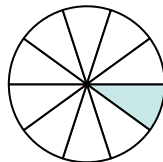
$$\frac{3}{10}$$

A.



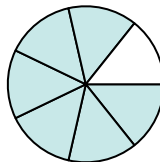
$$\frac{5}{10}$$

B.



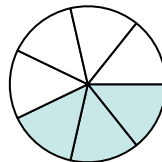
$$\frac{1}{10}$$

C.



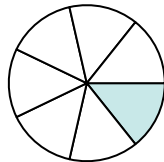
$$\frac{6}{7}$$

D.



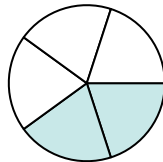
$$\frac{3}{7}$$

E.



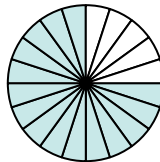
$$\frac{1}{7}$$

F.



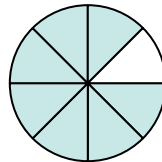
$$\frac{2}{5}$$

G.



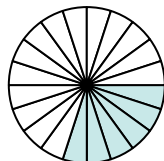
$$\frac{15}{20}$$

H.



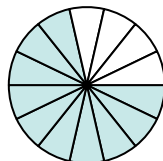
$$\frac{7}{8}$$

I.



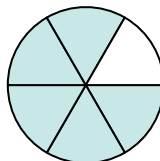
$$\frac{6}{20}$$

J.



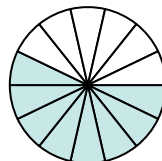
$$\frac{10}{14}$$

K.



$$\frac{5}{6}$$

L.



$$\frac{8}{14}$$

1. **E**2. **A**3. **J**4. **L**5. **F**6. **D**7. **H**8. **G**9. **C**10. **K**11. **B**12. **I**