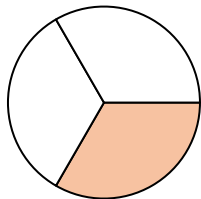


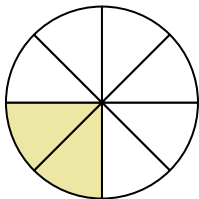


Escribe la cantidad sombreada en forma escrita.

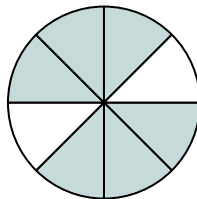
Ej)




1)



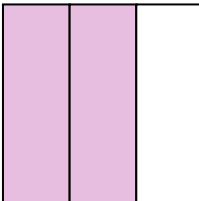
2)



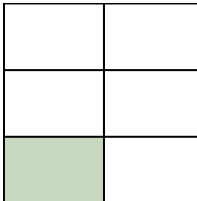
3)



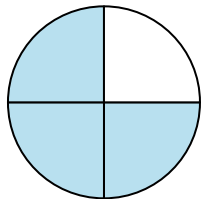
4)



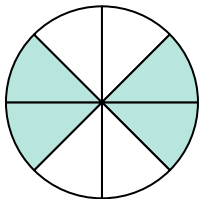
5)



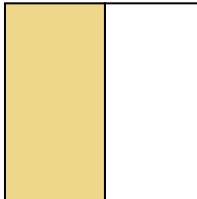
6)



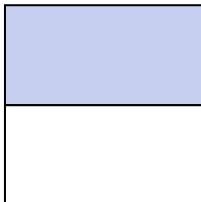
7)



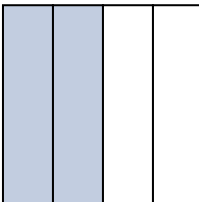
8)



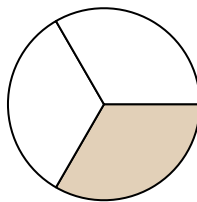
9)



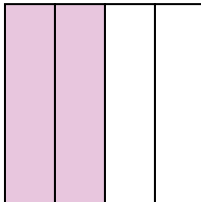
10)



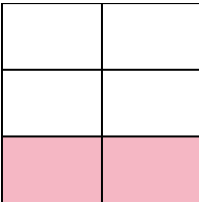
11)



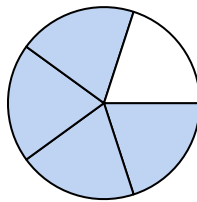
12)



13)



14)

**Respuestas**Ej. **un tercio**

1. _____

2. _____

3. _____

4. _____

5. _____

6. _____

7. _____

8. _____

9. _____

10. _____

11. _____

12. _____

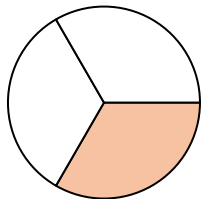
13. _____

14. _____

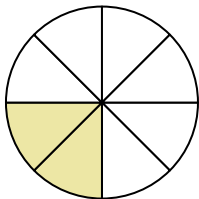


Escriba la cantidad sombreada en forma escrita.

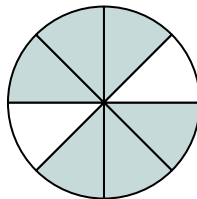
Ej)




1)



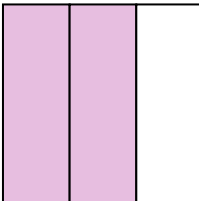
2)



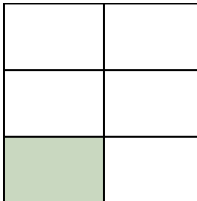
3)



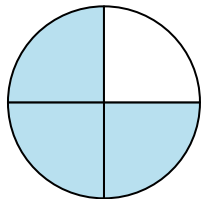
4)



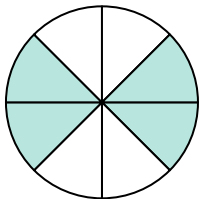
5)



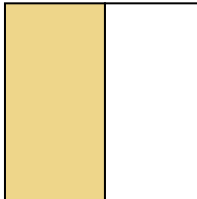
6)



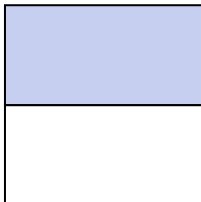
7)



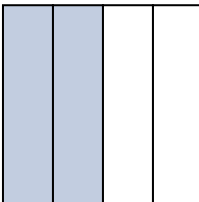
8)



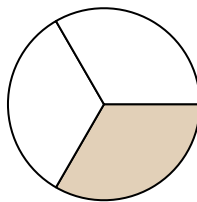
9)



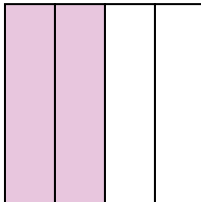
10)



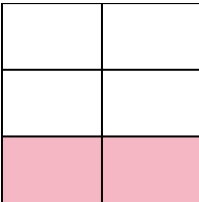
11)



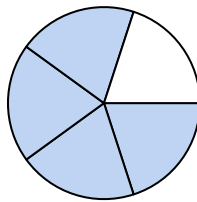
12)



13)



14)

**Respuestas**Ej. un tercio1. dos octavos2. seis octavos3. un medio4. dos tercios5. un quinto6. tres cuartos7. cuatro octavos8. un medio9. un medio10. dos cuartos11. un tercio12. dos cuartos13. dos quintos14. cuatro quintos