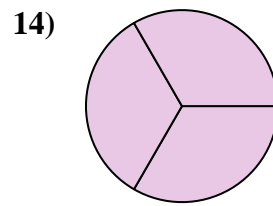
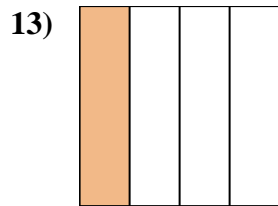
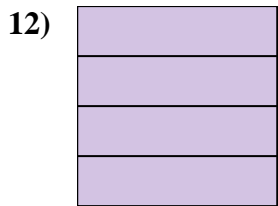
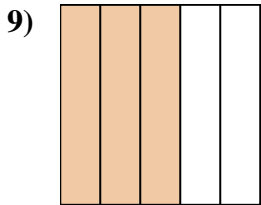
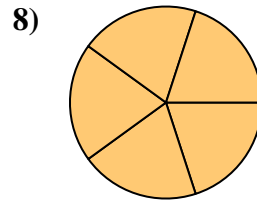
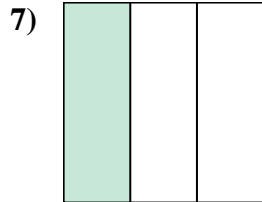
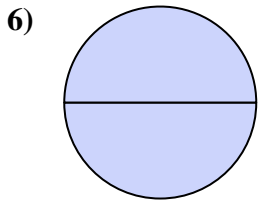
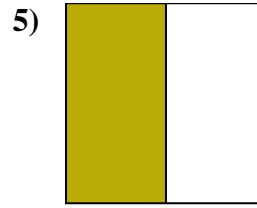
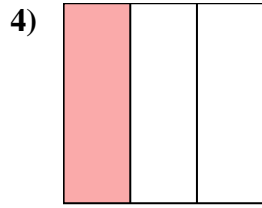
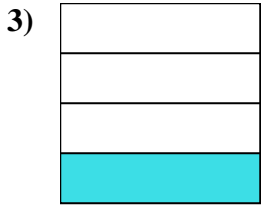
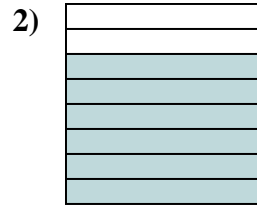
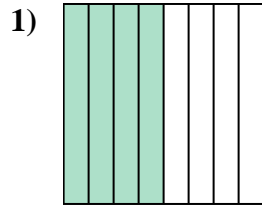
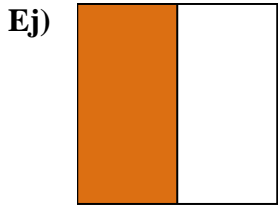




Escribe la cantidad sombreada como una fracción.



**Respuestas**

Ej.  $\frac{1}{2}$

1. \_\_\_\_\_

2. \_\_\_\_\_

3. \_\_\_\_\_

4. \_\_\_\_\_

5. \_\_\_\_\_

6. \_\_\_\_\_

7. \_\_\_\_\_

8. \_\_\_\_\_

9. \_\_\_\_\_

10. \_\_\_\_\_

11. \_\_\_\_\_

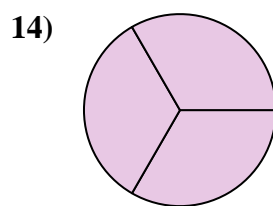
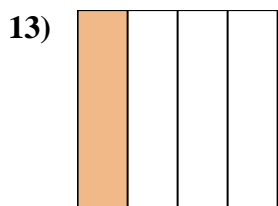
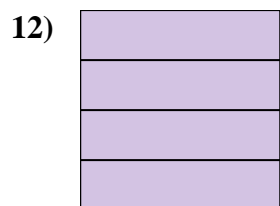
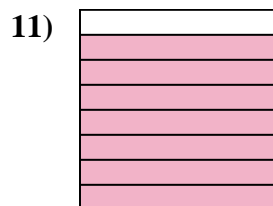
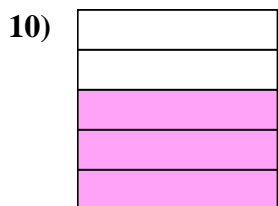
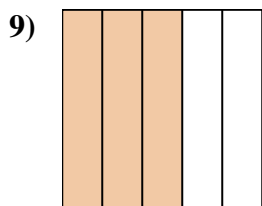
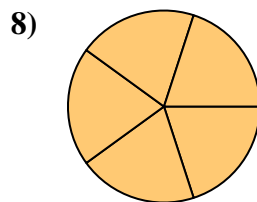
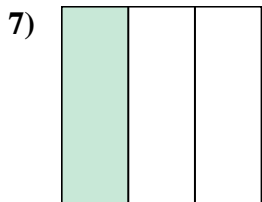
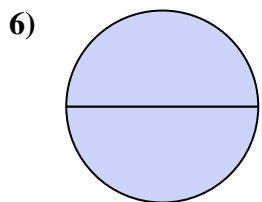
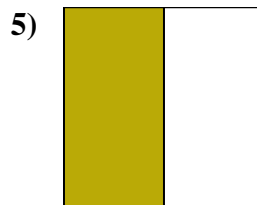
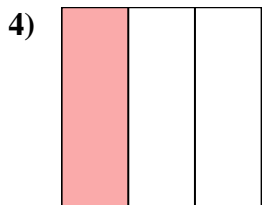
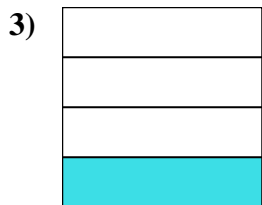

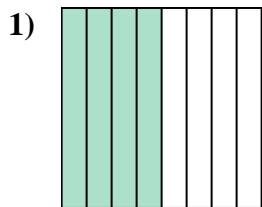
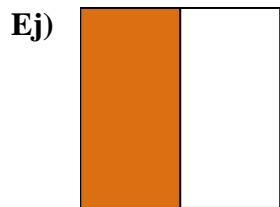
12. \_\_\_\_\_

13. \_\_\_\_\_

14. \_\_\_\_\_



Escribe la cantidad sombreada como una fracción.



**Respuestas**

Ej.  $\frac{1}{2}$

1.  $\frac{4}{8}$

2.  $\frac{6}{8}$

3.  $\frac{1}{4}$

4.  $\frac{1}{3}$

5.  $\frac{1}{2}$

6.  $\frac{2}{2}$

7.  $\frac{1}{3}$

8.  $\frac{5}{5}$

9.  $\frac{3}{5}$

10.  $\frac{3}{5}$

11.  $\frac{7}{8}$

12.  $\frac{4}{4}$

13.  $\frac{1}{4}$

14.  $\frac{3}{3}$