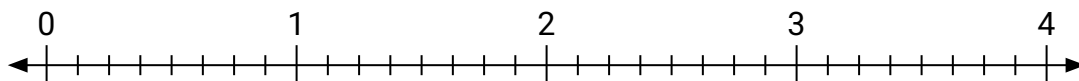


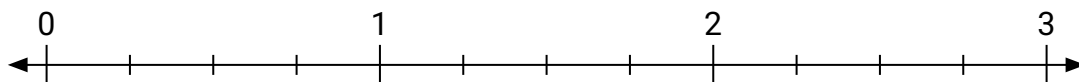


Usa la recta numérica para resolver.

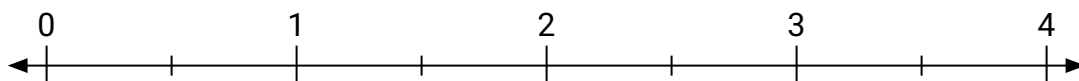
1) $4 \div \frac{5}{8} =$



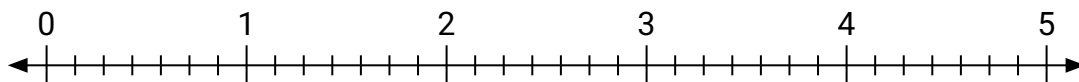
2) $3 \div \frac{1}{4} =$



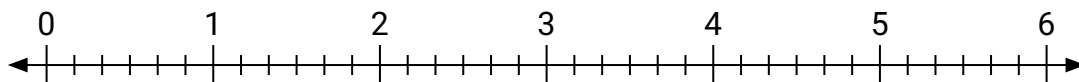
3) $4 \div \frac{1}{2} =$



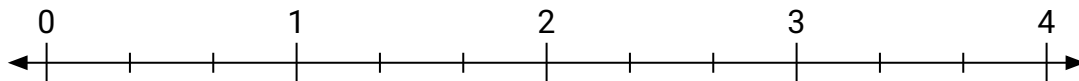
4) $2 \div \frac{2}{7} =$




5) $6 \div \frac{1}{6} =$



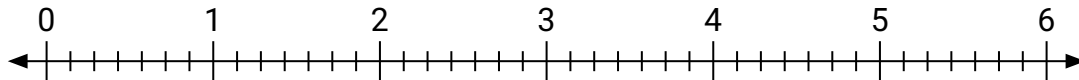
6) $3 \div \frac{1}{3} =$



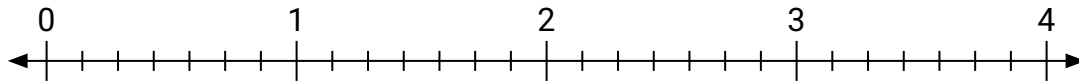
7) $2 \div \frac{2}{3} =$



8) $6 \div \frac{6}{7} =$



9) $4 \div \frac{2}{7} =$

**Respuestas**

1. _____

2. _____

3. _____

4. _____

5. _____

6. _____

7. _____

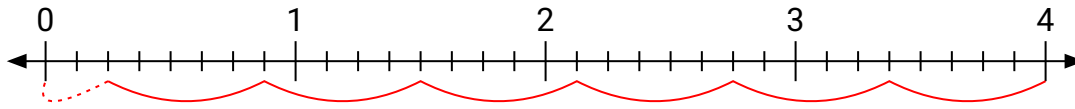
8. _____

9. _____

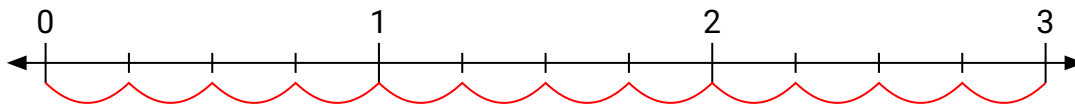


Usa la recta numérica para resolver.

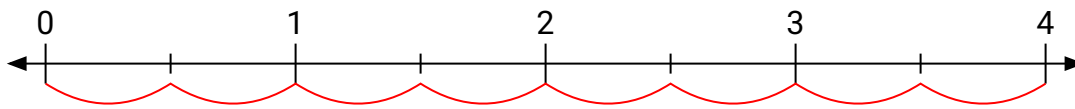
1) $4 \div \frac{5}{8} =$



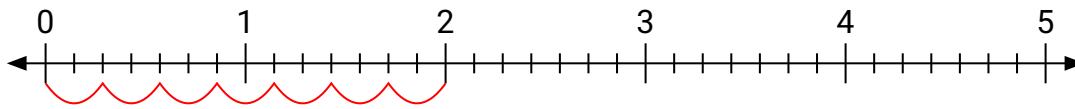
2) $3 \div \frac{1}{4} =$



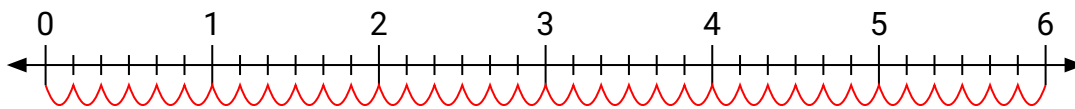
3) $4 \div \frac{1}{2} =$



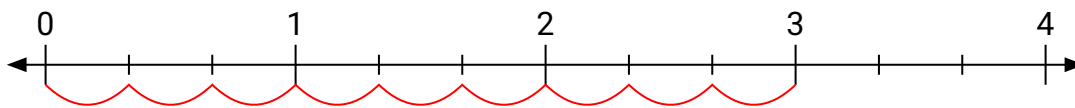
4) $2 \div \frac{2}{7} =$



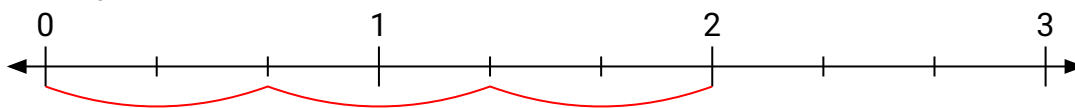
5) $6 \div \frac{1}{6} =$



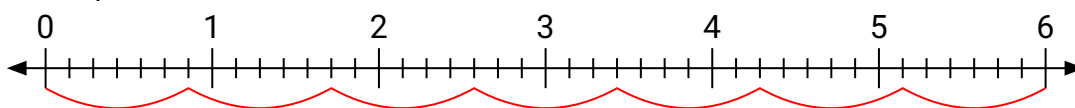
6) $3 \div \frac{1}{3} =$



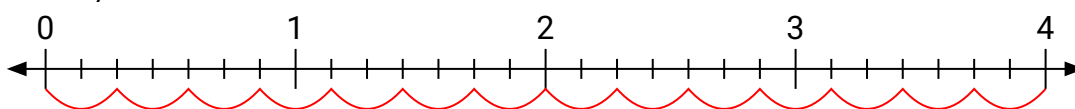
7) $2 \div \frac{2}{3} =$



8) $6 \div \frac{6}{7} =$



9) $4 \div \frac{2}{7} =$

**Respuestas**

1. **$6 \frac{2}{5}$**
2. **12**
3. **8**
4. **7**
5. **36**
6. **9**
7. **3**
8. **7**
9. **14**