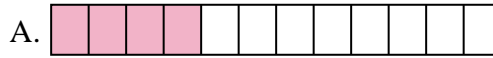




Iguala cada ecuación para responder y escribe la respuesta.

Respuestas

Ej) $\frac{1}{10} + \frac{1}{10}$



Ej. **G**

1) $\frac{1}{5} + \frac{1}{5} + \frac{1}{5}$



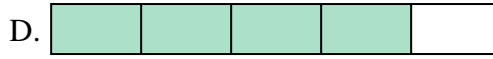
1. _____

2) $\frac{1}{10} + \frac{1}{10} + \frac{1}{10} + \frac{1}{10} + \frac{1}{10} + \frac{1}{10}$



2. _____

3) $\frac{1}{8} + \frac{1}{8} + \frac{1}{8}$




3. _____

4) $\frac{1}{6} + \frac{1}{6} + \frac{1}{6} + \frac{1}{6} + \frac{1}{6}$



4. _____

5) $\frac{1}{4} + \frac{1}{4}$



6. _____

6) $\frac{1}{3} + \frac{1}{3}$




7. _____

7) $\frac{1}{12} + \frac{1}{12} + \frac{1}{12} + \frac{1}{12} + \frac{1}{12}$



8. _____

8) $\frac{1}{10} + \frac{1}{10} + \frac{1}{10} + \frac{1}{10} + \frac{1}{10} + \frac{1}{10} + \frac{1}{10}$



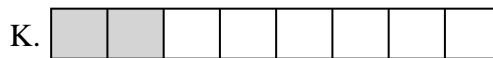
9. _____

9) $\frac{1}{8} + \frac{1}{8}$



10. _____

10) $\frac{1}{10} + \frac{1}{10} + \frac{1}{10} + \frac{1}{10}$



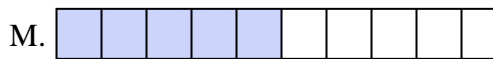
11. _____

11) $\frac{1}{10} + \frac{1}{10} + \frac{1}{10} + \frac{1}{10} + \frac{1}{10}$



12. _____

12) $\frac{1}{5} + \frac{1}{5} + \frac{1}{5} + \frac{1}{5}$




13. _____

13) $\frac{1}{4} + \frac{1}{4} + \frac{1}{4}$




14. _____

14) $\frac{1}{6} + \frac{1}{6} + \frac{1}{6} + \frac{1}{6}$



15. _____

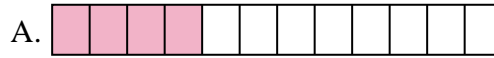
15) $\frac{1}{12} + \frac{1}{12} + \frac{1}{12} + \frac{1}{12}$



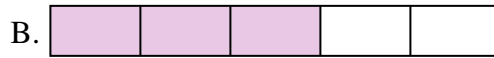


Iguala cada ecuación para responder y escribe la respuesta.

Ej) $\frac{1}{10} + \frac{1}{10}$



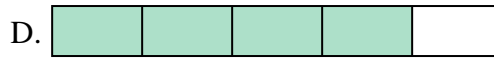
1) $\frac{1}{5} + \frac{1}{5} + \frac{1}{5}$



2) $\frac{1}{10} + \frac{1}{10} + \frac{1}{10} + \frac{1}{10} + \frac{1}{10} + \frac{1}{10}$




3) $\frac{1}{8} + \frac{1}{8} + \frac{1}{8}$



4) $\frac{1}{6} + \frac{1}{6} + \frac{1}{6} + \frac{1}{6} + \frac{1}{6}$




5) $\frac{1}{4} + \frac{1}{4}$




6) $\frac{1}{3} + \frac{1}{3}$



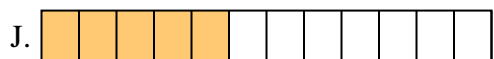
7) $\frac{1}{12} + \frac{1}{12} + \frac{1}{12} + \frac{1}{12} + \frac{1}{12}$




8) $\frac{1}{10} + \frac{1}{10} + \frac{1}{10} + \frac{1}{10} + \frac{1}{10} + \frac{1}{10} + \frac{1}{10}$



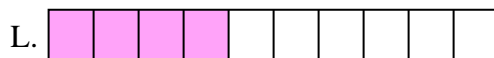
9) $\frac{1}{8} + \frac{1}{8}$




10) $\frac{1}{10} + \frac{1}{10} + \frac{1}{10} + \frac{1}{10}$



11) $\frac{1}{10} + \frac{1}{10} + \frac{1}{10} + \frac{1}{10} + \frac{1}{10}$




12) $\frac{1}{5} + \frac{1}{5} + \frac{1}{5} + \frac{1}{5}$




13) $\frac{1}{4} + \frac{1}{4} + \frac{1}{4}$



14) $\frac{1}{6} + \frac{1}{6} + \frac{1}{6} + \frac{1}{6}$



15) $\frac{1}{12} + \frac{1}{12} + \frac{1}{12} + \frac{1}{12}$

**Respuestas**Ej. **G** 1. **B** 2. **E** 3. **N** 4. **I** 5. **C** 6. **H** 7. **J** 8. **O** 9. **K** 10. **L** 11. **M** 12. **D** 13. **F** 14. **P** 15. **A**