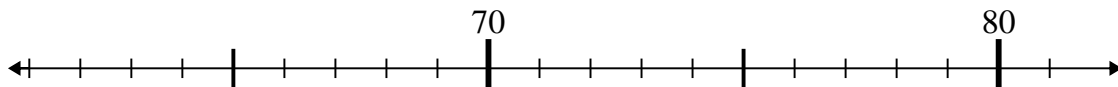




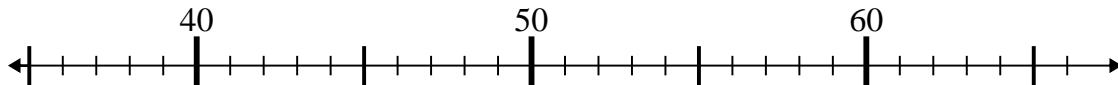
Utilice las rectas numéricas para resolver cada problema.

Respuestas

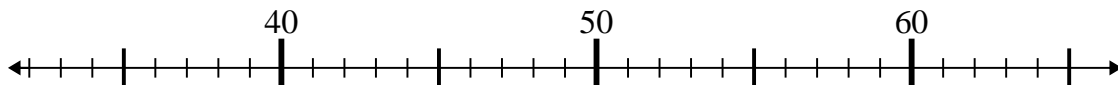
1) $78 - 7 =$



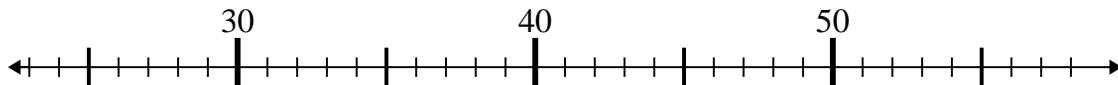
2) $42 + 0 =$



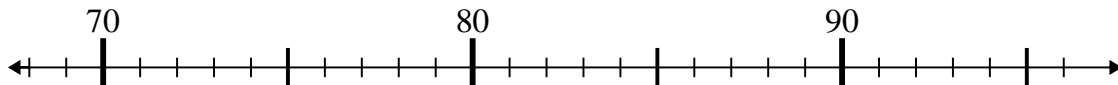
3) $40 - 7 =$



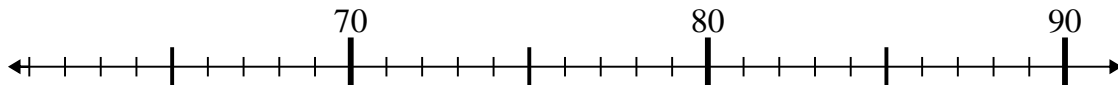
4) $56 - 25 =$



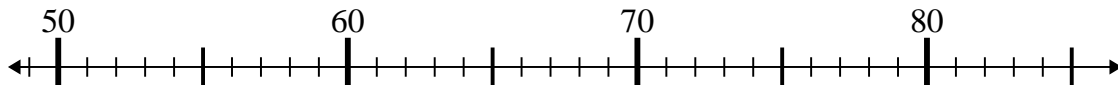
5) $75 + 0 =$



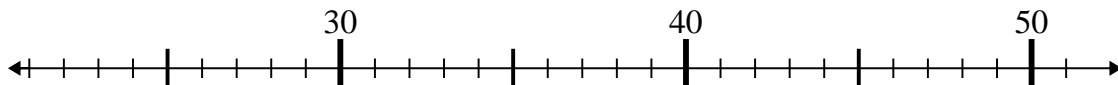
6) $68 - 2 =$



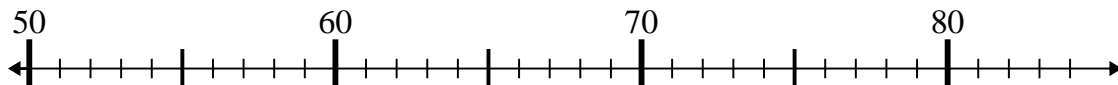
7) $75 + 2 =$



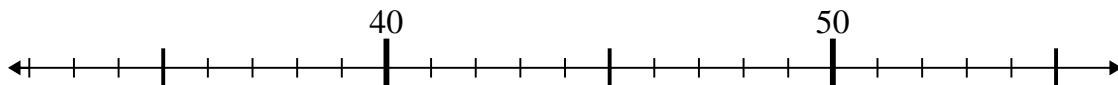
8) $49 - 5 =$



9) $56 - 3 =$



10) $55 - 13 =$

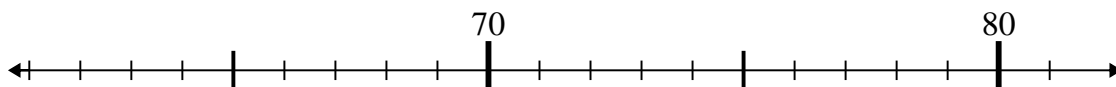


1. _____
2. _____
3. _____
4. _____
5. _____
6. _____
7. _____
8. _____
9. _____
10. _____

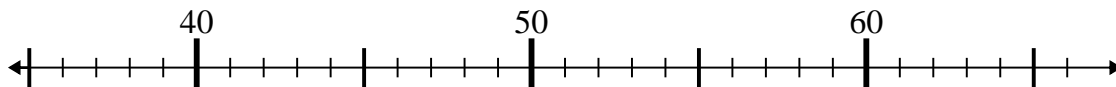


Utilice las rectas numéricas para resolver cada problema.

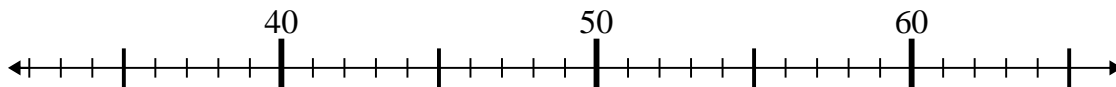
1) $78 - 7 =$



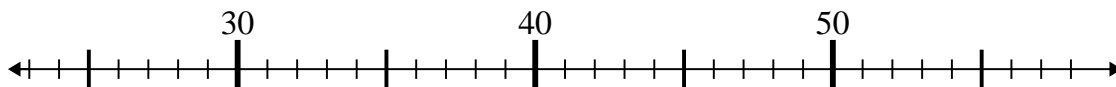
2) $42 + 0 =$



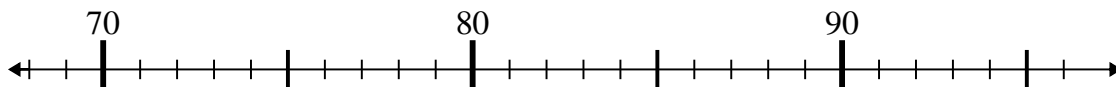
3) $40 - 7 =$



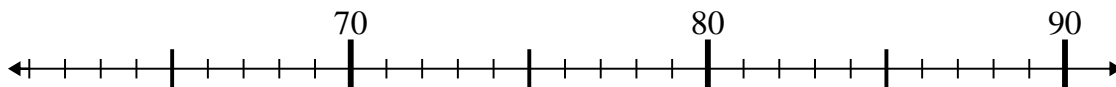
4) $56 - 25 =$



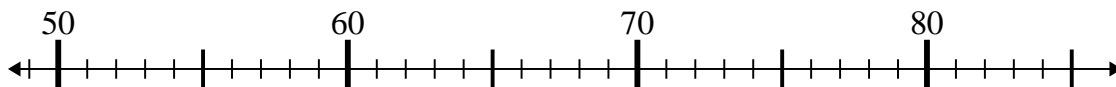
5) $75 + 0 =$



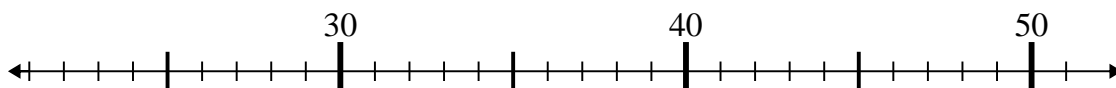
6) $68 - 2 =$



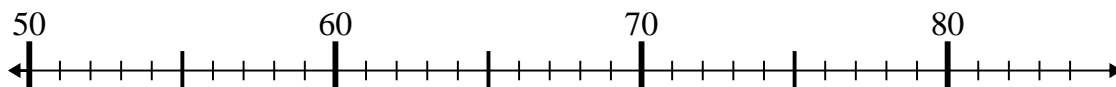
7) $75 + 2 =$



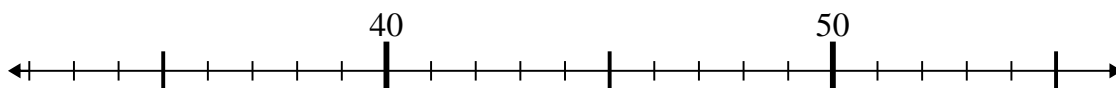
8) $49 - 5 =$



9) $56 - 3 =$



10) $55 - 13 =$

**Respuestas**1. **71**2. **42**3. **33**4. **31**5. **75**6. **66**7. **77**8. **44**9. **53**10. **42**