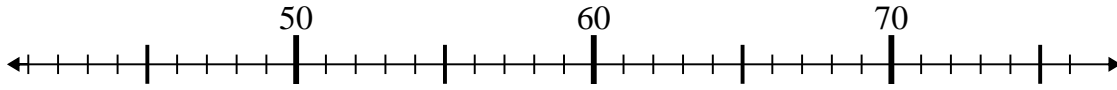


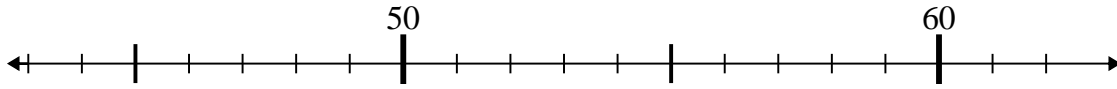


Utilice las rectas numéricas para resolver cada problema.

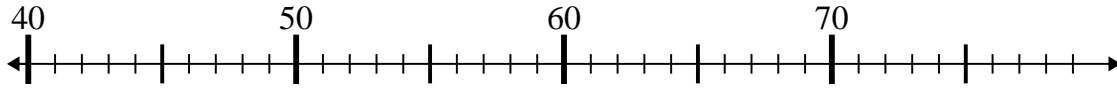
1) $52 - 10 =$



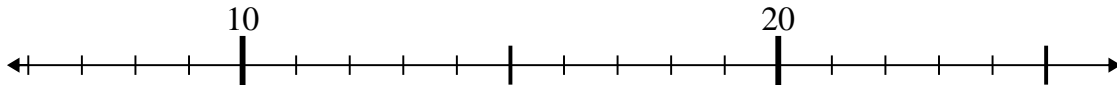
2) $60 - 1 =$



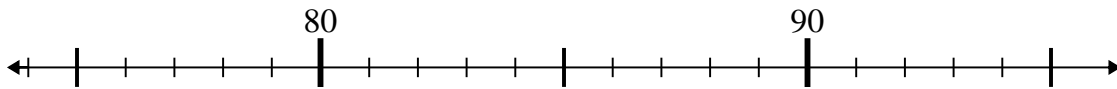
3) $58 - 6 =$



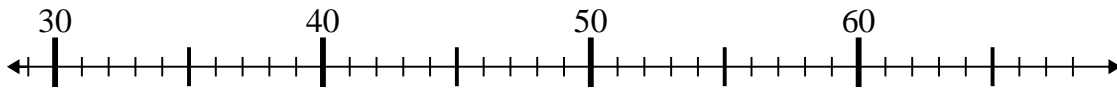
4) $13 - 1 =$



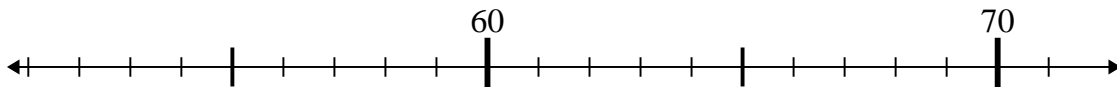
5) $86 + 9 =$



6) $31 + 26 =$



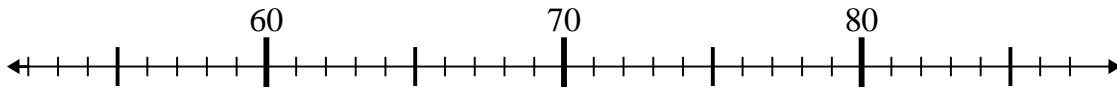
7) $55 + 2 =$



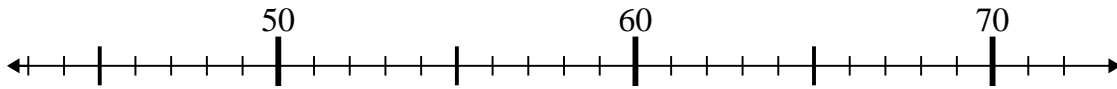
8) $35 - 18 =$



9) $76 - 24 =$



10) $46 + 15 =$



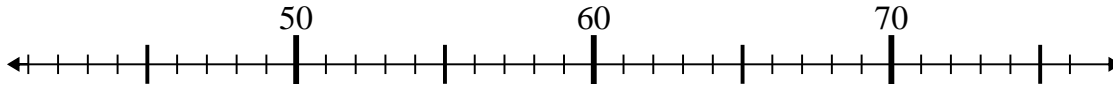
Respuestas

1. _____
2. _____
3. _____
4. _____
5. _____
6. _____
7. _____
8. _____
9. _____
10. _____

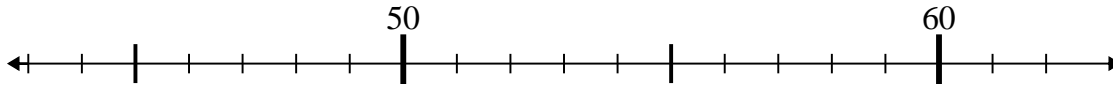


Utilice las rectas numéricas para resolver cada problema.

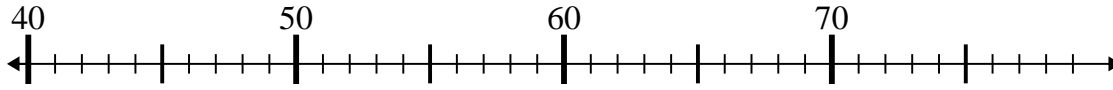
1) $52 - 10 =$



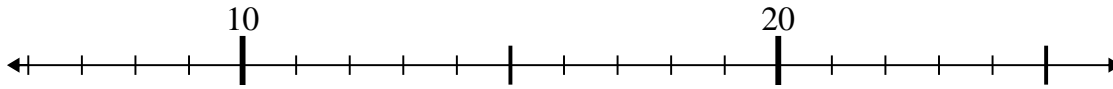
2) $60 - 1 =$



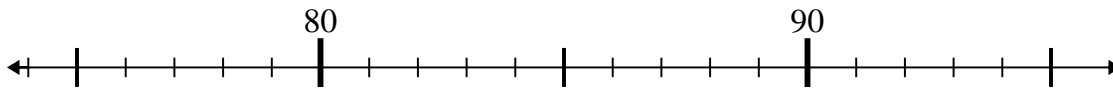
3) $58 - 6 =$



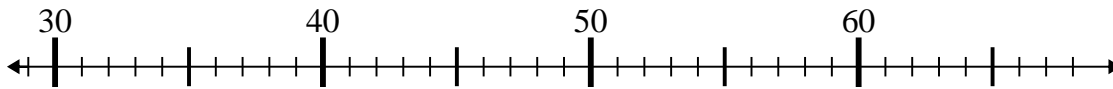
4) $13 - 1 =$



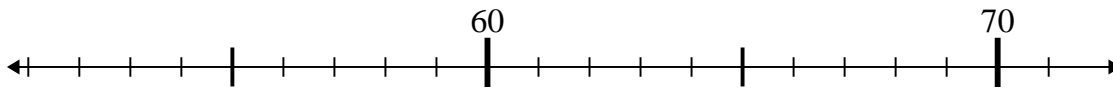
5) $86 + 9 =$



6) $31 + 26 =$



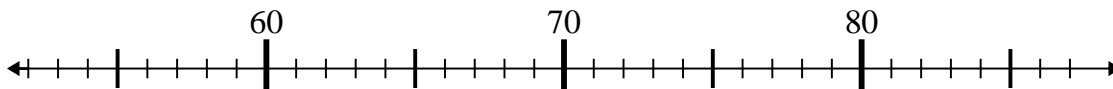
7) $55 + 2 =$



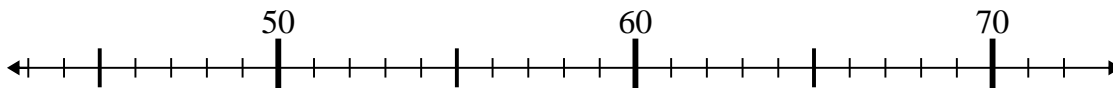
8) $35 - 18 =$



9) $76 - 24 =$



10) $46 + 15 =$



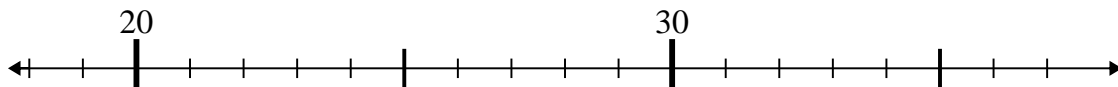
Respuestas

- 1. 42
- 2. 59
- 3. 52
- 4. 12
- 5. 95
- 6. 57
- 7. 57
- 8. 17
- 9. 52
- 10. 61

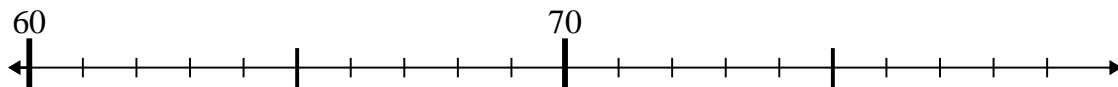


Utilice las rectas numéricas para resolver cada problema.

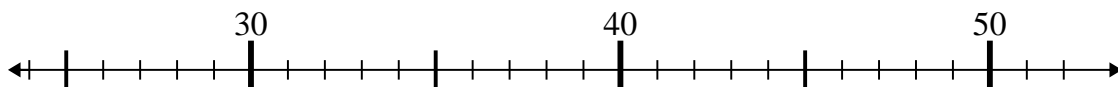
1) $23 - 4 =$



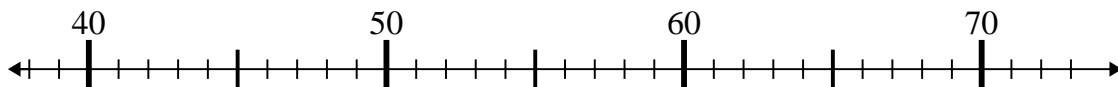
2) $73 - 6 =$



3) $44 + 2 =$



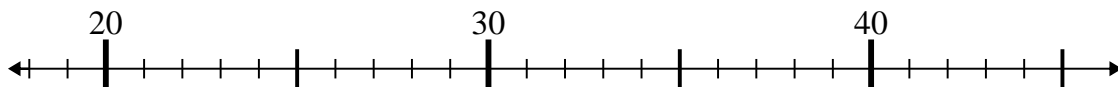
4) $42 + 1 =$



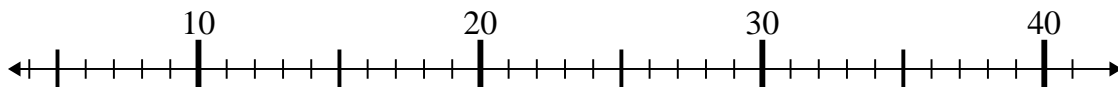
5) $40 + 13 =$



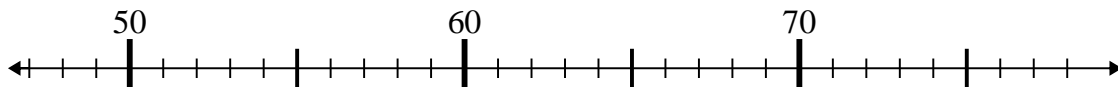
6) $26 + 0 =$



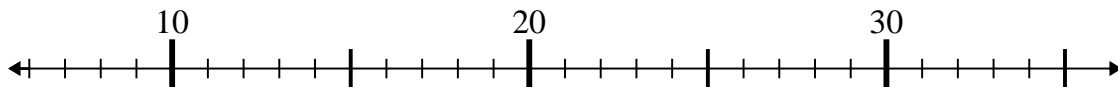
7) $36 - 27 =$



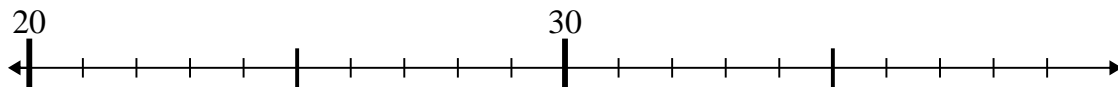
8) $54 - 5 =$



9) $10 + 1 =$



10) $24 + 1 =$



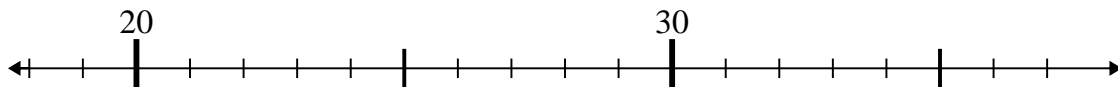
Respuestas

1. _____
2. _____
3. _____
4. _____
5. _____
6. _____
7. _____
8. _____
9. _____
10. _____

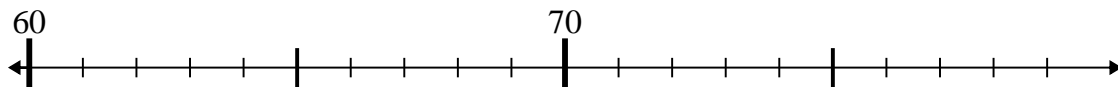


Utilice las rectas numéricas para resolver cada problema.

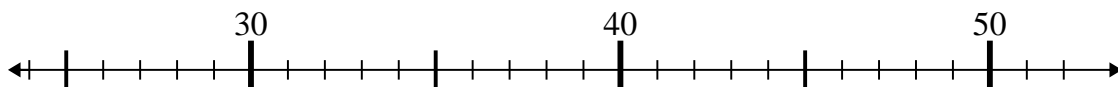
1) $23 - 4 =$



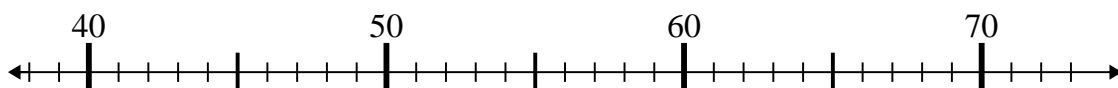
2) $73 - 6 =$



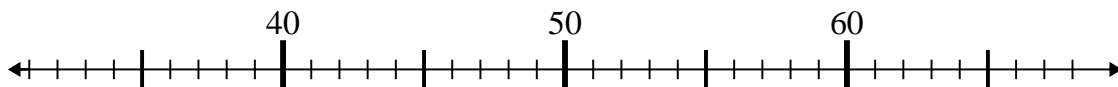
3) $44 + 2 =$



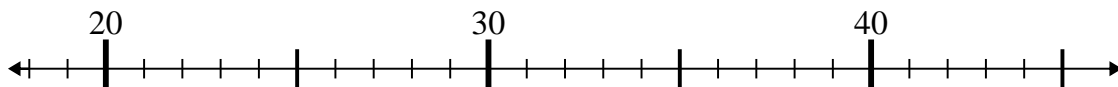
4) $42 + 1 =$



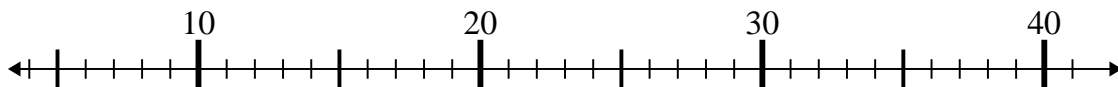
5) $40 + 13 =$



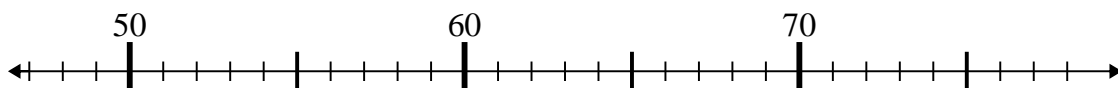
6) $26 + 0 =$



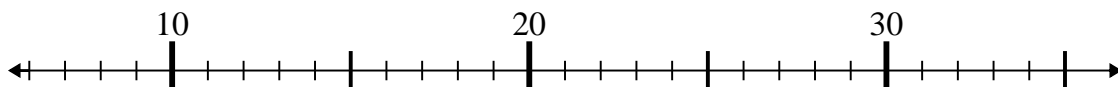
7) $36 - 27 =$



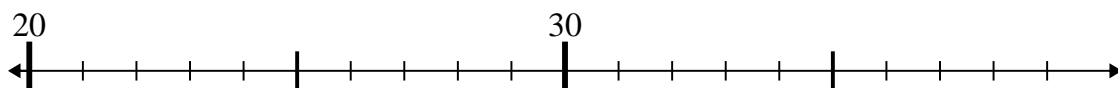
8) $54 - 5 =$



9) $10 + 1 =$



10) $24 + 1 =$



Respuestas

1. 19

2. 67

3. 46

4. 43

5. 53

6. 26

7. 9

8. 49

9. 11

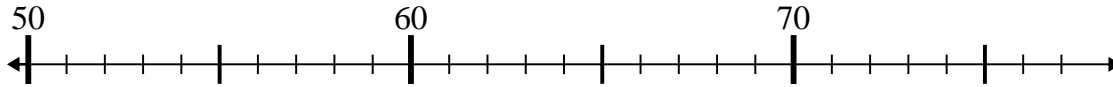
10. 25



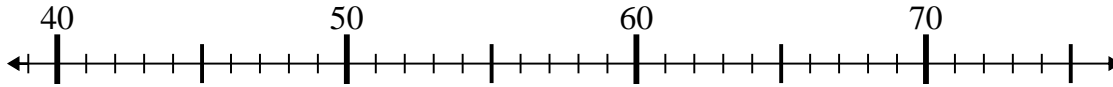
Utilice las rectas numéricas para resolver cada problema.

Respuestas

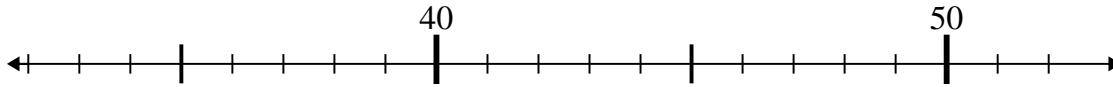
1) $70 - 16 =$



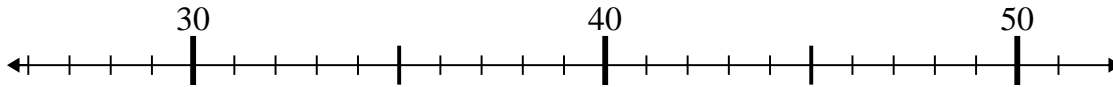
2) $39 + 6 =$



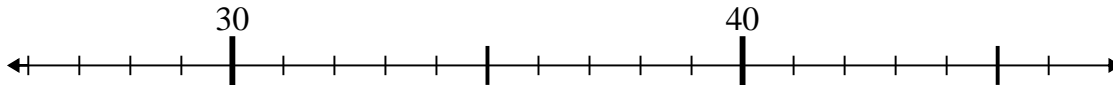
3) $46 + 3 =$



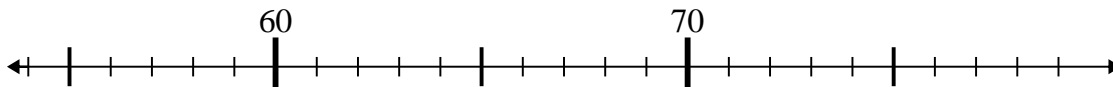
4) $31 + 8 =$



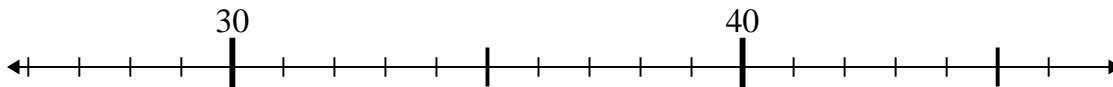
5) $36 - 1 =$



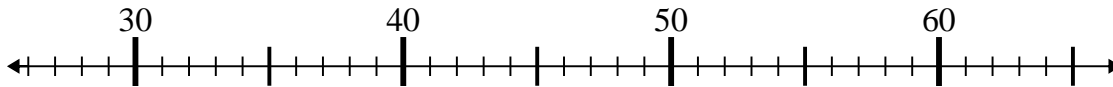
6) $70 + 8 =$



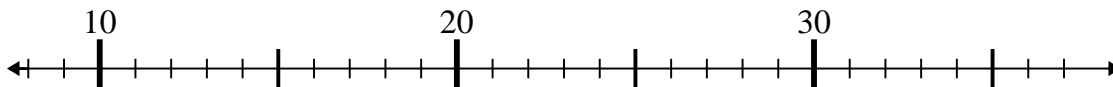
7) $46 - 1 =$



8) $27 + 8 =$



9) $18 + 1 =$



10) $25 + 3 =$

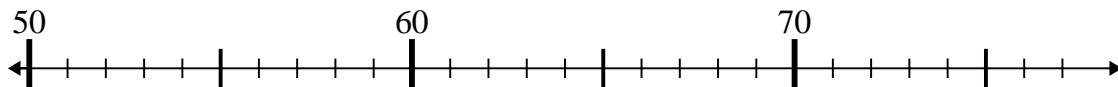


1. _____
2. _____
3. _____
4. _____
5. _____
6. _____
7. _____
8. _____
9. _____
10. _____

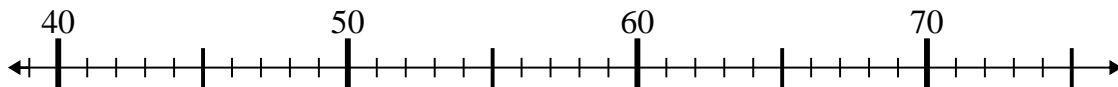


Utilice las rectas numéricas para resolver cada problema.

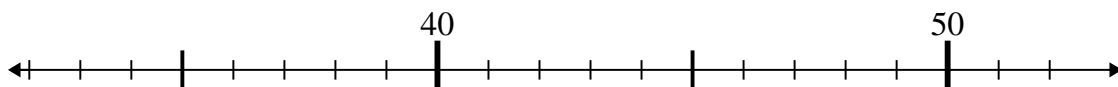
1) $70 - 16 =$



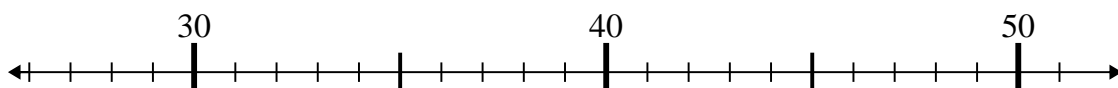
2) $39 + 6 =$



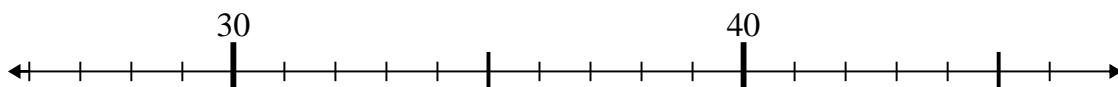
3) $46 + 3 =$



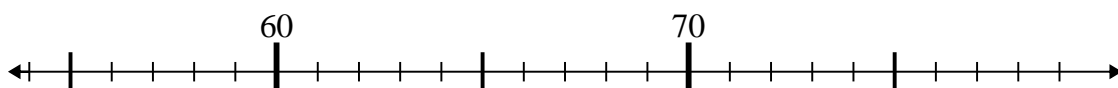
4) $31 + 8 =$



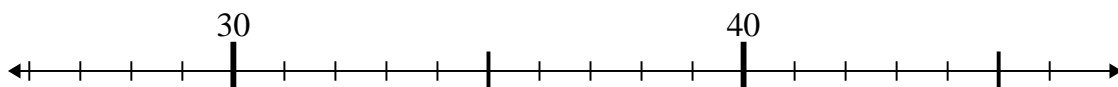
5) $36 - 1 =$



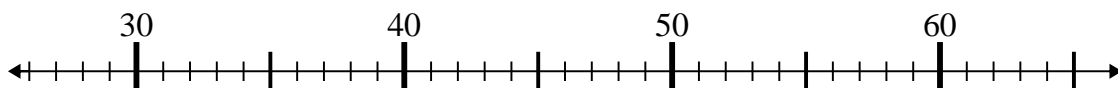
6) $70 + 8 =$



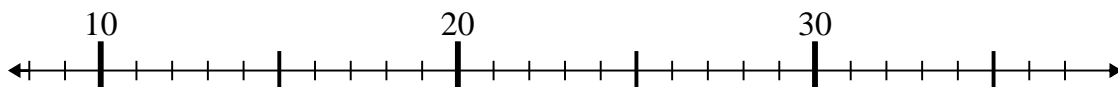
7) $46 - 1 =$



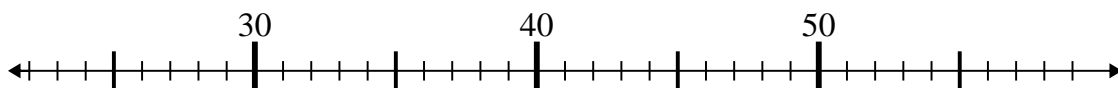
8) $27 + 8 =$



9) $18 + 1 =$



10) $25 + 3 =$



Respuestas

1. 54

2. 45

3. 49

4. 39

5. 35

6. 78

7. 45

8. 35

9. 19

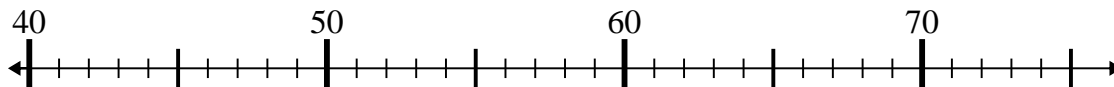
10. 28



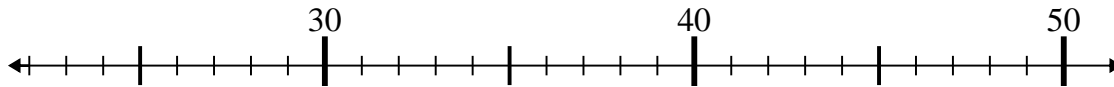
Utilice las rectas numéricas para resolver cada problema.

Respuestas

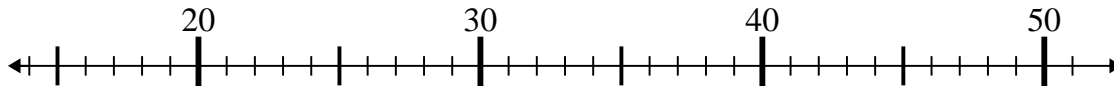
1) $46 - 5 =$



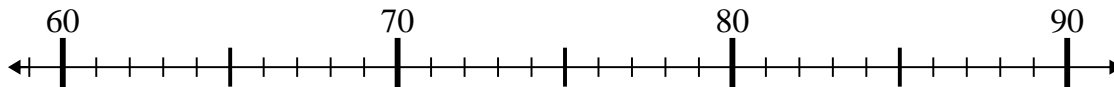
2) $22 + 19 =$



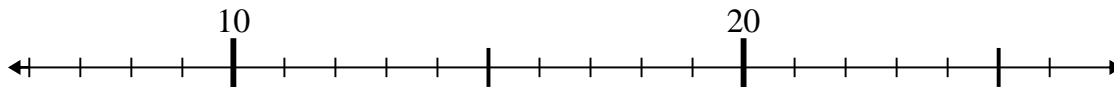
3) $21 + 25 =$



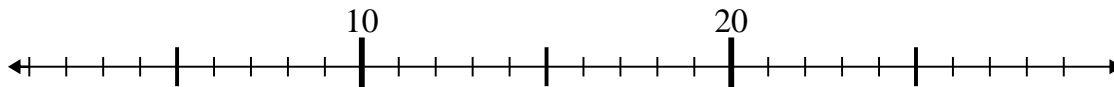
4) $73 + 15 =$



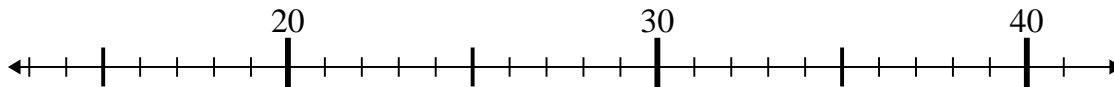
5) $11 + 2 =$



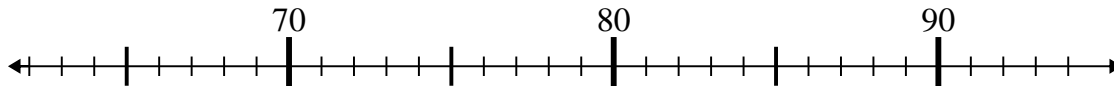
6) $5 + 1 =$



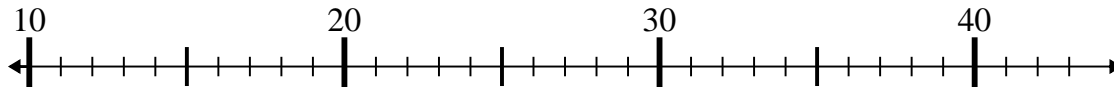
7) $23 + 4 =$



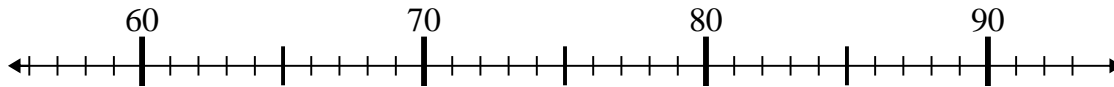
8) $82 - 14 =$



9) $22 - 10 =$



10) $65 + 1 =$

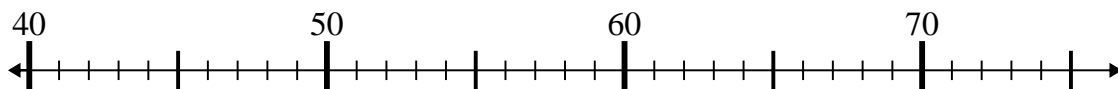


- 1. _____
- 2. _____
- 3. _____
- 4. _____
- 5. _____
- 6. _____
- 7. _____
- 8. _____
- 9. _____
- 10. _____

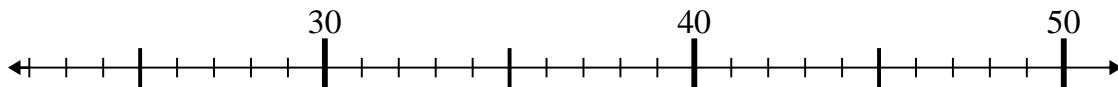


Utilice las rectas numéricas para resolver cada problema.

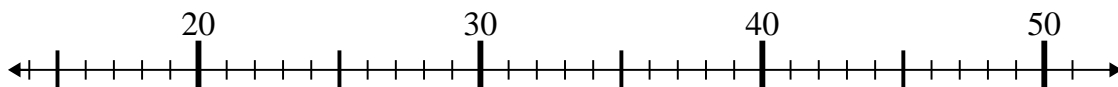
1) $46 - 5 =$



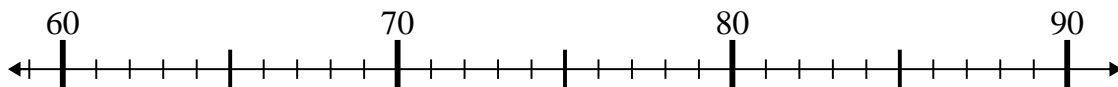
2) $22 + 19 =$



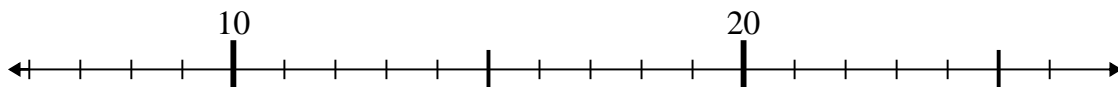
3) $21 + 25 =$



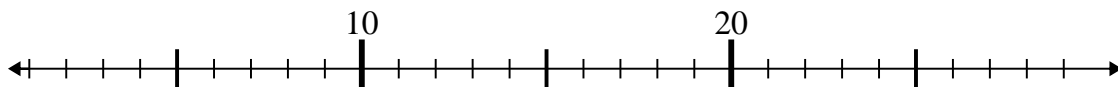
4) $73 + 15 =$



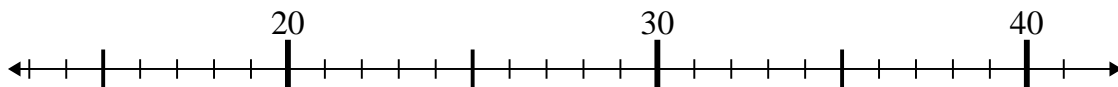
5) $11 + 2 =$



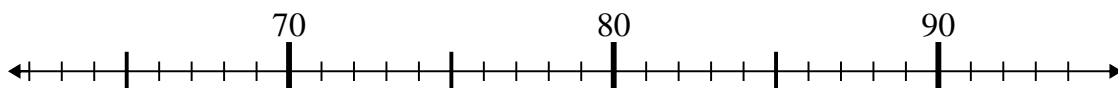
6) $5 + 1 =$



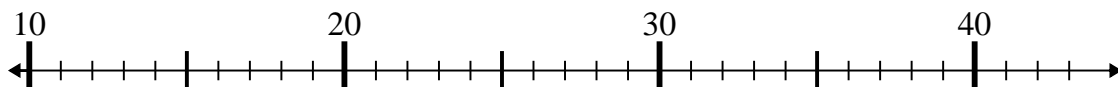
7) $23 + 4 =$



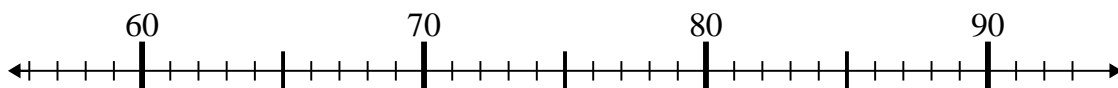
8) $82 - 14 =$



9) $22 - 10 =$



10) $65 + 1 =$



Respuestas

1. 41

2. 41

3. 46

4. 88

5. 13

6. 6

7. 27

8. 68

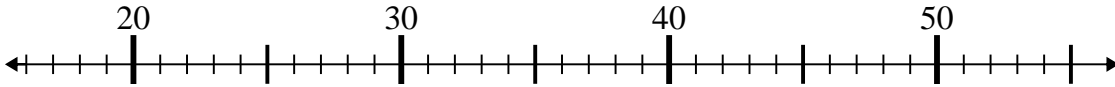
9. 12

10. 66

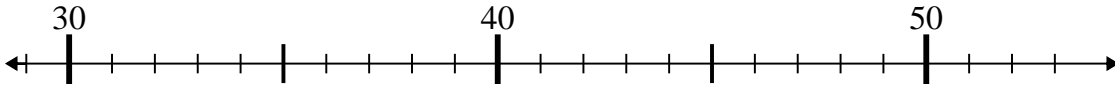


Utilice las rectas numéricas para resolver cada problema.

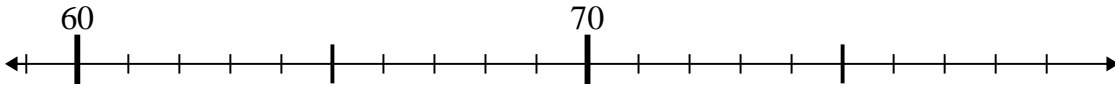
1) $26 - 4 =$



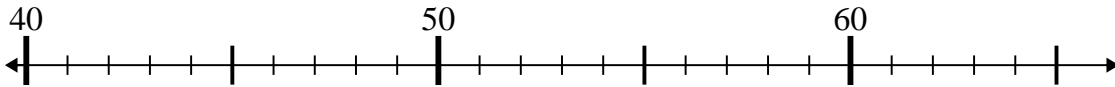
2) $45 - 2 =$



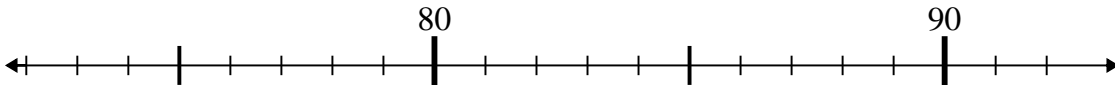
3) $62 + 14 =$



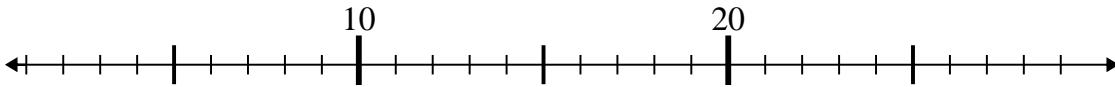
4) $51 - 7 =$



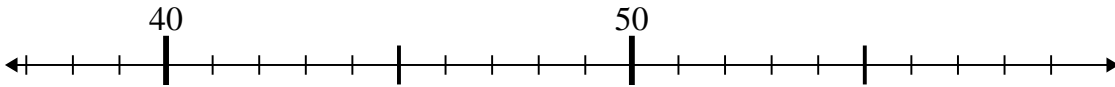
5) $76 + 1 =$



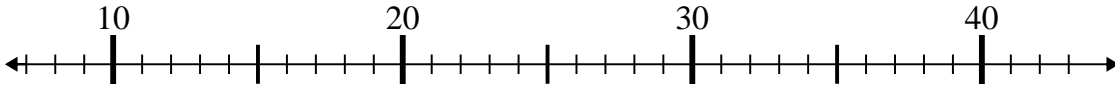
6) $27 - 21 =$



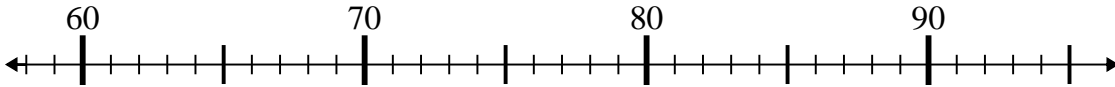
7) $55 - 15 =$



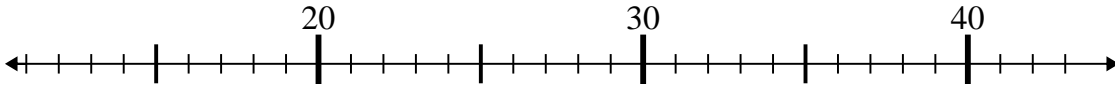
8) $31 - 17 =$



9) $66 + 9 =$



10) $27 + 15 =$



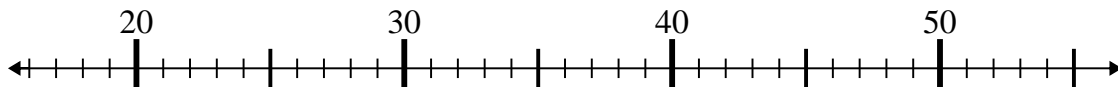
Respuestas

1. _____
2. _____
3. _____
4. _____
5. _____
6. _____
7. _____
8. _____
9. _____
10. _____

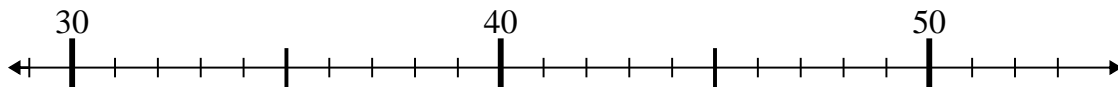


Utilice las rectas numéricas para resolver cada problema.

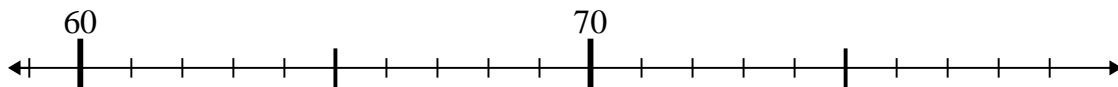
1) $26 - 4 =$



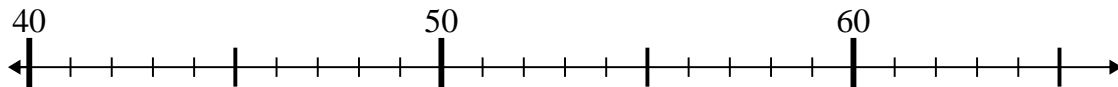
2) $45 - 2 =$



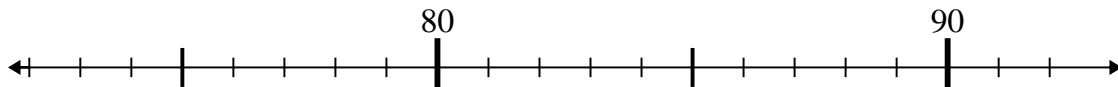
3) $62 + 14 =$



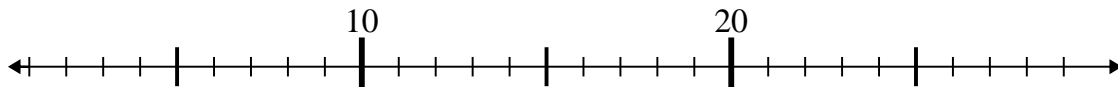
4) $51 - 7 =$



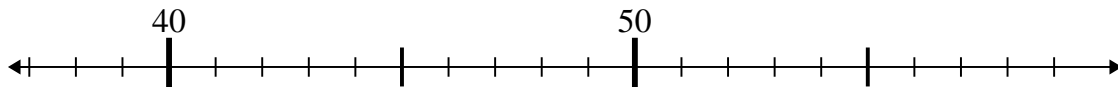
5) $76 + 1 =$



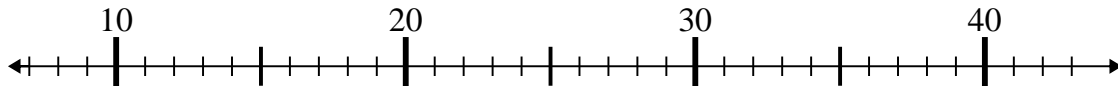
6) $27 - 21 =$



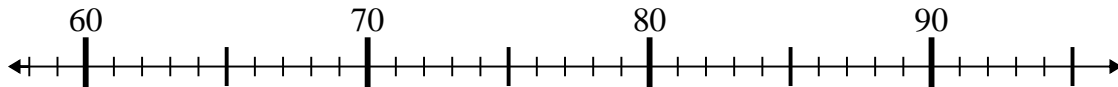
7) $55 - 15 =$



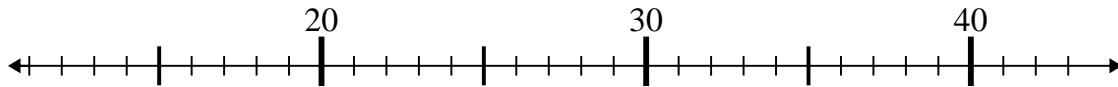
8) $31 - 17 =$



9) $66 + 9 =$



10) $27 + 15 =$



Respuestas

1. 22

2. 43

3. 76

4. 44

5. 77

6. 6

7. 40

8. 14

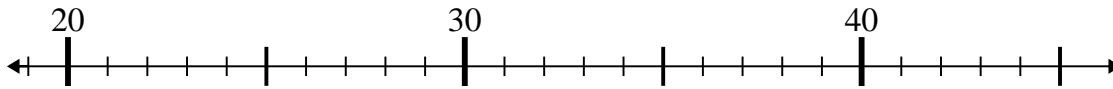
9. 75

10. 42

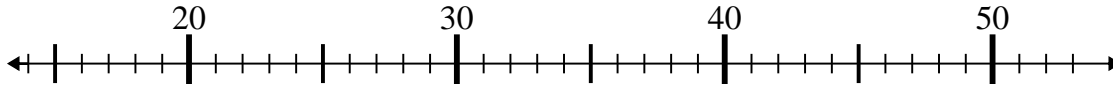


Utilice las rectas numéricas para resolver cada problema.

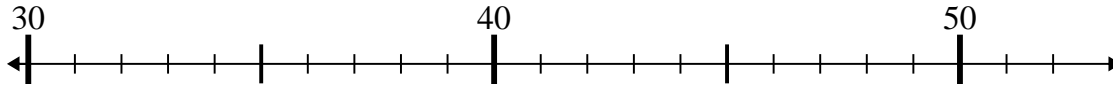
1) $29 + 7 =$



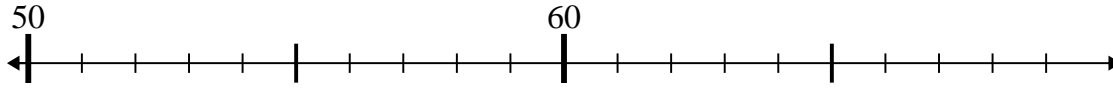
2) $36 - 6 =$



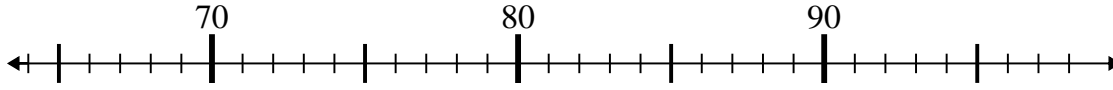
3) $50 - 1 =$



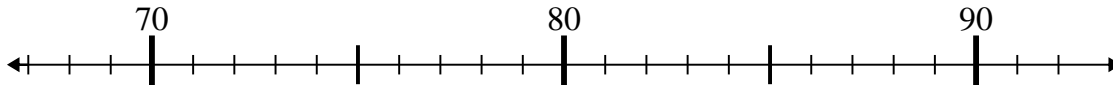
4) $68 - 6 =$



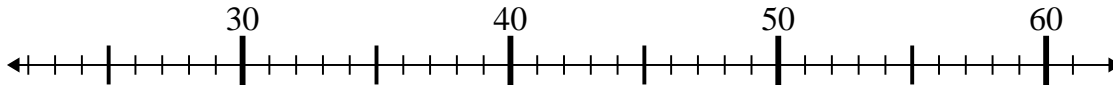
5) $71 + 11 =$



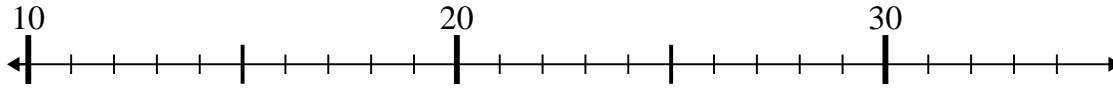
6) $68 + 4 =$



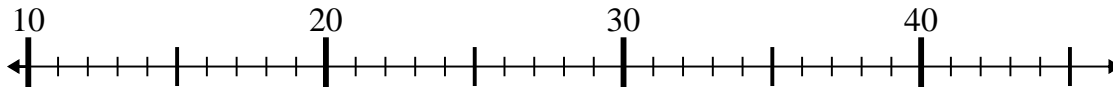
7) $35 - 9 =$



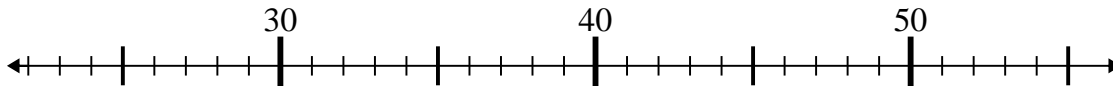
8) $34 + 0 =$



9) $42 - 21 =$



10) $45 - 3 =$



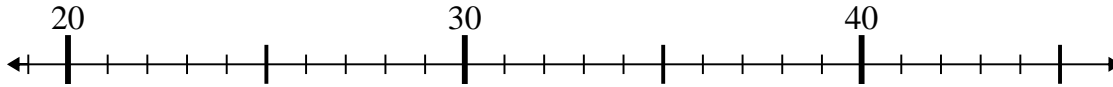
Respuestas

1. _____
2. _____
3. _____
4. _____
5. _____
6. _____
7. _____
8. _____
9. _____
10. _____

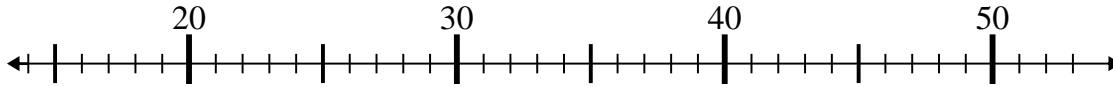


Utilice las rectas numéricas para resolver cada problema.

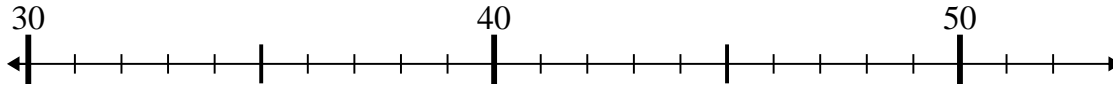
1) $29 + 7 =$



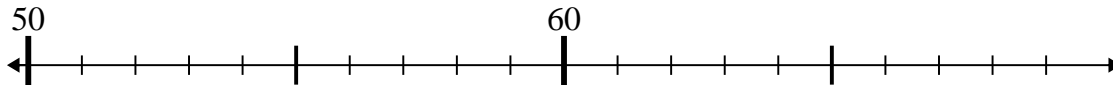
2) $36 - 6 =$



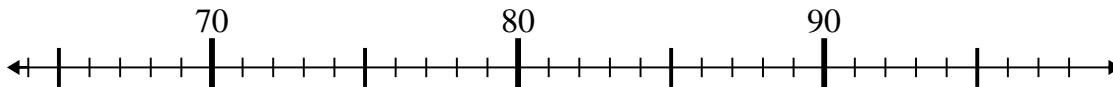
3) $50 - 1 =$



4) $68 - 6 =$



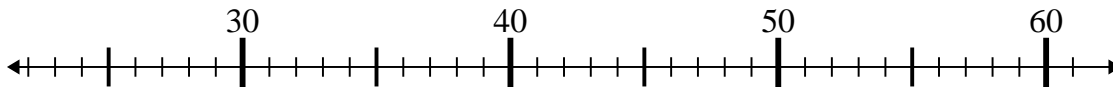
5) $71 + 11 =$



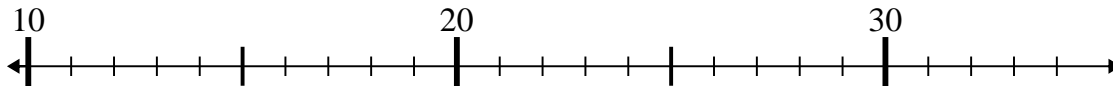
6) $68 + 4 =$



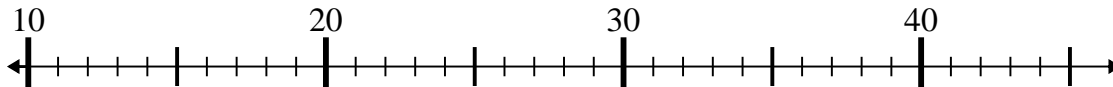
7) $35 - 9 =$



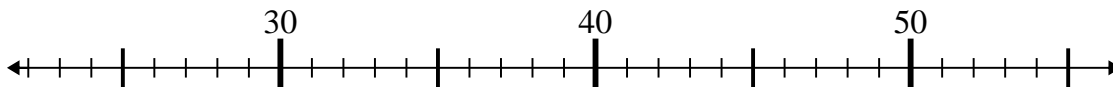
8) $34 + 0 =$



9) $42 - 21 =$



10) $45 - 3 =$



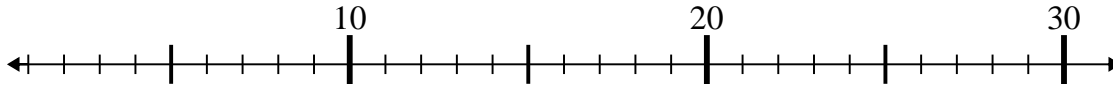
Respuestas

- 1. 36
- 2. 30
- 3. 49
- 4. 62
- 5. 82
- 6. 72
- 7. 26
- 8. 34
- 9. 21
- 10. 42

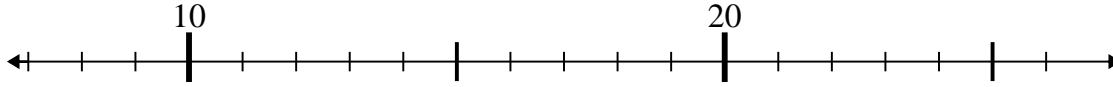


Utilice las rectas numéricas para resolver cada problema.

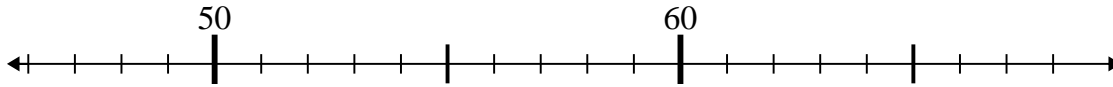
1) $3 + 17 =$



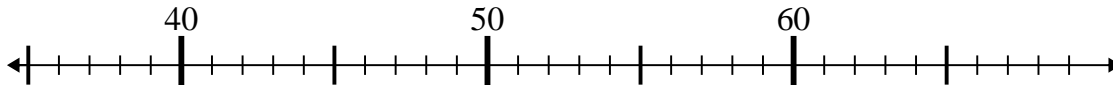
2) $14 + 9 =$



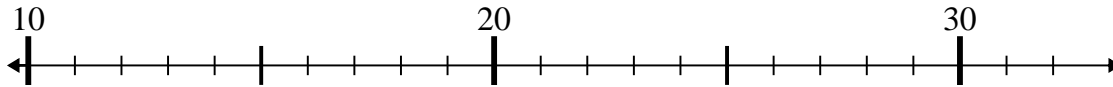
3) $59 - 8 =$



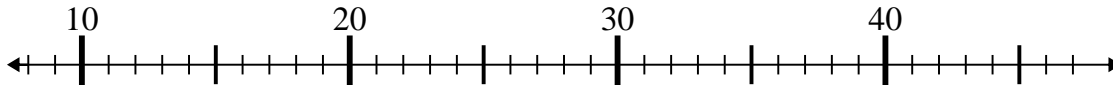
4) $43 - 5 =$



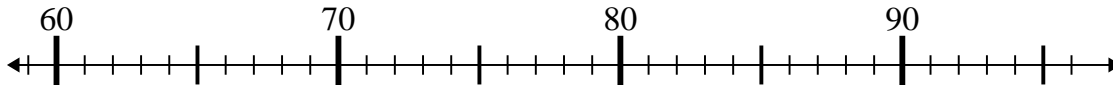
5) $26 - 14 =$



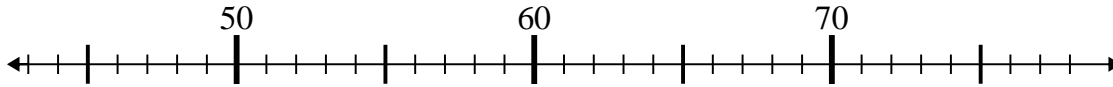
6) $15 + 23 =$



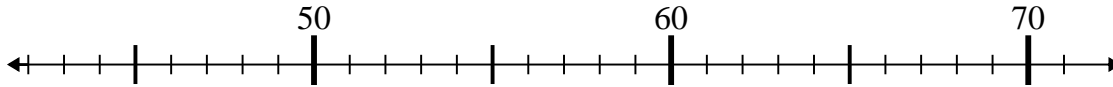
7) $91 + 2 =$



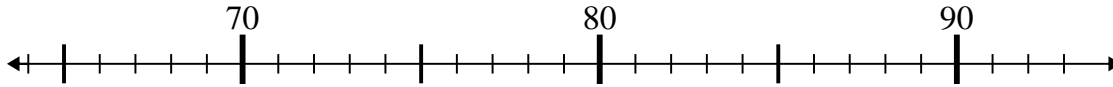
8) $47 + 1 =$



9) $71 - 8 =$



10) $72 + 16 =$



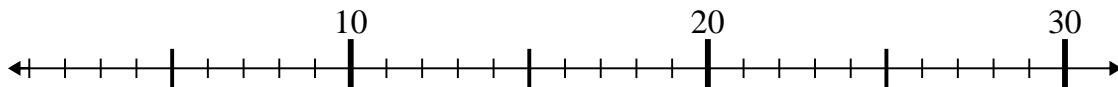
Respuestas

1. _____
2. _____
3. _____
4. _____
5. _____
6. _____
7. _____
8. _____
9. _____
10. _____

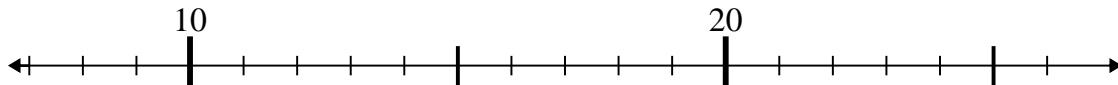


Utilice las rectas numéricas para resolver cada problema.

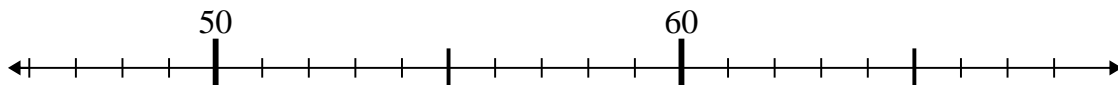
1) $3 + 17 =$



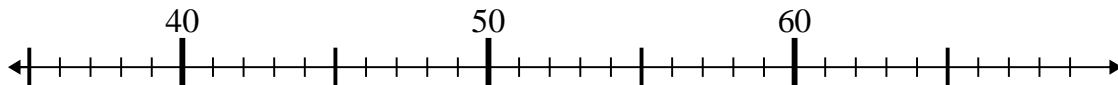
2) $14 + 9 =$



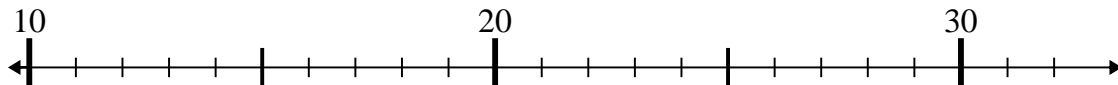
3) $59 - 8 =$



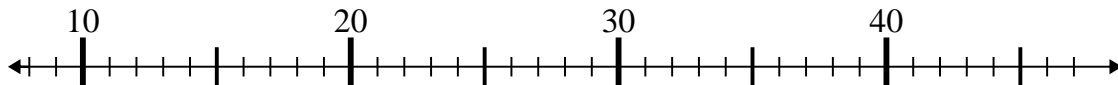
4) $43 - 5 =$



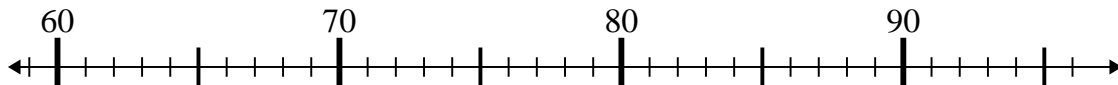
5) $26 - 14 =$



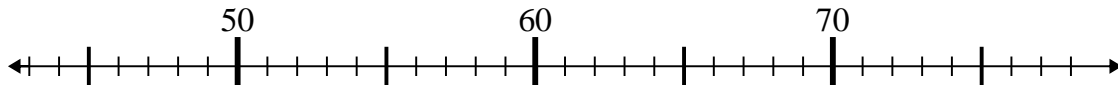
6) $15 + 23 =$



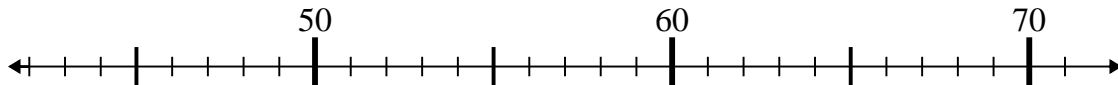
7) $91 + 2 =$



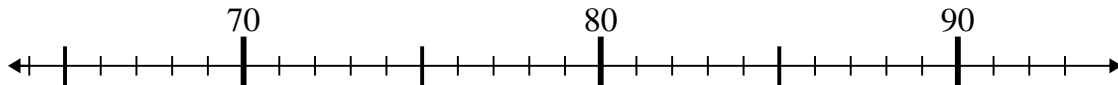
8) $47 + 1 =$



9) $71 - 8 =$



10) $72 + 16 =$



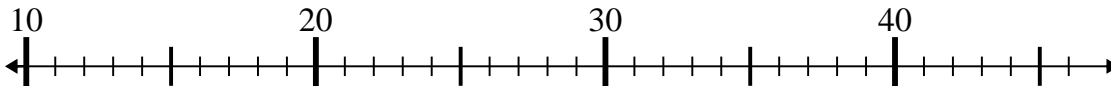
Respuestas

- 1. 20
- 2. 23
- 3. 51
- 4. 38
- 5. 12
- 6. 38
- 7. 93
- 8. 48
- 9. 63
- 10. 88

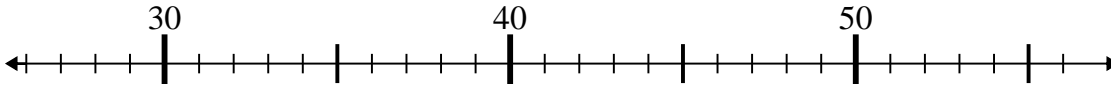


Utilice las rectas numéricas para resolver cada problema.

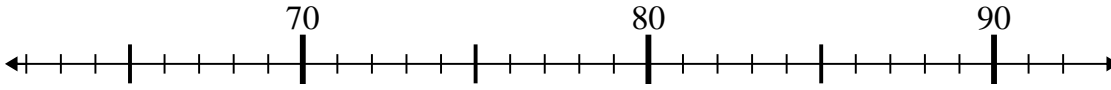
1) $24 - 11 =$



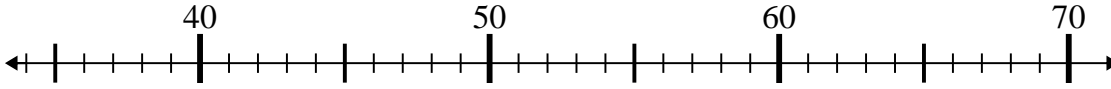
2) $29 + 6 =$



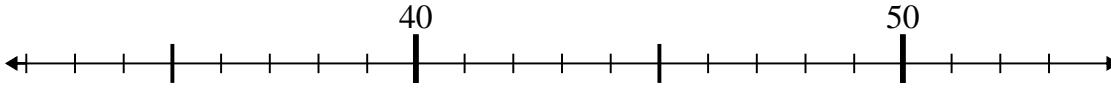
3) $72 + 7 =$



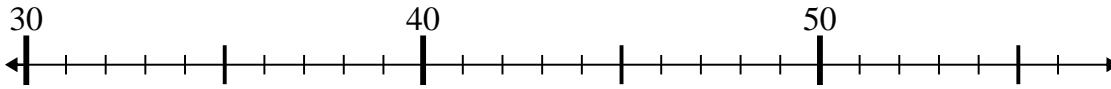
4) $41 + 16 =$



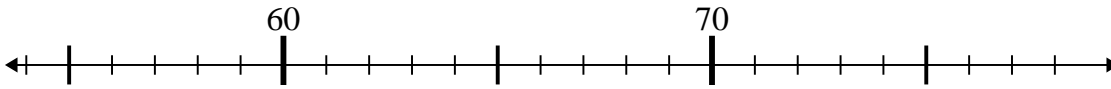
5) $51 - 3 =$



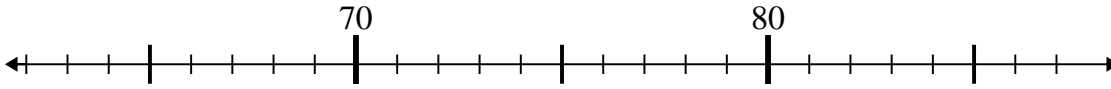
6) $35 - 0 =$



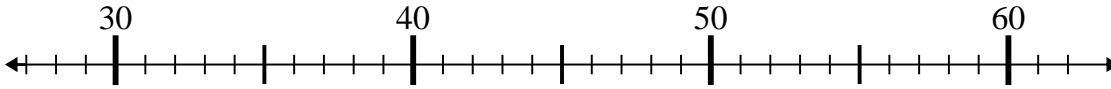
7) $65 + 10 =$



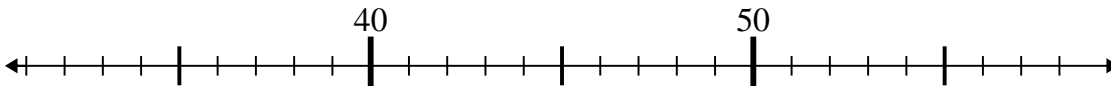
8) $65 + 14 =$



9) $57 - 16 =$



10) $58 - 19 =$



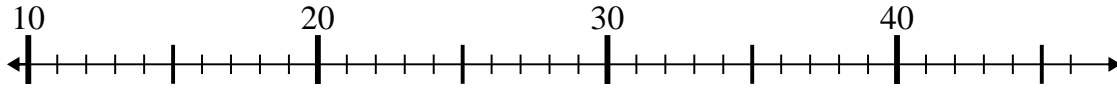
Respuestas

1. _____
2. _____
3. _____
4. _____
5. _____
6. _____
7. _____
8. _____
9. _____
10. _____

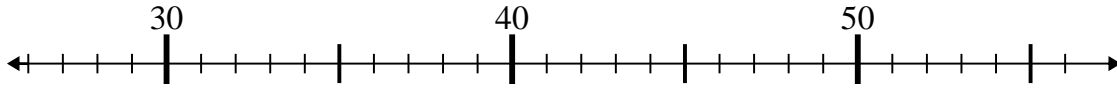


Utilice las rectas numéricas para resolver cada problema.

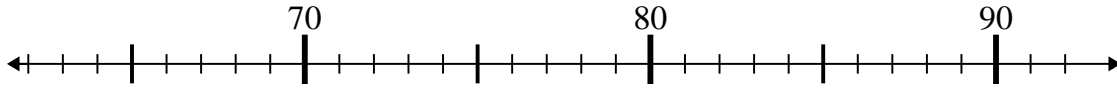
1) $24 - 11 =$



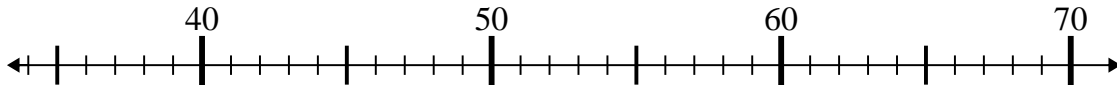
2) $29 + 6 =$



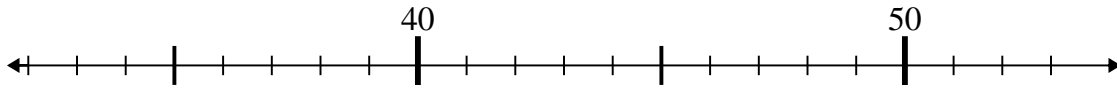
3) $72 + 7 =$



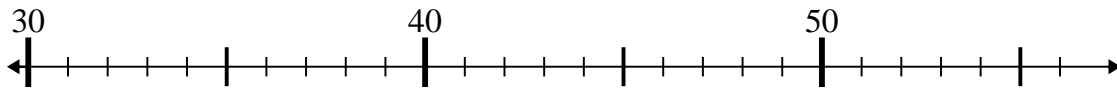
4) $41 + 16 =$



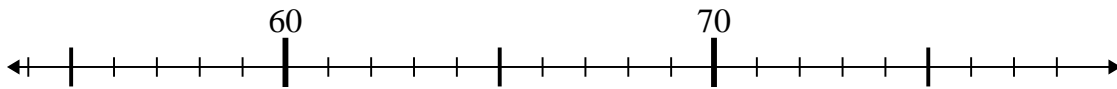
5) $51 - 3 =$



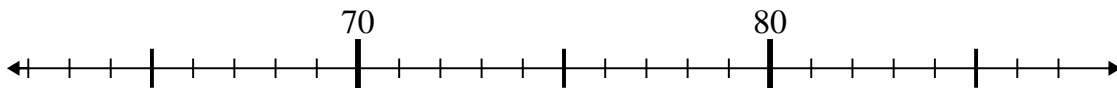
6) $35 - 0 =$



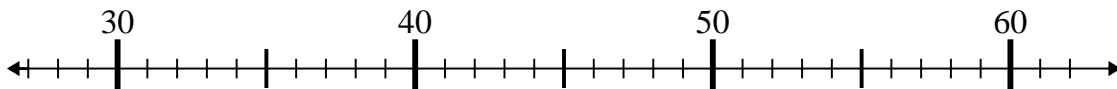
7) $65 + 10 =$



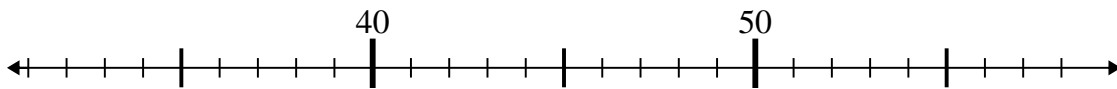
8) $65 + 14 =$



9) $57 - 16 =$



10) $58 - 19 =$



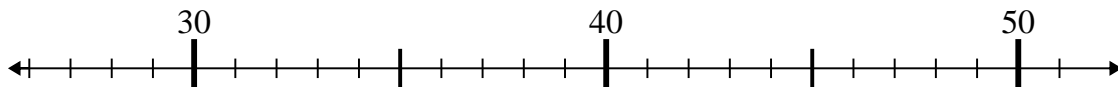
Respuestas

1. 13
2. 35
3. 79
4. 57
5. 48
6. 35
7. 75
8. 79
9. 41
10. 39



Utilice las rectas numéricas para resolver cada problema.

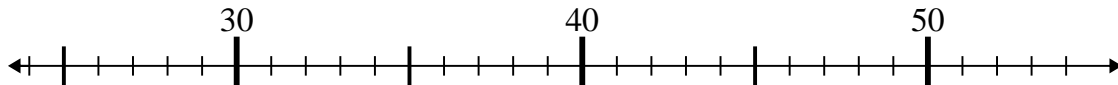
1) $32 - 5 =$



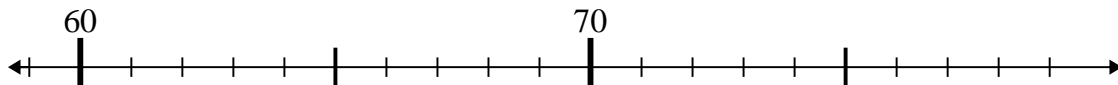
2) $16 + 7 =$



3) $25 + 12 =$



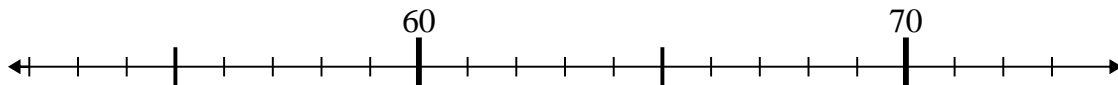
4) $75 - 14 =$



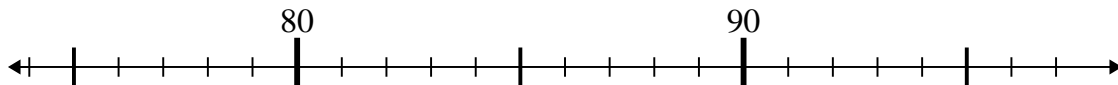
5) $28 + 26 =$



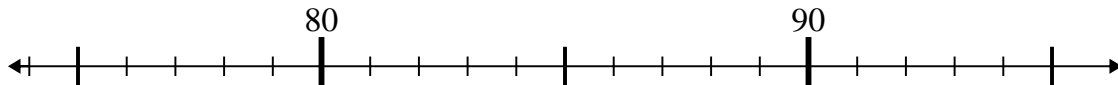
6) $65 - 10 =$



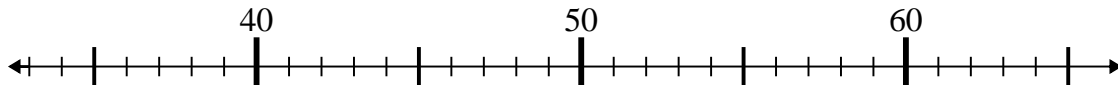
7) $81 - 2 =$



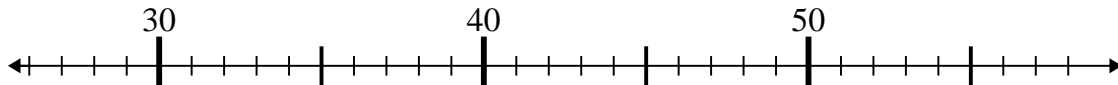
8) $95 - 8 =$



9) $48 - 11 =$



10) $32 + 18 =$



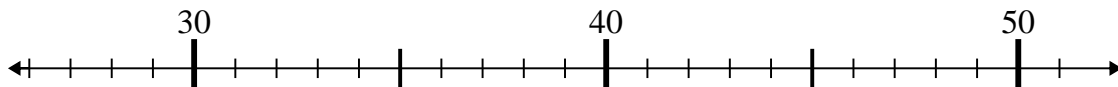
Respuestas

1. _____
2. _____
3. _____
4. _____
5. _____
6. _____
7. _____
8. _____
9. _____
10. _____

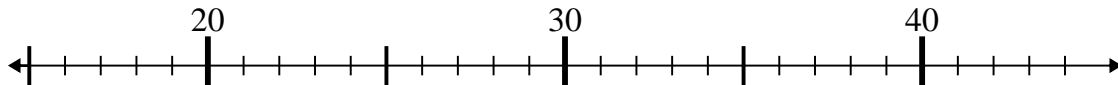


Utilice las rectas numéricas para resolver cada problema.

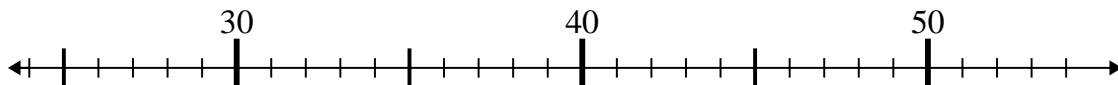
1) $32 - 5 =$



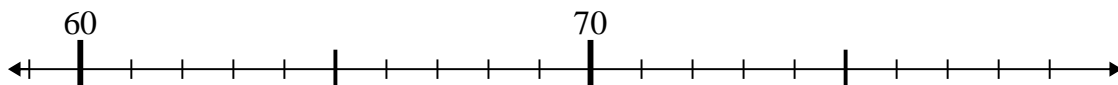
2) $16 + 7 =$



3) $25 + 12 =$



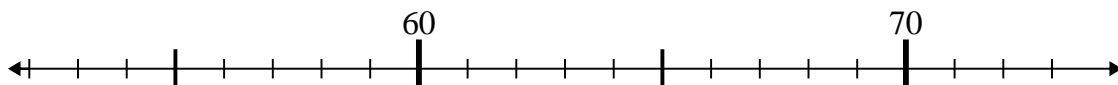
4) $75 - 14 =$



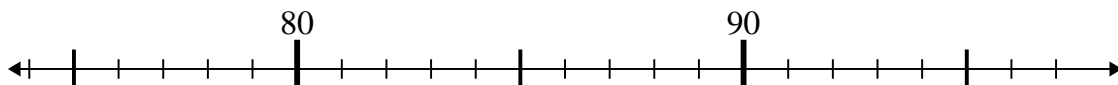
5) $28 + 26 =$



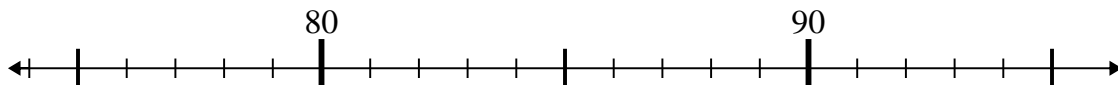
6) $65 - 10 =$



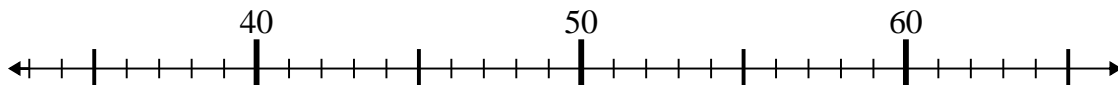
7) $81 - 2 =$



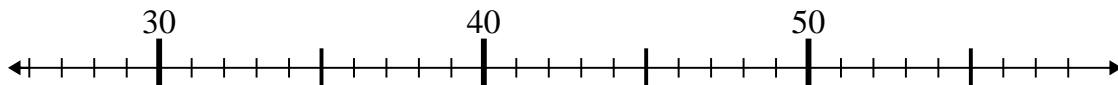
8) $95 - 8 =$



9) $48 - 11 =$



10) $32 + 18 =$



Respuestas

1. 27

2. 23

3. 37

4. 61

5. 54

6. 55

7. 79

8. 87

9. 37

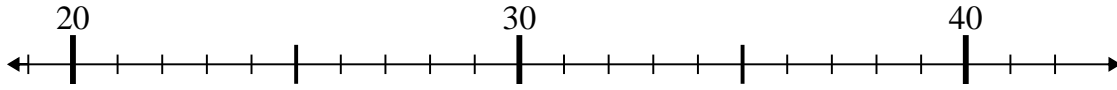
10. 50



Utilice las rectas numéricas para resolver cada problema.

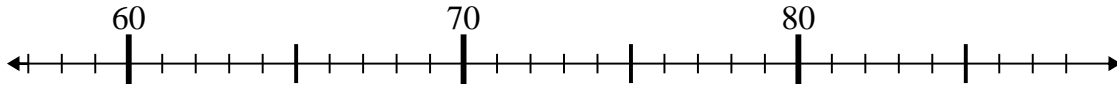
Respuestas

1) $31 + 4 =$



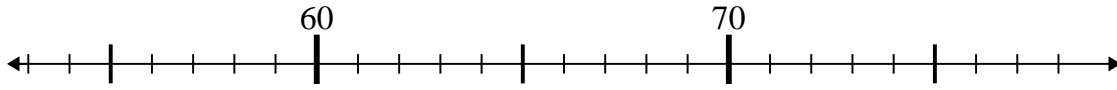
1. _____

2) $76 - 18 =$



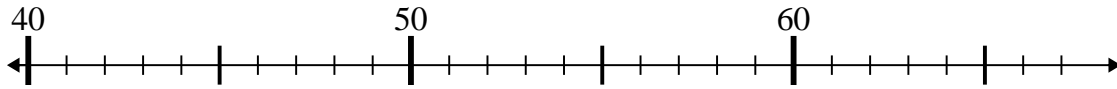
2. _____

3) $57 + 5 =$



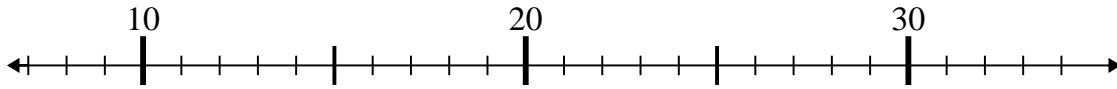
3. _____

4) $40 + 8 =$



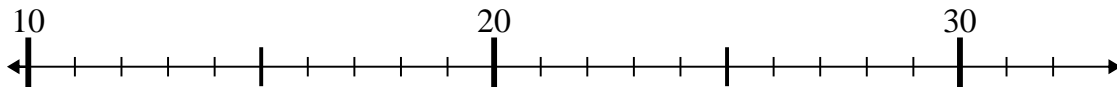
4. _____

5) $8 + 20 =$



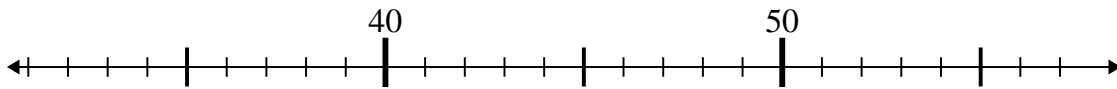
5. _____

6) $13 + 4 =$



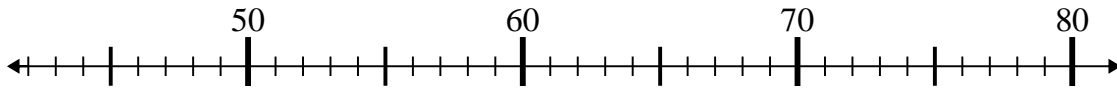
6. _____

7) $56 - 18 =$



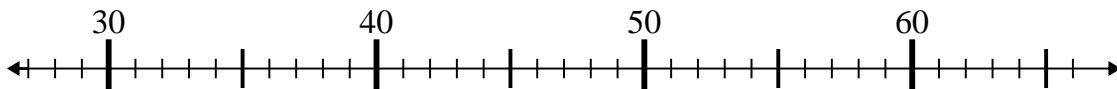
7. _____

8) $61 - 13 =$



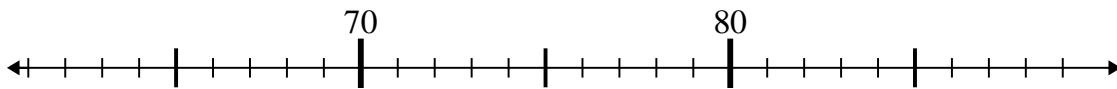
8. _____

9) $40 + 16 =$



9. _____

10) $78 + 3 =$

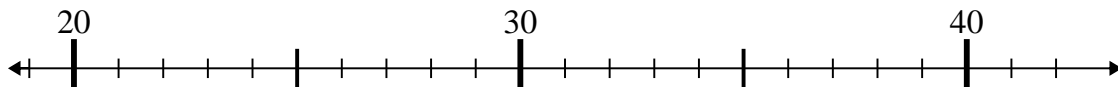


10. _____

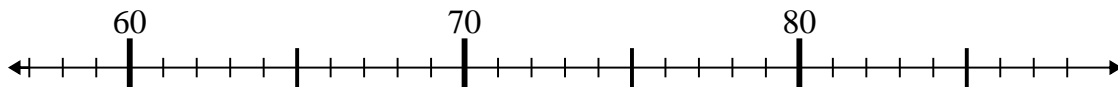


Utilice las rectas numéricas para resolver cada problema.

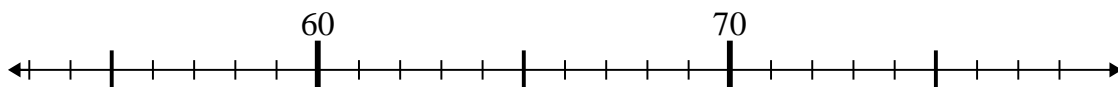
1) $31 + 4 =$



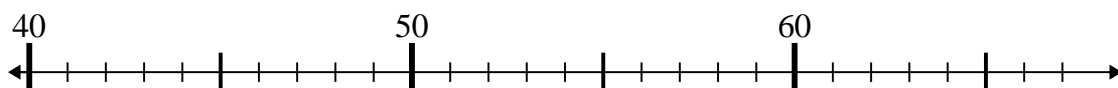
2) $76 - 18 =$



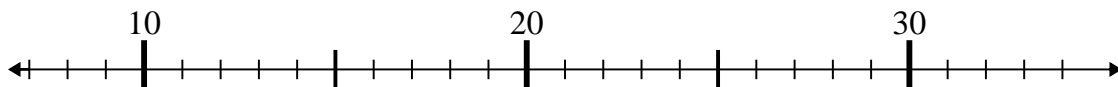
3) $57 + 5 =$



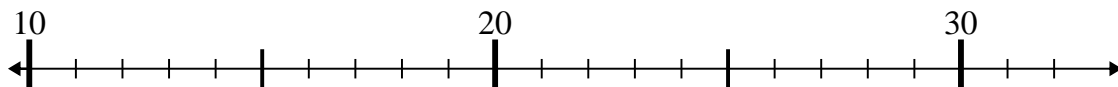
4) $40 + 8 =$



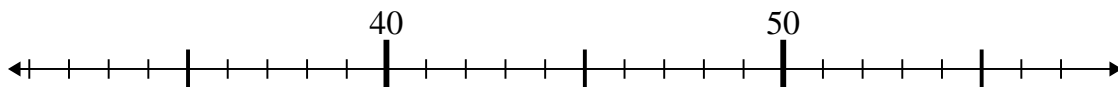
5) $8 + 20 =$



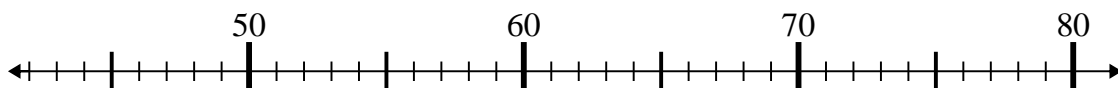
6) $13 + 4 =$



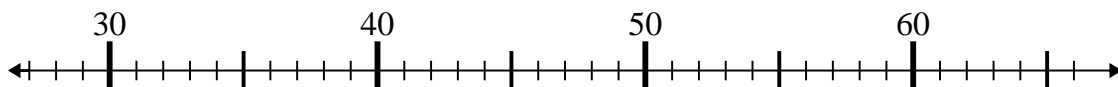
7) $56 - 18 =$



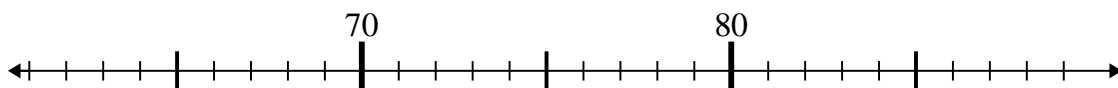
8) $61 - 13 =$



9) $40 + 16 =$



10) $78 + 3 =$



Respuestas

1. 35

2. 58

3. 62

4. 48

5. 28

6. 17

7. 38

8. 48

9. 56

10. 81