



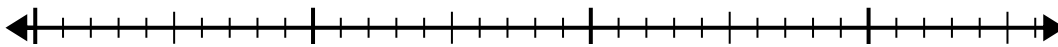
Usa la recta numérica para resolver el problema de división.

Respuestas

1) $30 \div 6 =$

0

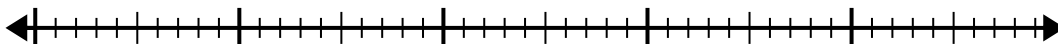
30



2) $40 \div 5 =$

0

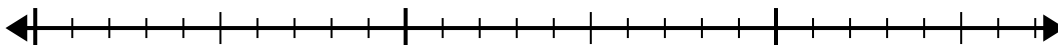
40



3) $24 \div 6 =$

0

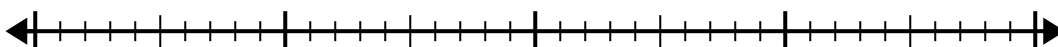
24



4) $30 \div 5 =$

0

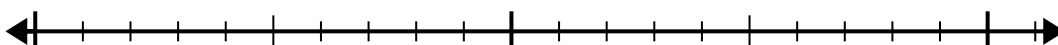
30



5) $20 \div 5 =$

0

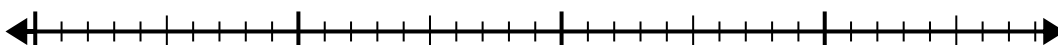
20



6) $35 \div 5 =$

0

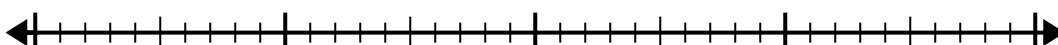
35



7) $32 \div 4 =$

0

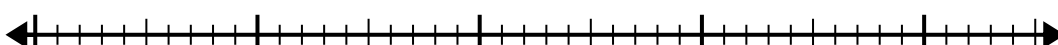
32



8) $35 \div 7 =$

0

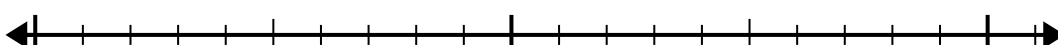
35



9) $21 \div 7 =$

0


21



10) $24 \div 8 =$

0

24

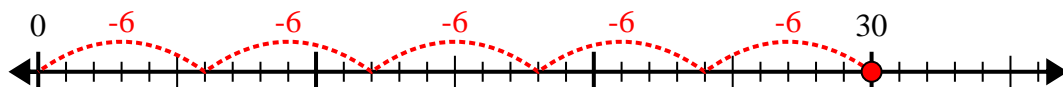


1. _____
2. _____
3. _____
4. _____
5. _____
6. _____
7. _____
8. _____
9. _____
10. _____

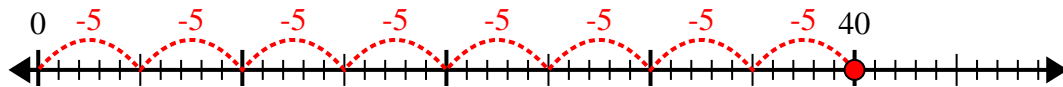


Usa la recta numérica para resolver el problema de división.

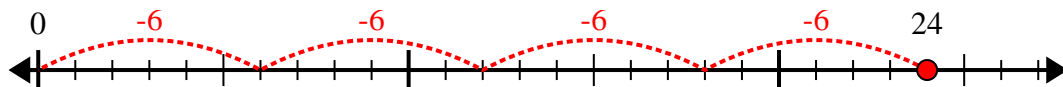
1) $30 \div 6 =$



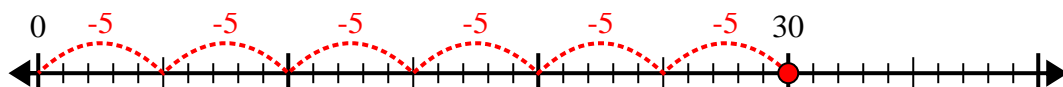
2) $40 \div 5 =$



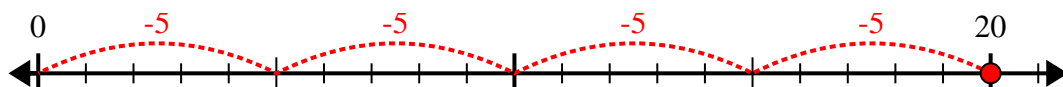
3) $24 \div 6 =$



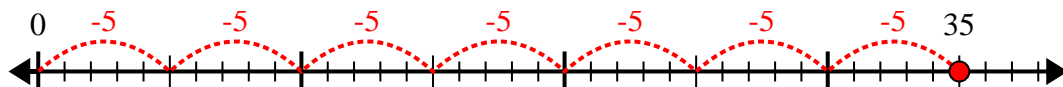
4) $30 \div 5 =$



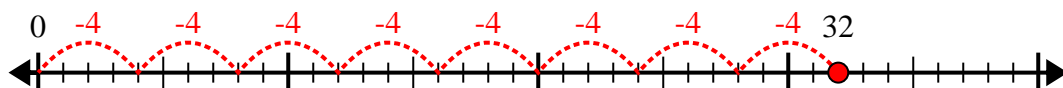
5) $20 \div 5 =$



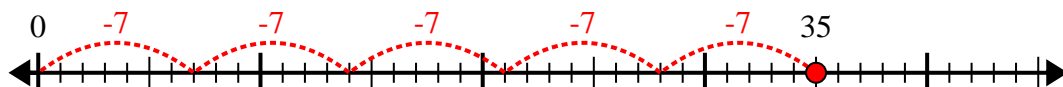
6) $35 \div 5 =$



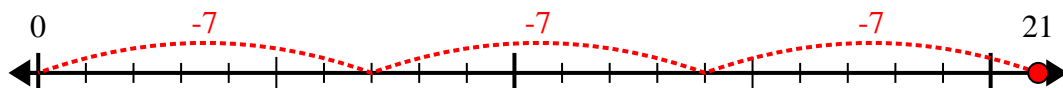
7) $32 \div 4 =$



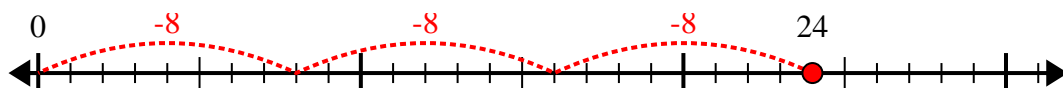
8) $35 \div 7 =$



9) $21 \div 7 =$



10) $24 \div 8 =$



Respuestas

1. 5

2. 8

3. 4

4. 6

5. 4

6. 7

7. 8

8. 5

9. 3

10. 3