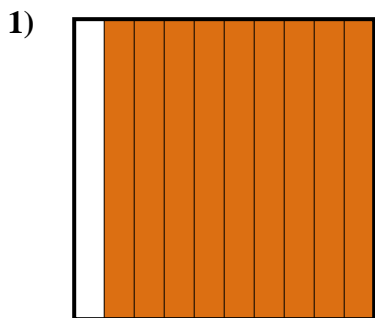


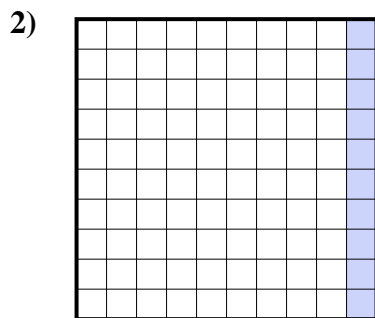


Determina cuál letra mejor representa la cantidad sombreada del total.

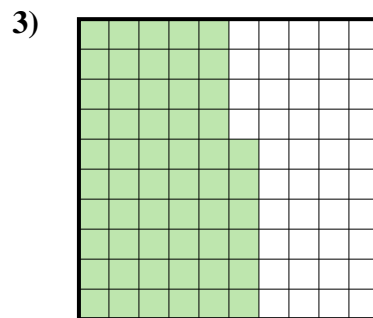
Respuestas




- A. 9
- B. 0.09
- C. 0.9
- D. 900.0



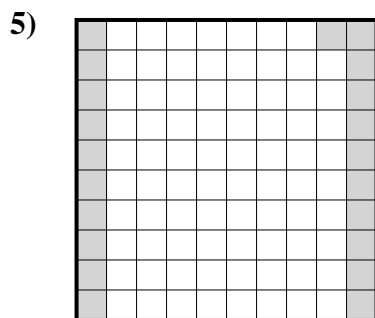
- A. 10
- B. 0.1
- C. 100.00
- D. 100.0



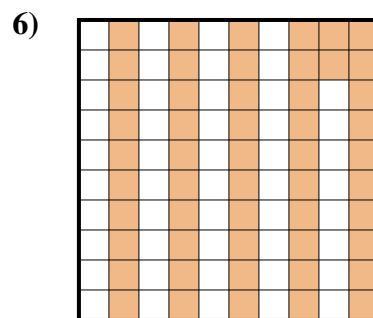
- A. 0.056
- B. 560.0
- C. 560.00
- D. 0.56



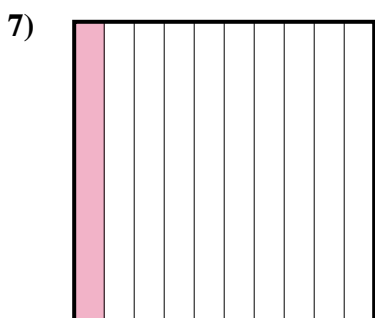
- A. 0.8
- B. 800.00
- C. 0.08
- D. 8



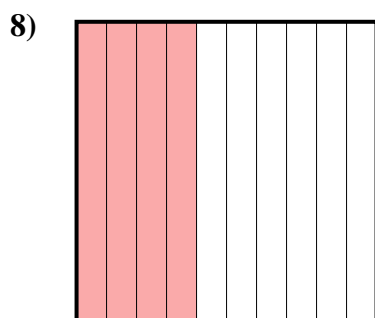
- A. 0.021
- B. 2.1
- C. 21
- D. 0.21



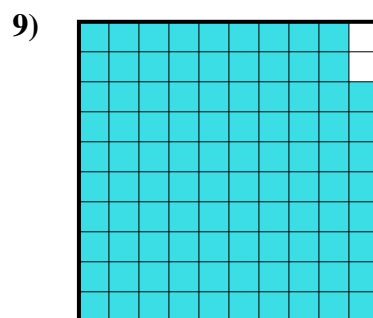
- A. 0.52
- B. 0.052
- C. 52
- D. 520.00



- A. 100.0
- B. 0.01
- C. 0.1
- D. 100.00



- A. 4
- B. 400.0
- C. 0.4
- D. 400.00



- A. 980.00
- B. 0.098
- C. 9.8
- D. 0.98

1. _____

2. _____

3. _____

4. _____

5. _____

6. _____

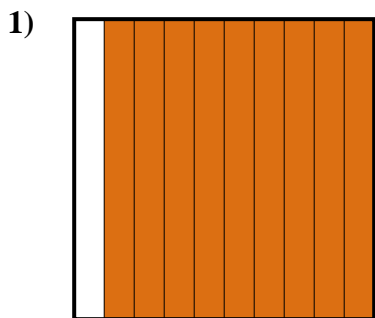
7. _____

8. _____

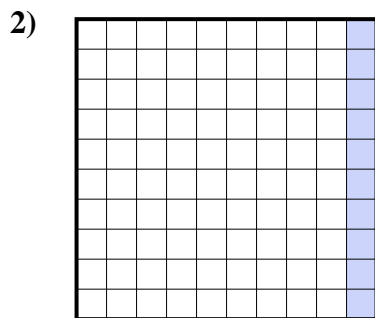
9. _____



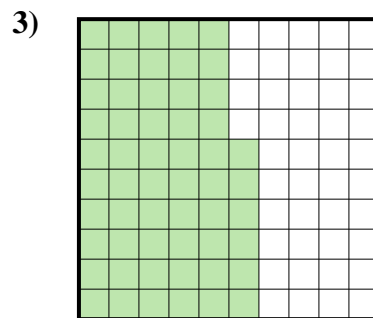
Determina cuál letra mejor representa la cantidad sombreada del total.




- A. 9
- B. 0.09
- C. 0.9
- D. 900.0



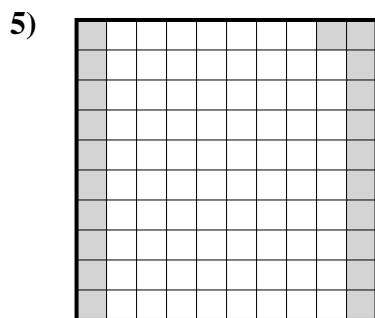
- A. 10
- B. 0.1
- C. 100.00
- D. 100.0



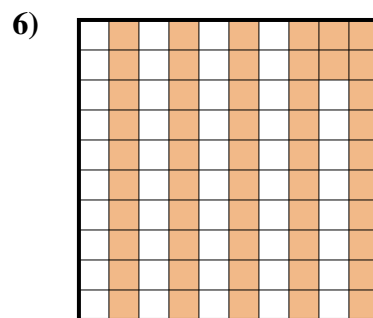
- A. 0.056
- B. 560.0
- C. 560.00
- D. 0.56



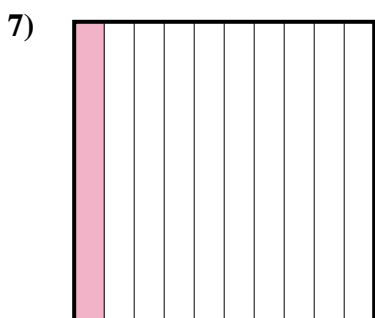
- A. 0.8
- B. 800.00
- C. 0.08
- D. 8



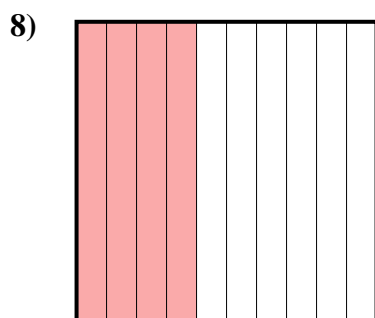
- A. 0.021
- B. 2.1
- C. 21
- D. 0.21



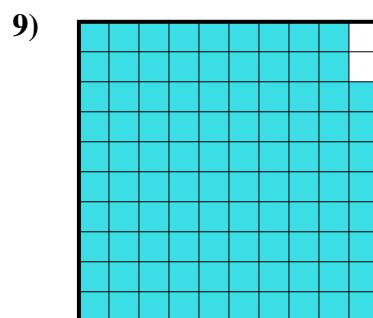
- A. 0.52
- B. 0.052
- C. 52
- D. 520.00



- A. 100.0
- B. 0.01
- C. 0.1
- D. 100.00



- A. 4
- B. 400.0
- C. 0.4
- D. 400.00



- A. 980.00
- B. 0.098
- C. 9.8
- D. 0.98

Respuestas

- 1. **C**
- 2. **B**
- 3. **D**
- 4. **A**
- 5. **D**
- 6. **A**
- 7. **C**
- 8. **C**
- 9. **D**