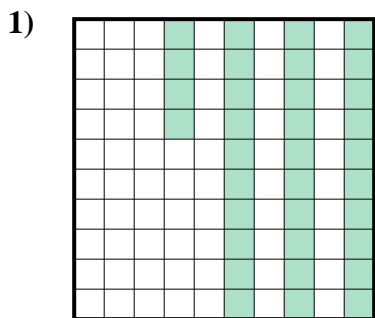


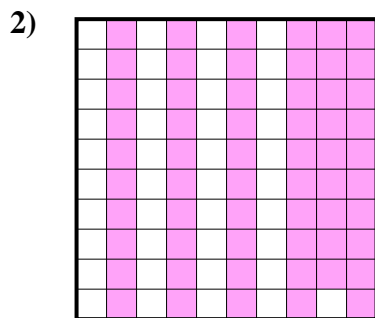


Determina cuál letra mejor representa la cantidad sombreada del total.

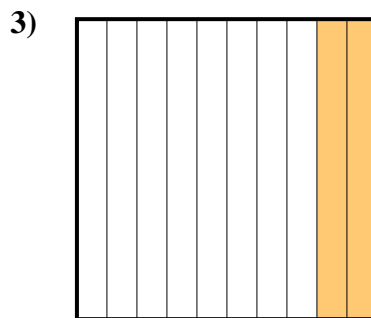
**Respuestas**



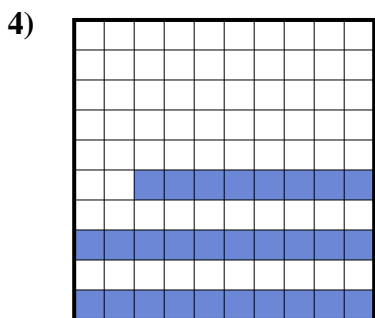
- A. 0.034
- B. 3.4
- C. 340.00
- D. 0.34




- A. 590.00
- B. 0.59
- C. 0.059
- D. 59



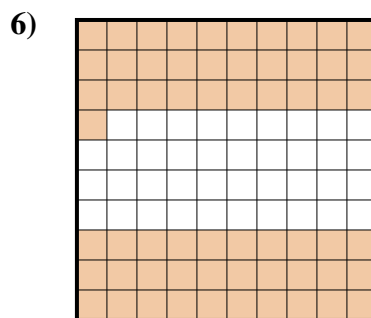
- A. 200.00
- B. 20
- C. 0.2
- D. 0.02



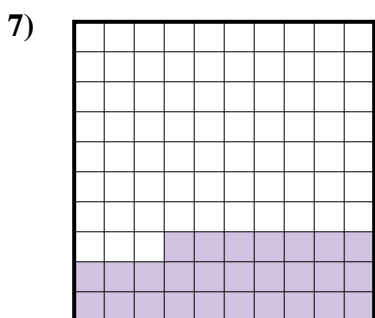
- A. 0.028
- B. 280.00
- C. 0.28
- D. 28




- A. 300.00
- B. 0.3
- C. 0.03
- D. 3



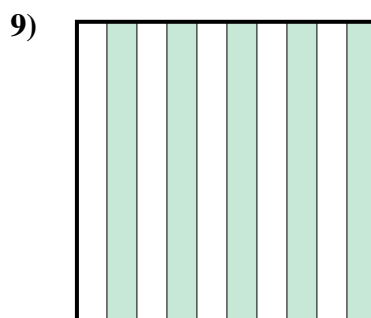
- A. 610.0
- B. 0.61
- C. 61
- D. 6.1



- A. 0.27
- B. 27
- C. 2.7
- D. 270.00



- A. 100.00
- B. 0.1
- C. 0.01
- D. 1



- A. 0.05
- B. 500.0
- C. 500.00
- D. 0.5

1. \_\_\_\_\_

2. \_\_\_\_\_

3. \_\_\_\_\_

4. \_\_\_\_\_

5. \_\_\_\_\_

6. \_\_\_\_\_

7. \_\_\_\_\_

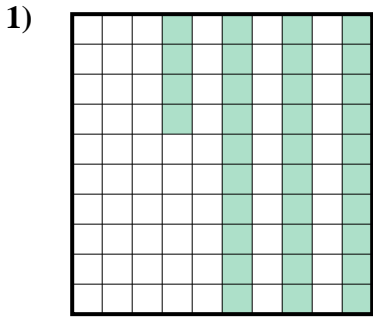
8. \_\_\_\_\_

9. \_\_\_\_\_

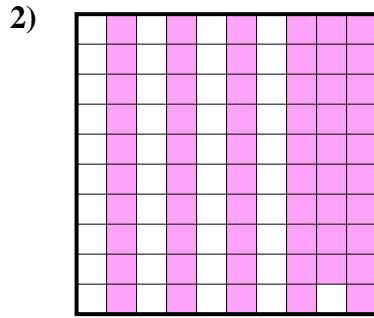


Determina cuál letra mejor representa la cantidad sombreada del total.

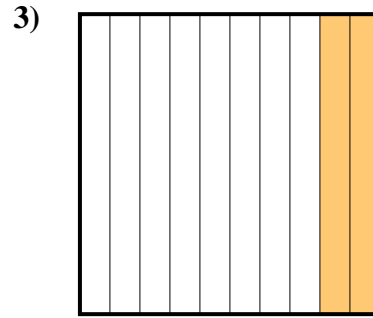
**Respuestas**



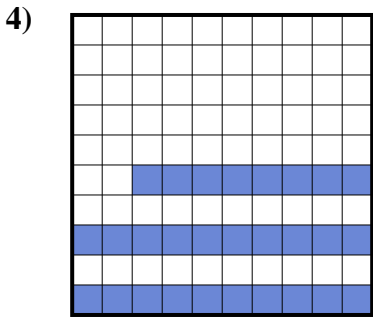
- A. 0.034
- B. 3.4
- C. 340.00
- D. 0.34



- A. 590.00
- B. 0.59
- C. 0.059
- D. 59



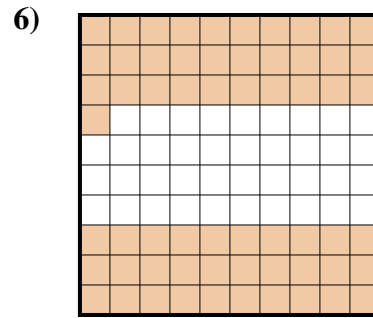
- A. 200.00
- B. 20
- C. 0.2
- D. 0.02



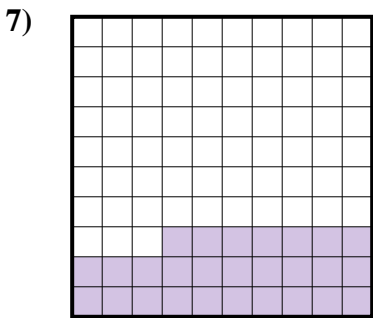
- A. 0.028
- B. 280.00
- C. 0.28
- D. 28




- A. 300.00
- B. 0.3
- C. 0.03
- D. 3



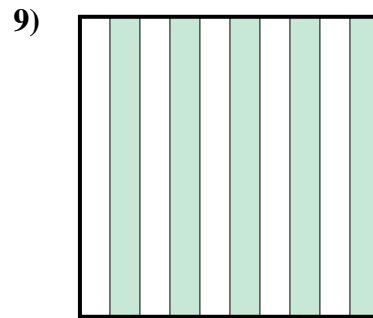
- A. 610.0
- B. 0.61
- C. 61
- D. 6.1



- A. 0.27
- B. 27
- C. 2.7
- D. 270.00



- A. 100.00
- B. 0.1
- C. 0.01
- D. 1



- A. 0.05
- B. 500.0
- C. 500.00
- D. 0.5

- 1. **D**
- 2. **B**
- 3. **C**
- 4. **C**
- 5. **B**
- 6. **B**
- 7. **A**
- 8. **B**
- 9. **D**