


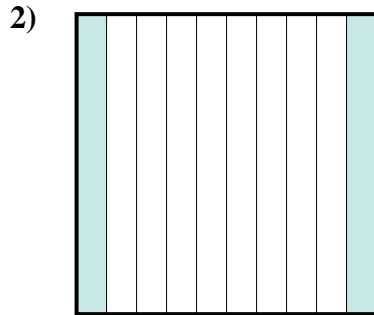


Determina cuál letra mejor representa la cantidad sombreada del total.

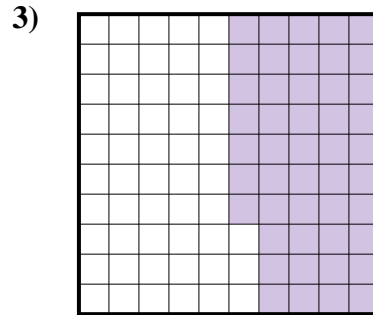
Respuestas



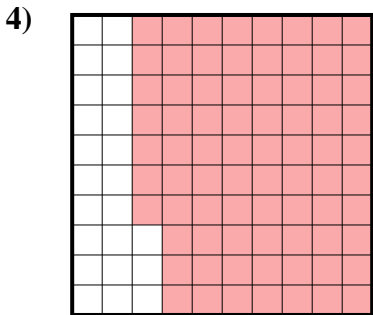
- A. 0.6
- B. 600.00
- C. 600.0
- D. 6




- A. 2
- B. 200.00
- C. 20
- D. 0.2



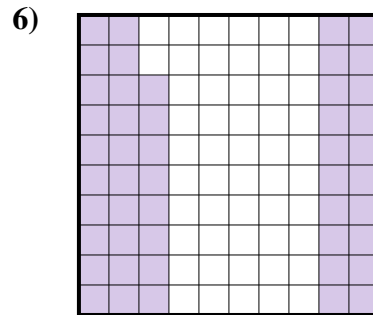
- A. 470.00
- B. 0.047
- C. 0.47
- D. 47



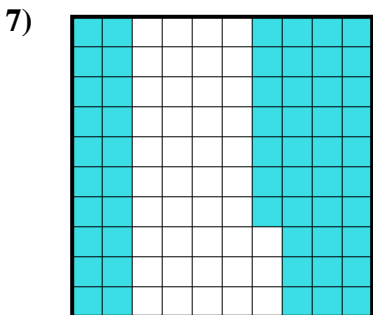
- A. 77
- B. 770.00
- C. 0.077
- D. 0.77



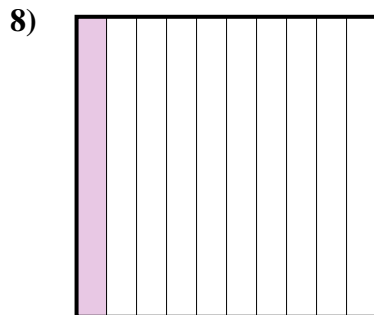
- A. 700.0
- B. 70
- C. 0.7
- D. 0.07



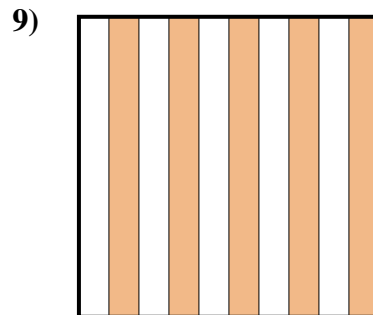
- A. 48
- B. 480.00
- C. 480.0
- D. 0.48



- A. 5.7
- B. 570.00
- C. 0.57
- D. 57



- A. 1
- B. 0.1
- C. 10
- D. 100.0



- A. 0.5
- B. 50
- C. 500.00
- D. 5

1. _____

2. _____

3. _____

4. _____

5. _____

6. _____

7. _____


8. _____

9. _____

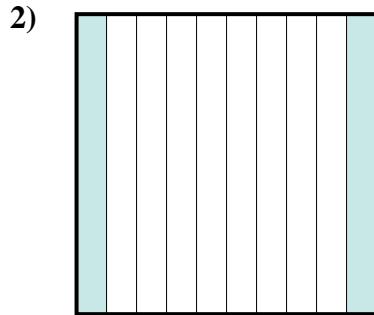


Determina cuál letra mejor representa la cantidad sombreada del total.

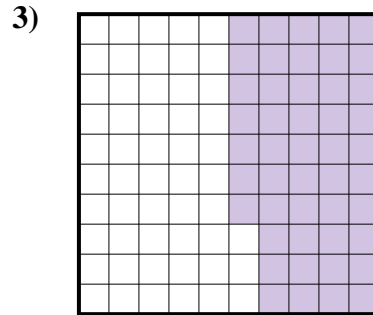
Respuestas



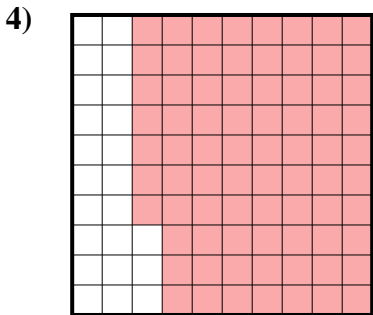
- A. 0.6
- B. 600.00
- C. 600.0
- D. 6




- A. 2
- B. 200.00
- C. 20
- D. 0.2



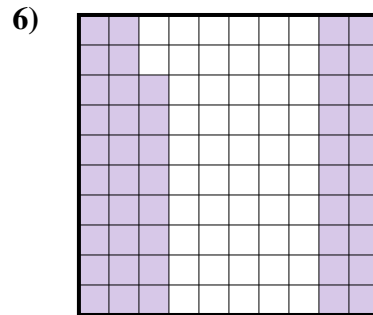
- A. 470.00
- B. 0.047
- C. 0.47
- D. 47



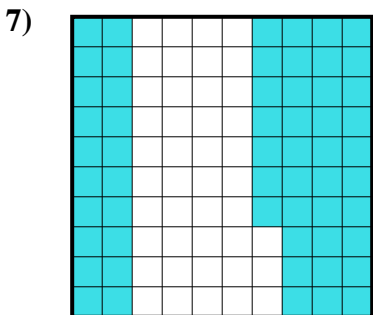
- A. 77
- B. 770.00
- C. 0.077
- D. 0.77



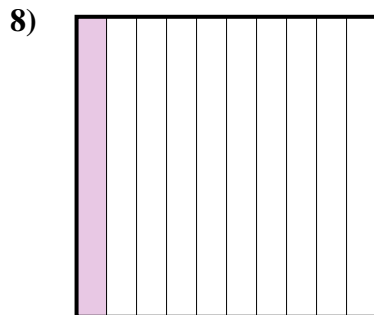
- A. 700.0
- B. 70
- C. 0.7
- D. 0.07



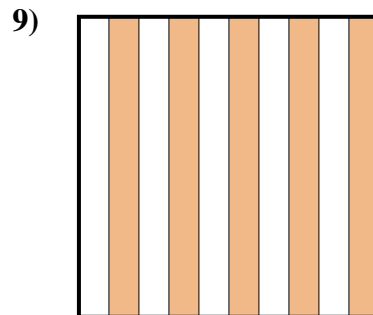
- A. 48
- B. 480.00
- C. 480.0
- D. 0.48



- A. 5.7
- B. 570.00
- C. 0.57
- D. 57



- A. 1
- B. 0.1
- C. 10
- D. 100.0



- A. 0.5
- B. 50
- C. 500.00
- D. 5

- 1. **A**
- 2. **D**
- 3. **C**
- 4. **D**
- 5. **C**
- 6. **D**
- 7. **C**
- 8. **B**
- 9. **A**