



Determina cual gráfica pertenece a la tabla.

Respuestas

1)

Gente	
	8,000
	2,000
	1,000
	6,000
	3,000

2)

Gente	
	8,000
	6,000
	2,000
	1,000
	3,000

3)

Gente	
	2,000
	1,000
	6,000
	8,000
	3,000

4)

Gente	
	8,000
	2,000
	1,000
	3,000
	6,000

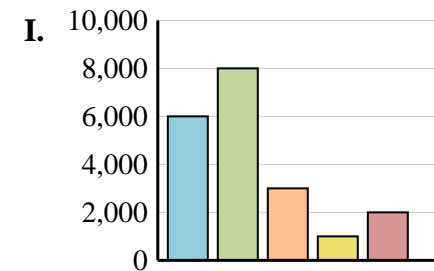
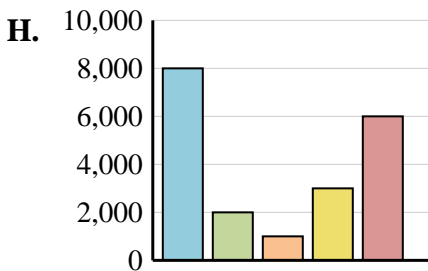
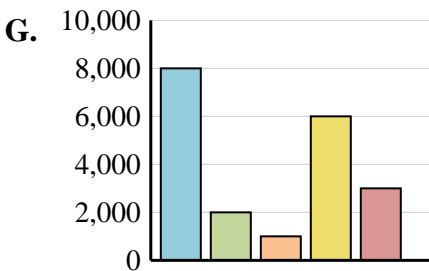
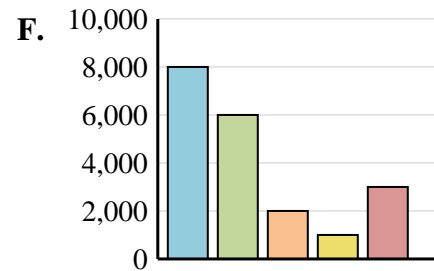
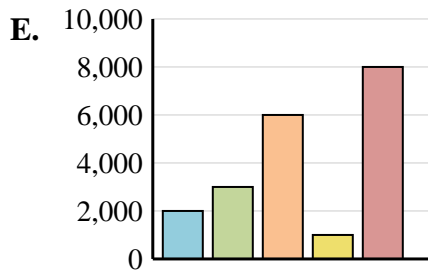
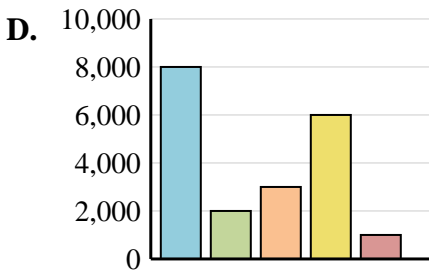
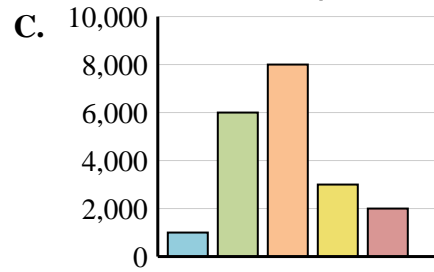
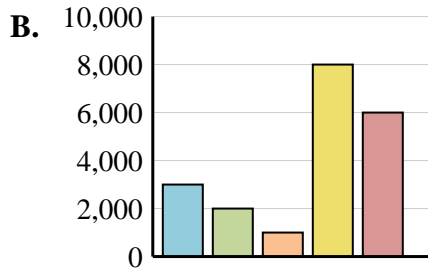
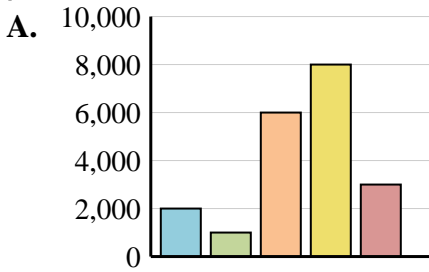
5)

Gente	
	1,000
	6,000
	8,000
	3,000
	2,000

6)

Gente	
	8,000
	2,000
	3,000
	6,000
	1,000

1. \_\_\_\_\_
2. \_\_\_\_\_
3. \_\_\_\_\_
4. \_\_\_\_\_
5. \_\_\_\_\_
6. \_\_\_\_\_





Determina cual gráfica pertenece a la tabla.

Respuestas

1)

Gente	
	8,000
	2,000
	1,000
	6,000
	3,000

2)

Gente	
	8,000
	6,000
	2,000
	1,000
	3,000

3)

Gente	
	2,000
	1,000
	6,000
	8,000
	3,000

4)

Gente	
	8,000
	2,000
	1,000
	3,000
	6,000

5)

Gente	
	1,000
	6,000
	8,000
	3,000
	2,000

6)

Gente	
	8,000
	2,000
	3,000
	6,000
	1,000

1. **G**

2. **F**

3. **A**

4. **H**

5. **C**

6. **D**

