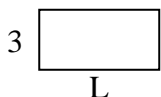




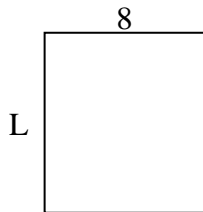
Determina el valor de 'L'. Las longitudes están en cm (no a escala).

Respuestas

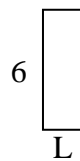
1) perímetro = 18



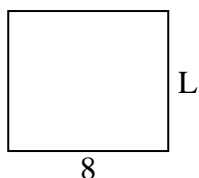
2) perímetro = 34



3) perímetro = 16



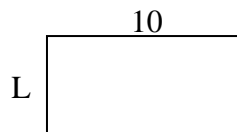
4) perímetro = 30



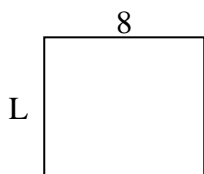
5) perímetro = 10



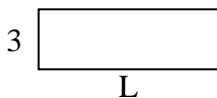
6) perímetro = 30



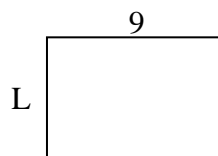
7) perímetro = 30



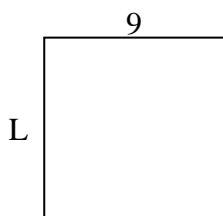
8) perímetro = 24



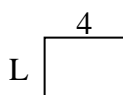
9) perímetro = 30



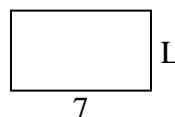
10) perímetro = 36



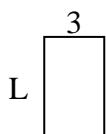
11) perímetro = 14




12) perímetro = 22



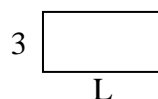
13) perímetro = 16



14) perímetro = 24



15) perímetro = 18

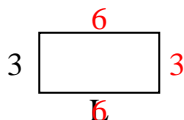


1. _____
2. _____
3. _____
4. _____
5. _____
6. _____
7. _____
8. _____
9. _____
10. _____
11. _____
12. _____
13. _____
14. _____
15. _____

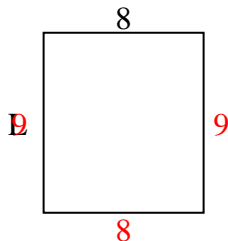


Determina el valor de 'L'. Las longitudes están en cm (no a escala).

1) perímetro = 18



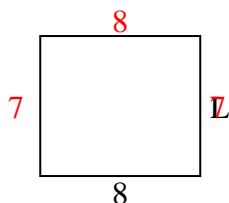
2) perímetro = 34



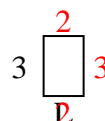
3) perímetro = 16



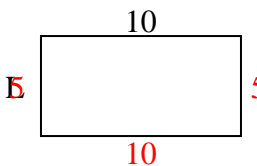
4) perímetro = 30



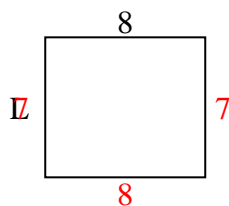
5) perímetro = 10



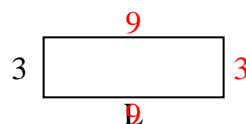
6) perímetro = 30



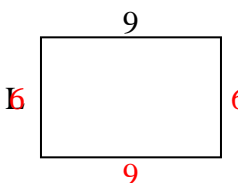
7) perímetro = 30



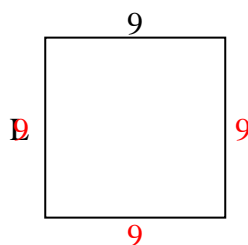
8) perímetro = 24



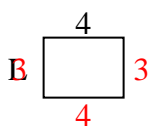
9) perímetro = 30



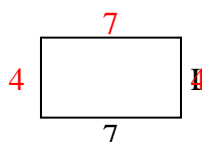
10) perímetro = 36



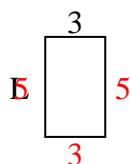
11) perímetro = 14




12) perímetro = 22



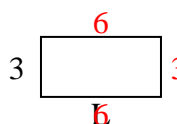
13) perímetro = 16



14) perímetro = 24



15) perímetro = 18

**Respuestas**1. 6 cm2. 9 cm3. 2 cm4. 7 cm5. 2 cm6. 5 cm7. 7 cm8. 9 cm9. 6 cm10. 9 cm11. 3 cm12. 4 cm13. 5 cm14. 2 cm15. 6 cm