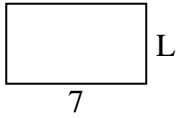


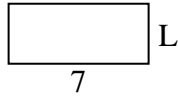


Determina el valor de 'P'.

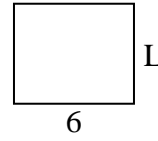
1) Área = $28u^2$



2) Área = $21u^2$



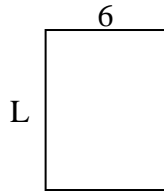
3) Área = $30u^2$



4) Área = $12u^2$




5) Área = $48u^2$



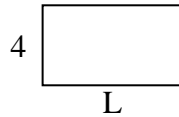
6) Área = $6u^2$



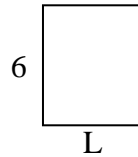
7) Área = $18u^2$



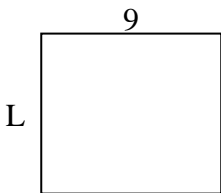
8) Área = $28u^2$



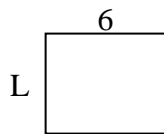
9) Área = $30u^2$



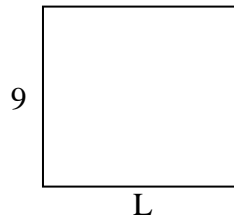
10) Área = $72u^2$



11) Área = $30u^2$



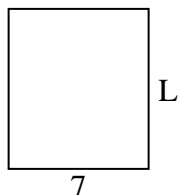
12) Área = $90u^2$




13) Área = $30u^2$



14) Área = $56u^2$



15) Área = $54u^2$



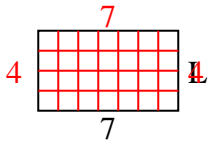
Respuestas

1. _____
2. _____
3. _____
4. _____
5. _____
6. _____
7. _____
8. _____
9. _____
10. _____
11. _____
12. _____
13. _____
14. _____
15. _____

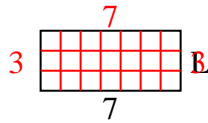


Determina el valor de 'P'.

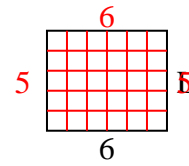
1) Área = $28u^2$



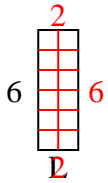
2) Área = $21u^2$



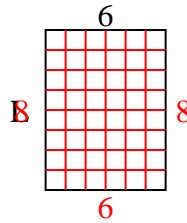
3) Área = $30u^2$



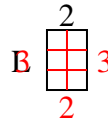
4) Área = $12u^2$



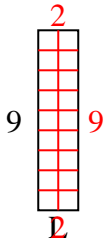
5) Área = $48u^2$



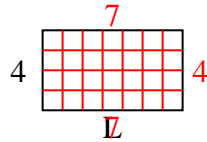
6) Área = $6u^2$



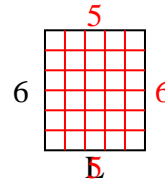
7) Área = $18u^2$



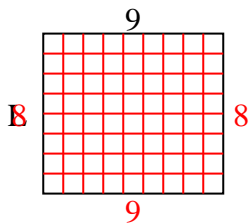
8) Área = $28u^2$



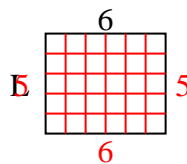
9) Área = $30u^2$



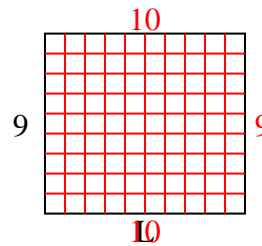
10) Área = $72u^2$



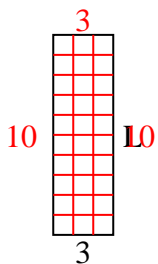
11) Área = $30u^2$



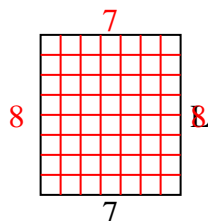
12) Área = $90u^2$



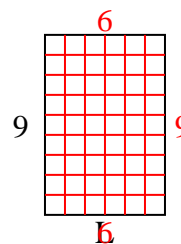
13) Área = $30u^2$



14) Área = $56u^2$



15) Área = $54u^2$



Respuestas

1. 4
2. 3
3. 5
4. 2
5. 8
6. 3
7. 2
8. 7
9. 5
10. 8
11. 5
12. 10
13. 10
14. 8
15. 6