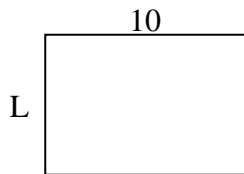


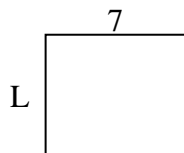


Determina el valor de 'P'.

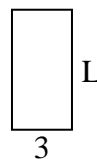
1) Área = $70u^2$



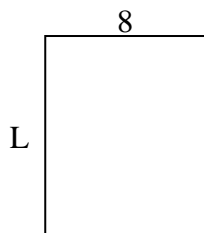
2) Área = $42u^2$




3) Área = $18u^2$



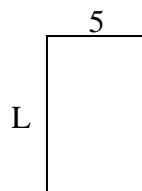
4) Área = $80u^2$



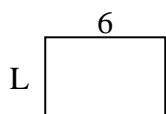
5) Área = $18u^2$




6) Área = $40u^2$



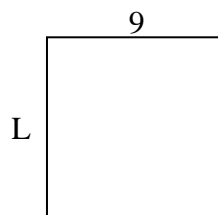
7) Área = $24u^2$



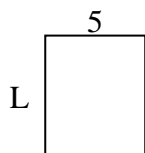
8) Área = $60u^2$



9) Área = $81u^2$



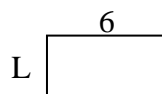
10) Área = $30u^2$



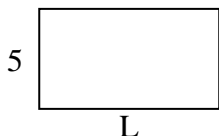
11) Área = $9u^2$



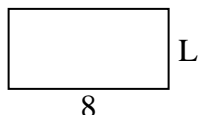
12) Área = $18u^2$



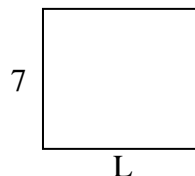
13) Área = $45u^2$



14) Área = $32u^2$



15) Área = $56u^2$



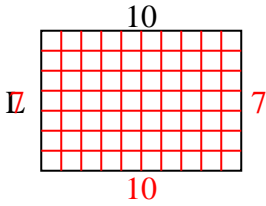
Respuestas

1. _____
2. _____
3. _____
4. _____
5. _____
6. _____
7. _____
8. _____
9. _____
10. _____
11. _____
12. _____
13. _____
14. _____
15. _____

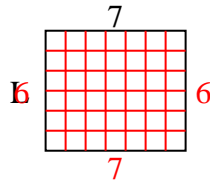


Determina el valor de 'P'.

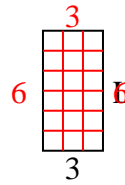
1) Área = $70u^2$



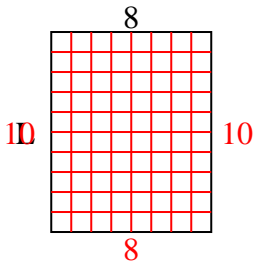
2) Área = $42u^2$



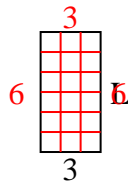
3) Área = $18u^2$



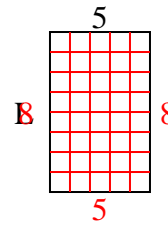
4) Área = $80u^2$



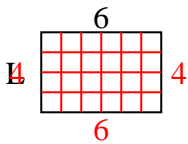
5) Área = $18u^2$



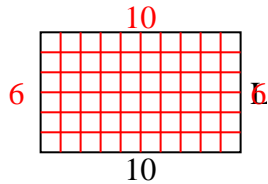
6) Área = $40u^2$



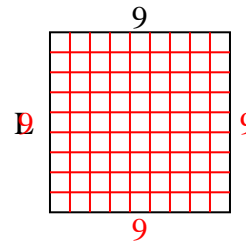
7) Área = $24u^2$



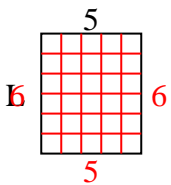
8) Área = $60u^2$



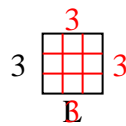
9) Área = $81u^2$



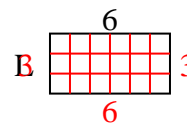
10) Área = $30u^2$



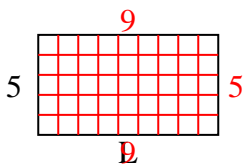
11) Área = $9u^2$



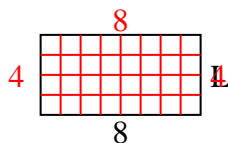
12) Área = $18u^2$



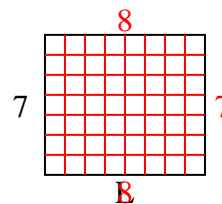
13) Área = $45u^2$



14) Área = $32u^2$



15) Área = $56u^2$



Respuestas

1. 7

2. 6

3. 6

4. 10

5. 6

6. 8

7. 4

8. 6

9. 9

10. 6

11. 3

12. 3

13. 9

14. 4

15. 8