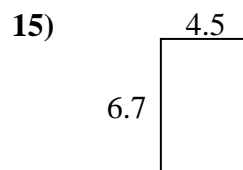
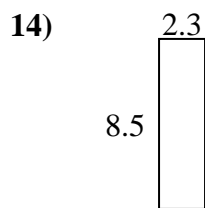
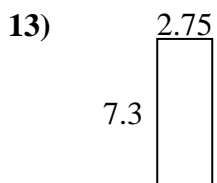
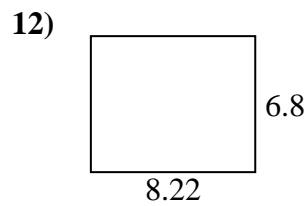
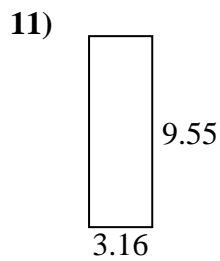
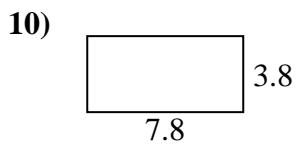
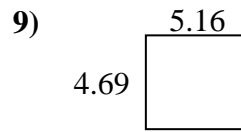
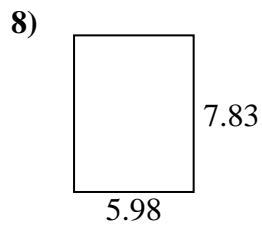
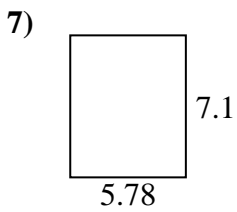
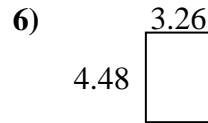
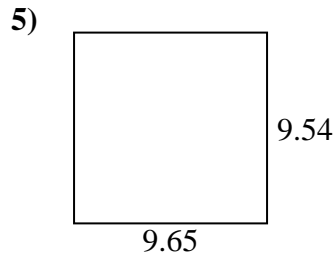
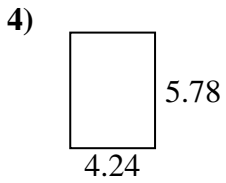
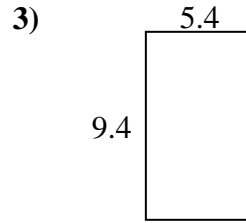
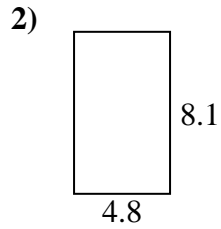
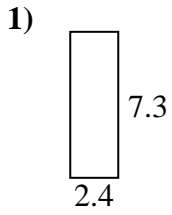




Encuentra el perímetro y el área de cada figura. Responde con la décima más cercana.

Respuestas

1. _____

2. _____

3. _____

4. _____

5. _____

6. _____

7. _____

8. _____

9. _____

10. _____

11. _____

12. _____

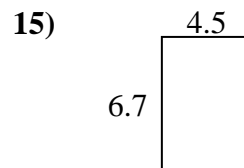
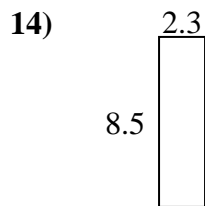
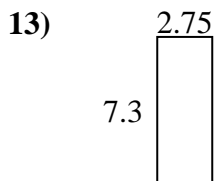
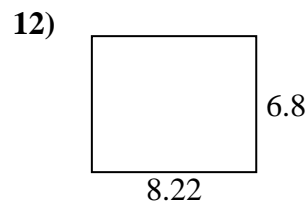
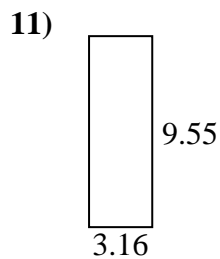
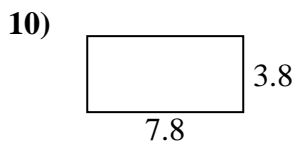
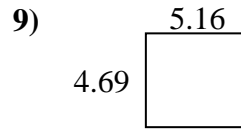
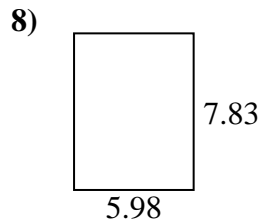
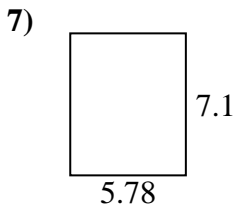
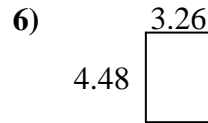
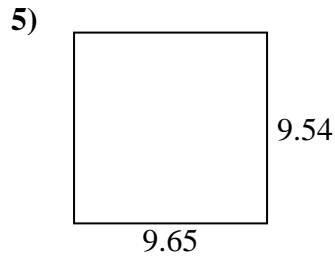
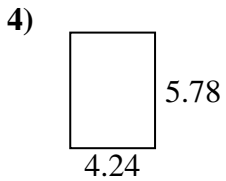
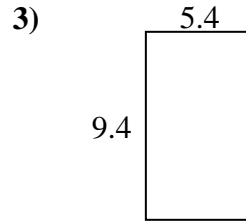
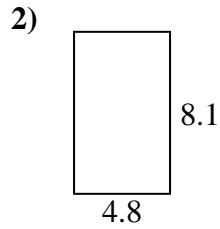
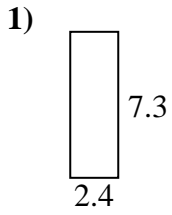
13. _____

14. _____

15. _____



Encuentra el perímetro y el área de cada figura. Responde con la décima más cercana.

Respuestas1. 17.5 19.42. 38.9 25.83. 50.8 29.64. 24.5 20.05. 92.1 38.46. 14.6 15.57. 41.0 25.88. 46.8 27.69. 24.2 19.710. 29.6 23.211. 30.2 25.412. 55.9 30.013. 20.1 20.114. 19.6 21.615. 30.2 22.4