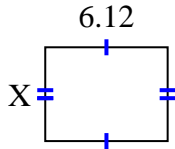


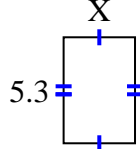


Encuentra el valor de X para cada figura. Cada figura está en centímetros (cm). No a escala.

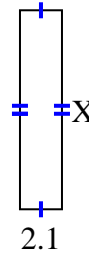
1) area =  $28.7028 \text{ cm}^2$



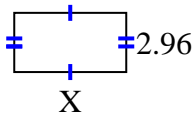
2) area =  $18.921 \text{ cm}^2$



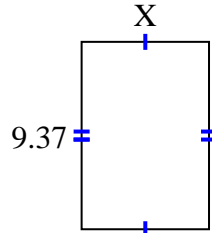
3) area =  $20.895 \text{ cm}^2$



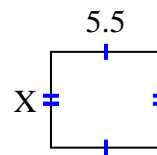
4) area =  $16.576 \text{ cm}^2$



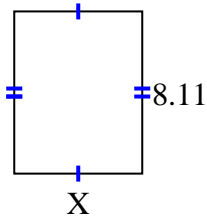
5) area =  $59.6869 \text{ cm}^2$



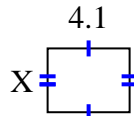
6) area =  $26.345 \text{ cm}^2$



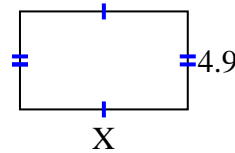
7) area =  $51.904 \text{ cm}^2$



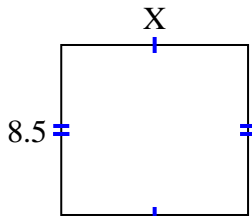
8) area =  $13.079 \text{ cm}^2$



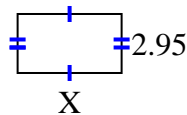
9) area =  $41.111 \text{ cm}^2$



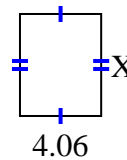
10) area =  $79.39 \text{ cm}^2$



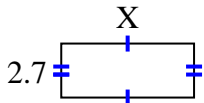
11) area =  $15.34 \text{ cm}^2$



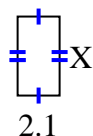
12) area =  $20.706 \text{ cm}^2$



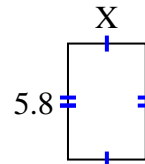
13) area =  $17.928 \text{ cm}^2$



14) area =  $8.295 \text{ cm}^2$



15) area =  $22.562 \text{ cm}^2$

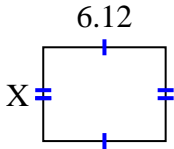
**Respuestas**

1. \_\_\_\_\_
2. \_\_\_\_\_
3. \_\_\_\_\_
4. \_\_\_\_\_
5. \_\_\_\_\_
6. \_\_\_\_\_
7. \_\_\_\_\_
8. \_\_\_\_\_
9. \_\_\_\_\_
10. \_\_\_\_\_
11. \_\_\_\_\_
12. \_\_\_\_\_
13. \_\_\_\_\_
14. \_\_\_\_\_
15. \_\_\_\_\_

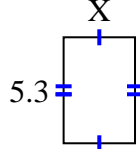


Encuentra el valor de X para cada figura. Cada figura está en centímetros (cm). No a escala.

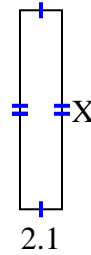
1)  $\text{area} = 28.7028 \text{ cm}^2$



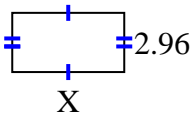
2)  $\text{area} = 18.921 \text{ cm}^2$



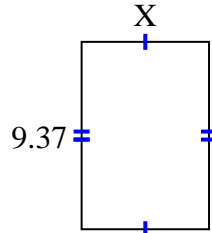
3)  $\text{area} = 20.895 \text{ cm}^2$



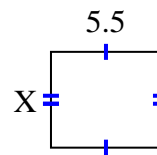
4)  $\text{area} = 16.576 \text{ cm}^2$



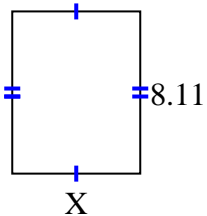
5)  $\text{area} = 59.6869 \text{ cm}^2$



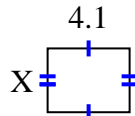
6)  $\text{area} = 26.345 \text{ cm}^2$



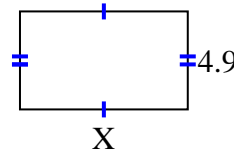
7)  $\text{area} = 51.904 \text{ cm}^2$



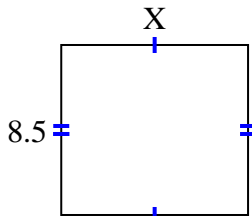
8)  $\text{area} = 13.079 \text{ cm}^2$



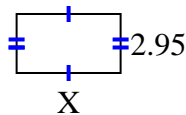
9)  $\text{area} = 41.111 \text{ cm}^2$



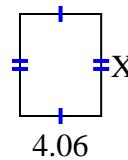
10)  $\text{area} = 79.39 \text{ cm}^2$



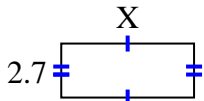
11)  $\text{area} = 15.34 \text{ cm}^2$



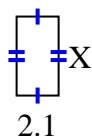
12)  $\text{area} = 20.706 \text{ cm}^2$



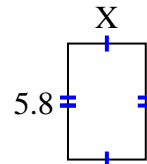
13)  $\text{area} = 17.928 \text{ cm}^2$



14)  $\text{area} = 8.295 \text{ cm}^2$



15)  $\text{area} = 22.562 \text{ cm}^2$

**Respuestas**1. 4.692. 3.573. 9.954. 5.65. 6.376. 4.797. 6.48. 3.199. 8.3910. 9.3411. 5.212. 5.113. 6.6414. 3.9515. 3.89