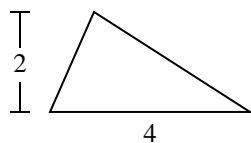




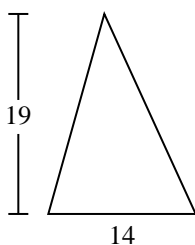
Encuentra el área de cada triángulo. Redondea tu respuesta a la décima más cercana.

Respuestas

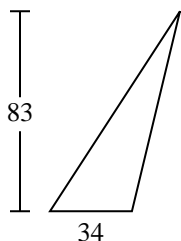
1)



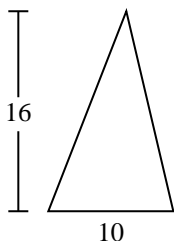
2)



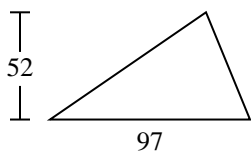
3)



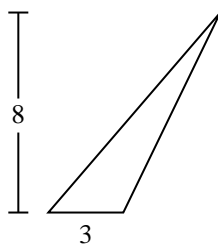
4)



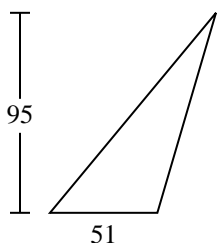
5)



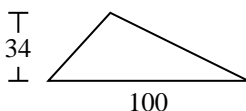
6)



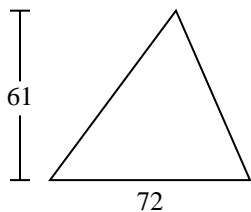
7)



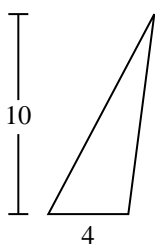
8)



9)



10)

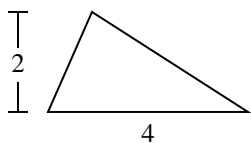


- 1. _____
- 2. _____
- 3. _____
- 4. _____
- 5. _____
- 6. _____
- 7. _____
- 8. _____
- 9. _____
- 10. _____

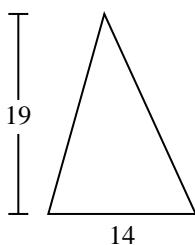


Encuentra el área de cada triángulo. Redondea tu respuesta a la décima más cercana.

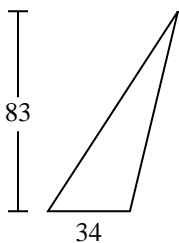
1)



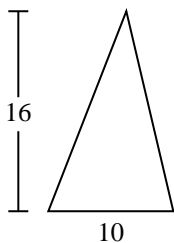
2)



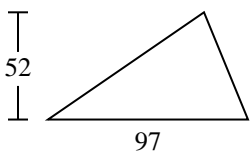
3)



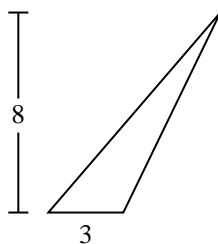
4)



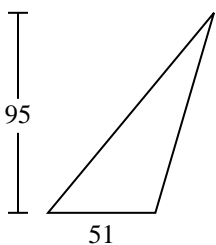
5)



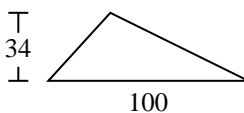
6)



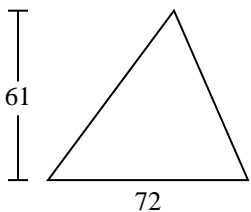
7)



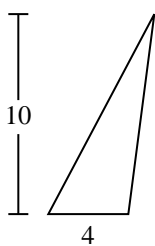
8)



9)



10)

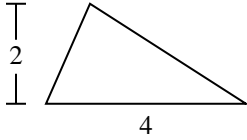
**Respuestas**1. 42. 1333. 1,4114. 805. 2,5226. 127. 2,422.58. 1,7009. 2,19610. 20



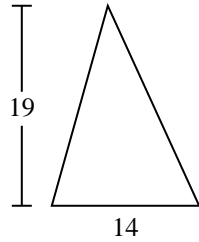
Encuentra el área de cada triángulo. Redondea tu respuesta a la décima más cercana.

133	4	1,411	2,522	2,196
1,700	2,422.5	80	12	

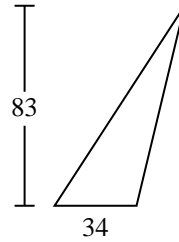
1)



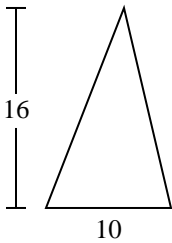
2)



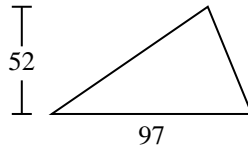
3)



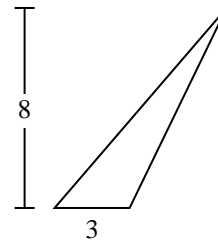
4)



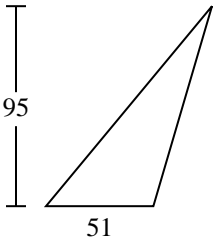
5)



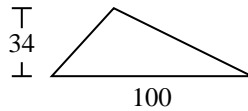
6)



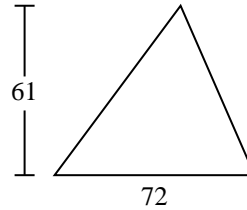
7)



8)



9)



Respuestas

1. _____
2. _____
3. _____
4. _____
5. _____
6. _____
7. _____
8. _____
9. _____