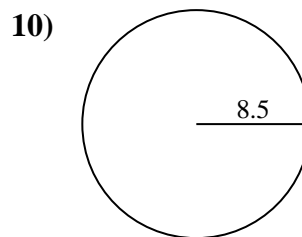
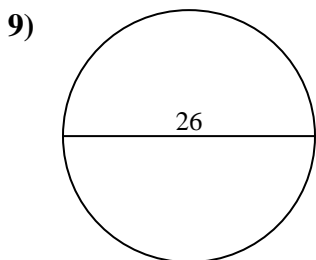
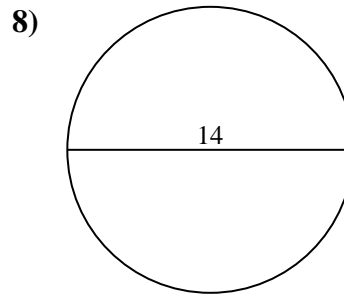
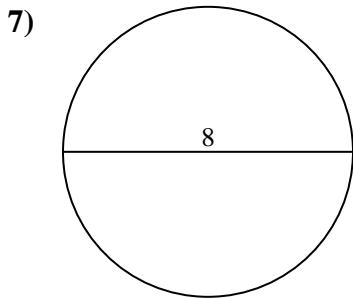
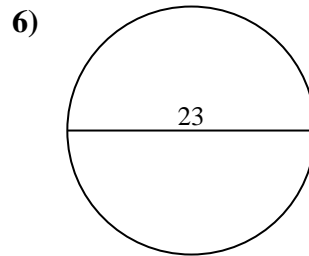
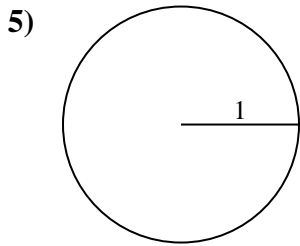
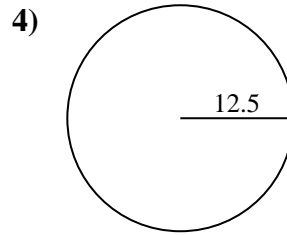
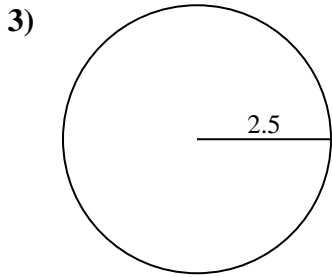
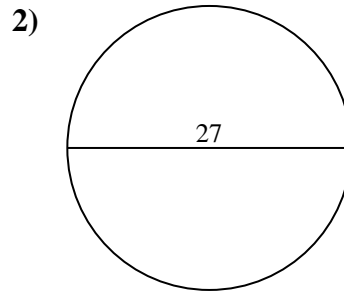
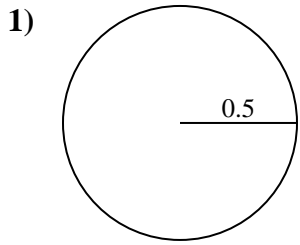




Encuentra el área y circunferencia de cada círculo. Los círculos no están a escala.

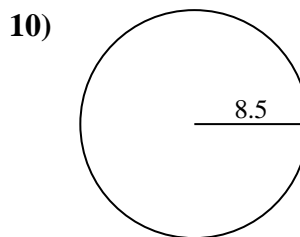
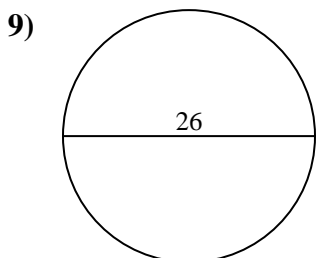
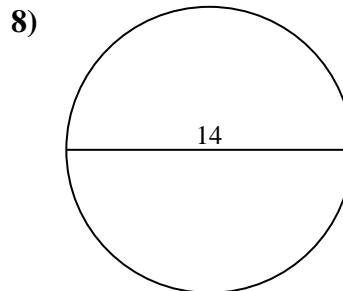
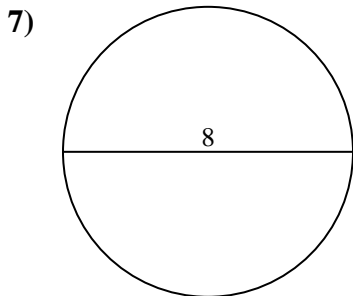
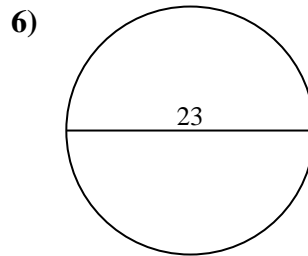
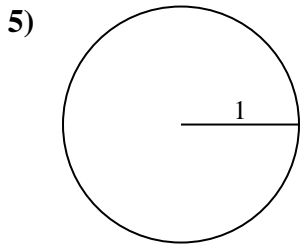
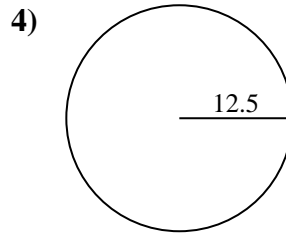
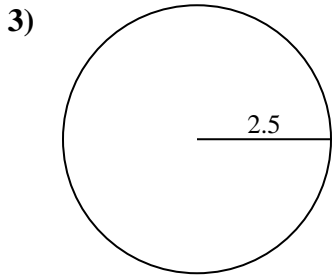
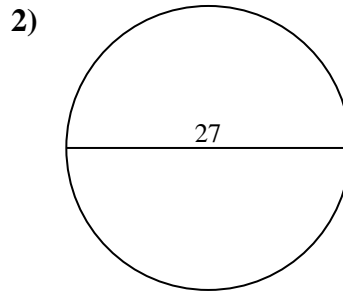
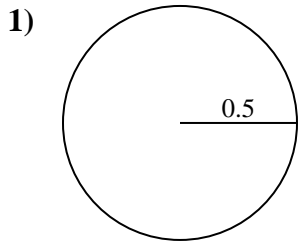


Respuestas

- 1. _____
- 2. _____
- 3. _____
- 4. _____
- 5. _____
- 6. _____
- 7. _____
- 8. _____
- 9. _____
- 10. _____



Encuentra el área y circunferencia de cada círculo. Los círculos no están a escala.

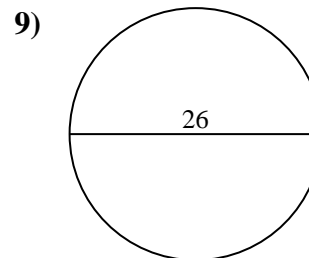
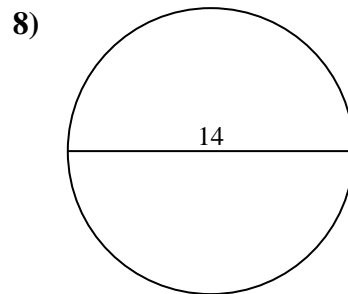
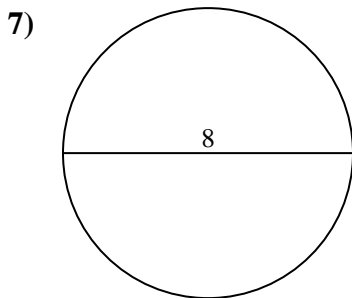
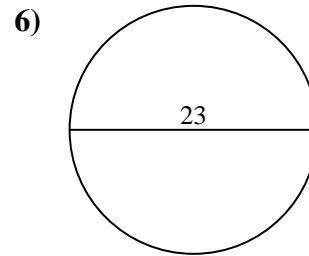
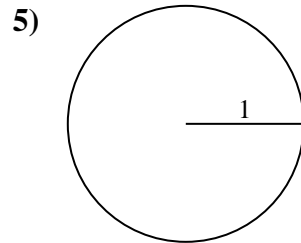
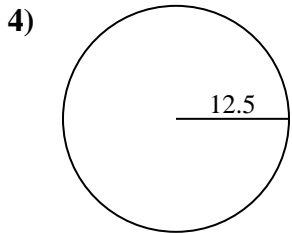
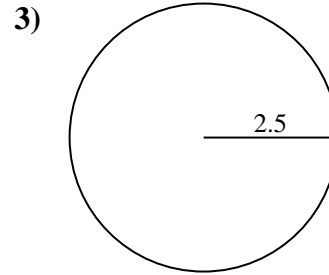
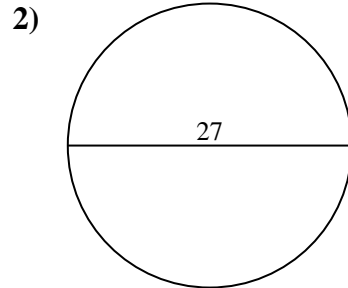
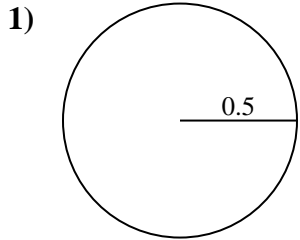
**Respuestas**

1.	<u>0.8</u>	<u>3.1</u>
2.	<u>572.6</u>	<u>84.8</u>
3.	<u>19.6</u>	<u>15.7</u>
4.	<u>490.9</u>	<u>78.5</u>
5.	<u>3.1</u>	<u>6.3</u>
6.	<u>415.5</u>	<u>72.3</u>
7.	<u>50.3</u>	<u>25.1</u>
8.	<u>153.9</u>	<u>44</u>
9.	<u>530.9</u>	<u>81.7</u>
10.	<u>227</u>	<u>53.4</u>



Encuentra el área y circunferencia de cada círculo. Los círculos no están a escala.

415.5	490.9	50.3	84.8	6.3
3.1	81.7	44	19.6	530.9
78.5	15.7	153.9	72.3	0.8
25.1	3.1	572.6		



Respuestas

1. _____
2. _____
3. _____
4. _____
5. _____
6. _____
7. _____
8. _____
9. _____