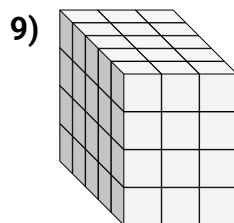
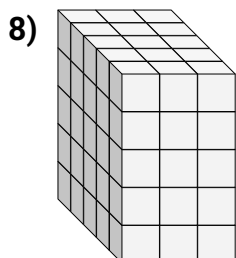
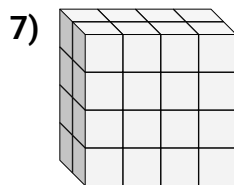
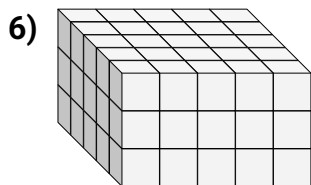
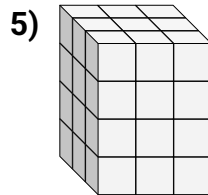
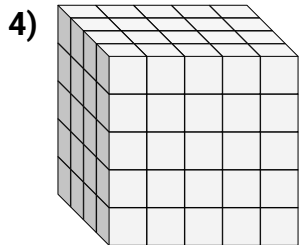
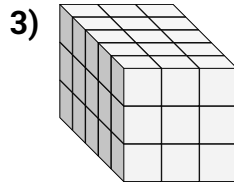
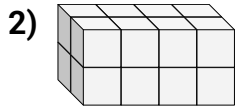
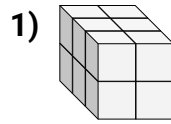
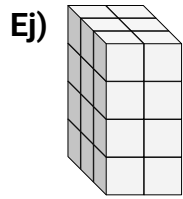




Encuentra el largo, ancho y alto del prisma rectangular. Después encuentra el volumen.



Respuestas

Ej. 3 2 4 24

1. _____

2. _____

3. _____

4. _____

5. _____

6. _____

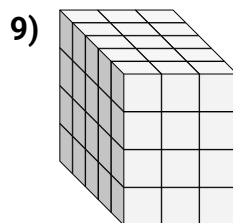
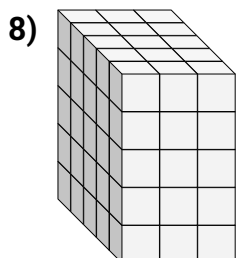
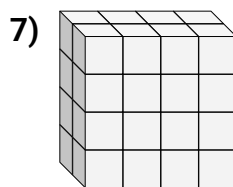
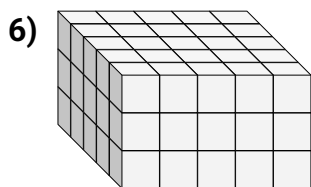
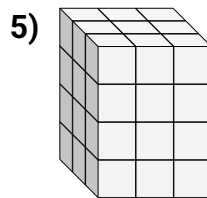
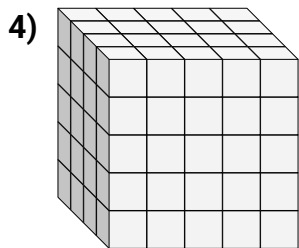
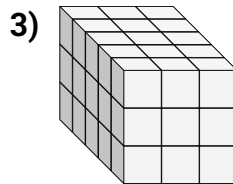
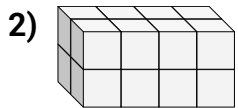
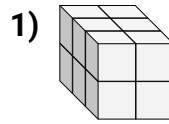
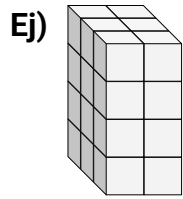
7. _____

8. _____

9. _____



Encuentra el largo, ancho y alto del prisma rectangular. Después encuentra el volumen.

**Respuestas**

Ej. 3 2 4 24

1. 3 2 2 12

2. 2 4 2 16

3. 5 3 3 45

4. 4 5 5 100

5. 3 3 4 36

6. 5 5 3 75

7. 2 4 4 32

8. 5 3 5 75

9. 5 3 4 60