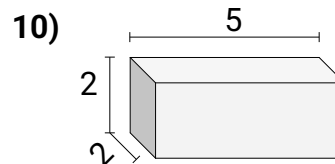
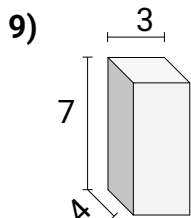
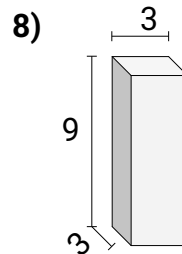
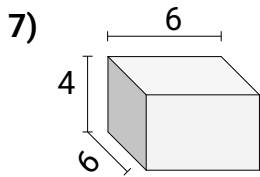
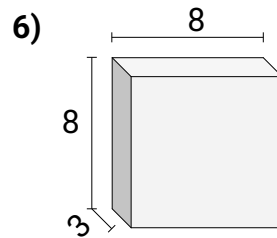
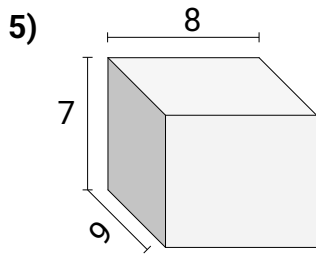
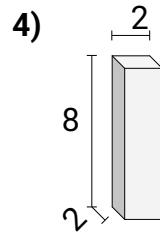
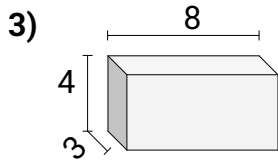
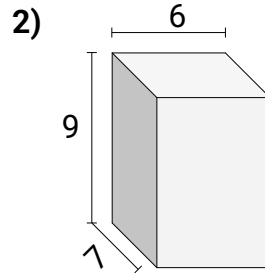
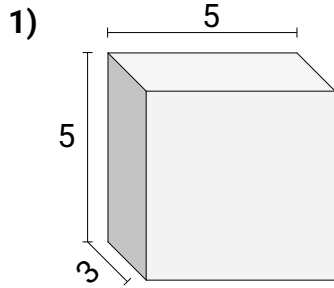




Encontrando el volumen de prismas Rectangulares Nombre:

Encuentra el volumen de cada prisma rectangular. Mide en cm (no estan en escala).

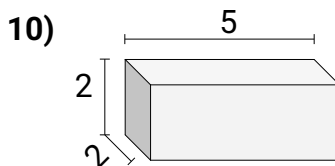
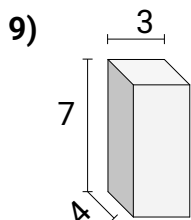
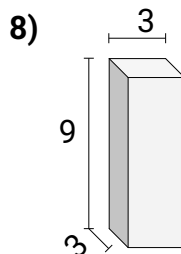
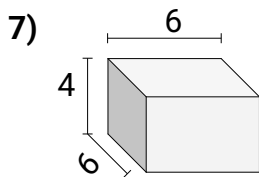
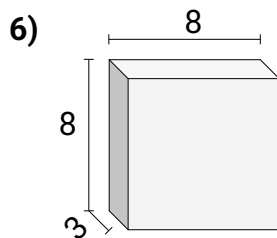
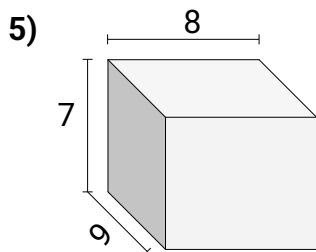
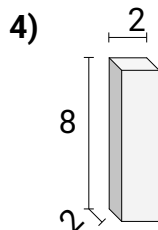
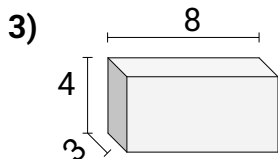
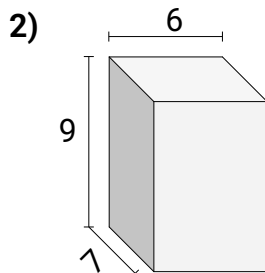
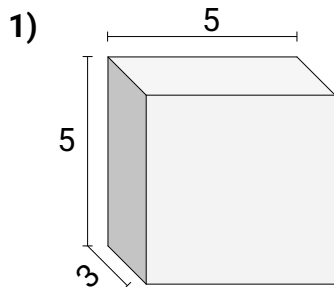
Respuestas



1. _____
2. _____
3. _____
4. _____
5. _____
6. _____
7. _____
8. _____
9. _____
10. _____



Encuentra el volumen de cada prisma rectangular. Mide en cm (no estan en escala).

Respuestas

1. **75**
2. **378**
3. **96**
4. **32**
5. **504**
6. **192**
7. **144**
8. **81**
9. **84**
10. **20**