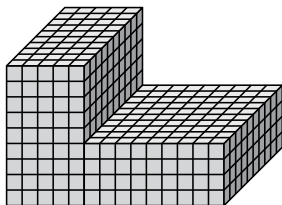




Encuentra el volumen total de cada figura. La medida es en cm (no a escala).

Respuestas

1)



1. _____

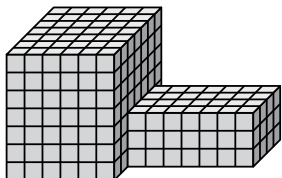
2. _____

3. _____

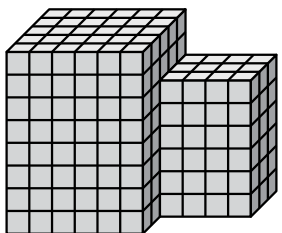
4. _____

5. _____

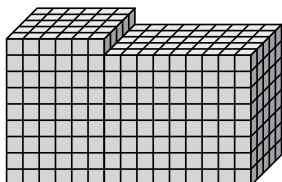
2)



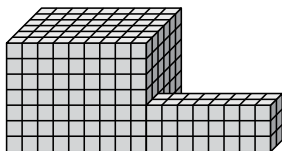
3)



4)



5)

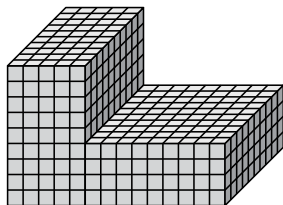




Encuentra el volumen total de cada figura. La medida es en cm (no a escala).

Respuestas

1)



$$5 \times 10 \times 9 = 450$$

$$9 \times 10 \times 4 = 360$$

1. **810 cm^3**

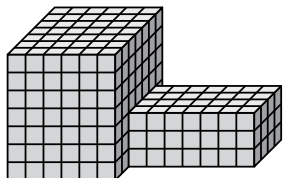
2. **378 cm^3**

3. **312 cm^3**

4. **630 cm^3**

5. **426 cm^3**

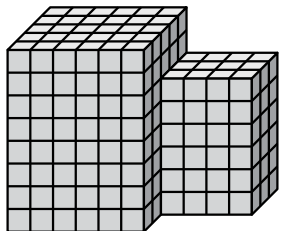
2)



$$6 \times 7 \times 7 = 294$$

$$7 \times 4 \times 3 = 84$$

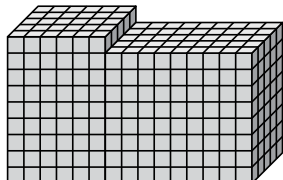
3)



$$6 \times 5 \times 8 = 240$$

$$4 \times 3 \times 6 = 72$$

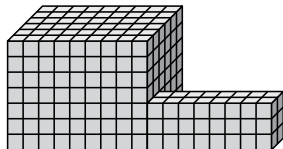
4)



$$6 \times 5 \times 9 = 270$$

$$9 \times 5 \times 8 = 360$$

5)



$$9 \times 6 \times 7 = 378$$

$$8 \times 2 \times 3 = 48$$