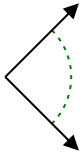




Determina si el ángulo mostrado es agudo, obtuso, recto o llano.

Respuestas

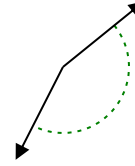
Ej)



1)

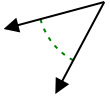


2)

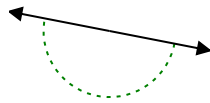


Ej. **derecho**

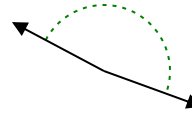
3)



4)



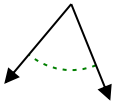
5)



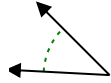
1. _____

2. _____

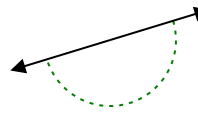
6)



7)



8)



3. _____

4. _____

5. _____

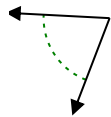
6. _____

7. _____

9)



10)



11)

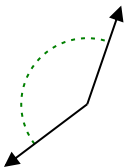


8. _____

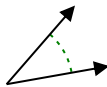
9. _____

10. _____

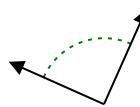
12)



13)



14)



11. _____

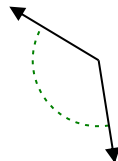
12. _____

13. _____

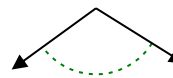
15)



16)



17)

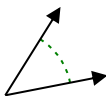


14. _____

15. _____

16. _____

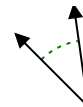
18)



19)



20)



17. _____

18. _____

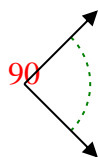
19. _____

20. _____

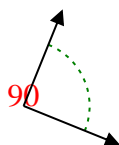


Determina si el ángulo mostrado es agudo, obtuso, recto o llano.

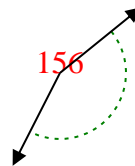
Ej)



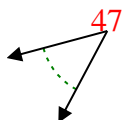
1)



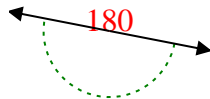
2)



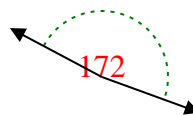
3)



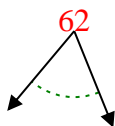
4)



5)



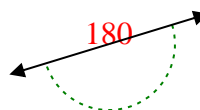
6)



7)



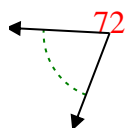
8)



9)



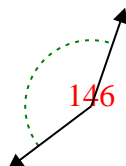
10)



11)



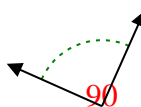
12)



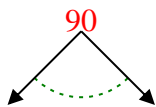
13)



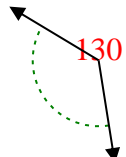
14)



15)



16)



17)



18)



19)



20)



Respuestas

Ej. derecho

1. derecho

2. obtuso

3. agudo

4. recto

5. obtuso

6. agudo

7. agudo

8. recto

9. agudo

10. agudo

11. obtuso

12. obtuso

13. agudo

14. derecho

15. derecho

16. obtuso

17. obtuso

18. agudo

19. obtuso

20. agudo